

RRB NTPC CBT 2/GROUP D



REASONING

अबकी बार **RAILWAY** पार

Complete Revision



LIVE 7:30 PM





Don't Let Your Studies Get Impacted By COVID-19 Pandemic

Stay Home & Study Online With Mahendras Hybrid Model

Features

- Offline Classes ↔ Live Interactive Online Classes
- Same Faculty
- Same Batch
- Same Batch Timing
- Online Library Facility
- Recorded Video
- PDFs
- Classes In Both Model

CONTACT US:

1800-103-5225

www.mahendras.org





UPCOMING ONLINE BATCHES

December 2021

01 Dec 2021

08:00 AM to 10:00 AM

LIVE PREMIUM GREEN CARD
(BANK-PO & CLERK)

05:30 PM to 07:30 PM

LIVE PREMIUM GREEN CARD
(BANK-PO & CLERK)

01:00 PM to 03:00 PM

LIVE PREMIUM SILVER CARD
(SSC CGL & CHSL)

BILINGUAL

08 Dec 2021

10:30 AM to 12:30 PM

LIVE PREMIUM GREEN CARD
(BANK-PO & CLERK)

03:00 PM to 05:00 PM

LIVE PREMIUM GREEN CARD
(BANK-PO & CLERK)

08:00 AM to 10:00 AM

LIVE PREMIUM SILVER CARD
(SSC CGL & CHSL)

BILINGUAL

15 Dec 2021

01:00 PM to 03:00 PM

LIVE PREMIUM GREEN CARD
(BANK-PO & CLERK)

10:30 AM to 12:30 PM

LIVE PREMIUM SILVER CARD
(SSC CGL & CHSL)

BILINGUAL

22 Dec 2021

08:00 AM to 10:00 AM

LIVE PREMIUM GREEN CARD
(BANK-PO & CLERK)

07:30 PM to 09:30 PM

LIVE PREMIUM SILVER CARD
(SSC CGL & CHSL)

BILINGUAL

29 Dec 2021

10:30 AM to 12:30 PM

LIVE PREMIUM GREEN CARD
(BANK-PO & CLERK)

07:30 PM to 09:30 PM

LIVE PREMIUM GREEN CARD
(BANK-PO & CLERK)

03:00 PM to 05:00 PM

LIVE PREMIUM SILVER CARD
(SSC CGL & CHSL)

BILINGUAL



RRB NTPC Stage-2 Exam Pattern

Sections	No. of Questions	Total Marks	Duration
Mathematics	35	35	90 minutes
General Intelligence and Reasoning	35	35	
General Awareness	50	50	
Total	120	120	



🌸 PUJA KUNDU 🌸 13 hours ago

The answer is ---:3:35(2^3+3^3).....sandar session sir and thank you sir for the session 🙏

👍 1 🗨️ REPLY

▶ [View reply from Mahendras : Online Videos For Govt. Exams](#)



SANIA _____ 4 hours ago

dhaansu session sir 🙏🙏

3:35🔥🔥🔥🔥

👍 1 🗨️ REPLY



Devesh Trivedi 12 hours ago

7 ka cube 343

6 ka cube 216

$343+216= 955$

3 ka cube 27...

Read more

👍 🗨️ REPLY

▶ [View reply from Mahendras : Online Videos For Govt. Exams](#)



Chhavi Saxena 13 hours ago

Home Work answer is option C

Nice session sir 🙏🙏

👍 🗨️ REPLY

▶ [View reply from Mahendras : Online Videos For Govt. Exams](#)



Ankit Vish 11 hours ago

Answer. C

Very nice session sir 🙏🙏



1



REPLY

▶ [View reply from Mahendras : Online Videos For Govt. Exams](#)



Mirza Sahil jatt 12 hours ago

C

3:35



REPLY



puspranjan singh 12 hours ago

Good good good sessions



REPLY



Masum Idki 😊 12 hours ago

Option c



REPLY

▶ [View reply from Mahendras : Online Videos For Govt. Exams](#)



Kapil Bhagat 13 hours ago

CCC



REPLY

Find the missing :-

$$7 : 559 :: ? : ?$$

1. 11 : 786
2. 9 : 593
3. 3 : 35
4. 5 : 89



In a Certain code **TAGS** is written as **61**, than find the code for **MEANS**?

एक निश्चित कोड में **TAGS** का कोड **61** लिखा गया है तो **MEANS** का कोड क्या होगा ?

- (1) 71
- (2) 72
- (3) 83
- (4) 79



Find the missing :-

$$441 : 7 :: 361 : ?$$

- (A) 8
- (B) 9
- (C) 10
- (D) 12



Find the missing :-

1221: io :: 1509 : ?

- (A) oo
- (B) ie
- (C) io
- (D) ii



Find the missing :-

RAT : 912 :: HUT : ?

- (A) 82020**
- (B) 833**
- (C) 1962**
- (D) 823**



Find the option which should replace (?)



PQRS : OOQQ :: DEFG : ?

- (A) CCDD**
- (B) CCFF**
- (C) BBDD**
- (D) CCEE**

Find the option which should replace (?)

India : Lotus :: Hongkong : ?

भारत: कमल :: हांगकांग:?

- (A) Bauhinia / बहुनिया
- (B) Asmine / अस्मिन
- (C) Rose / रोज
- (D) Marigold / मैरीगोल्ड



Find the option which should replace (?)

$$23 : 35 :: 42 : ?$$

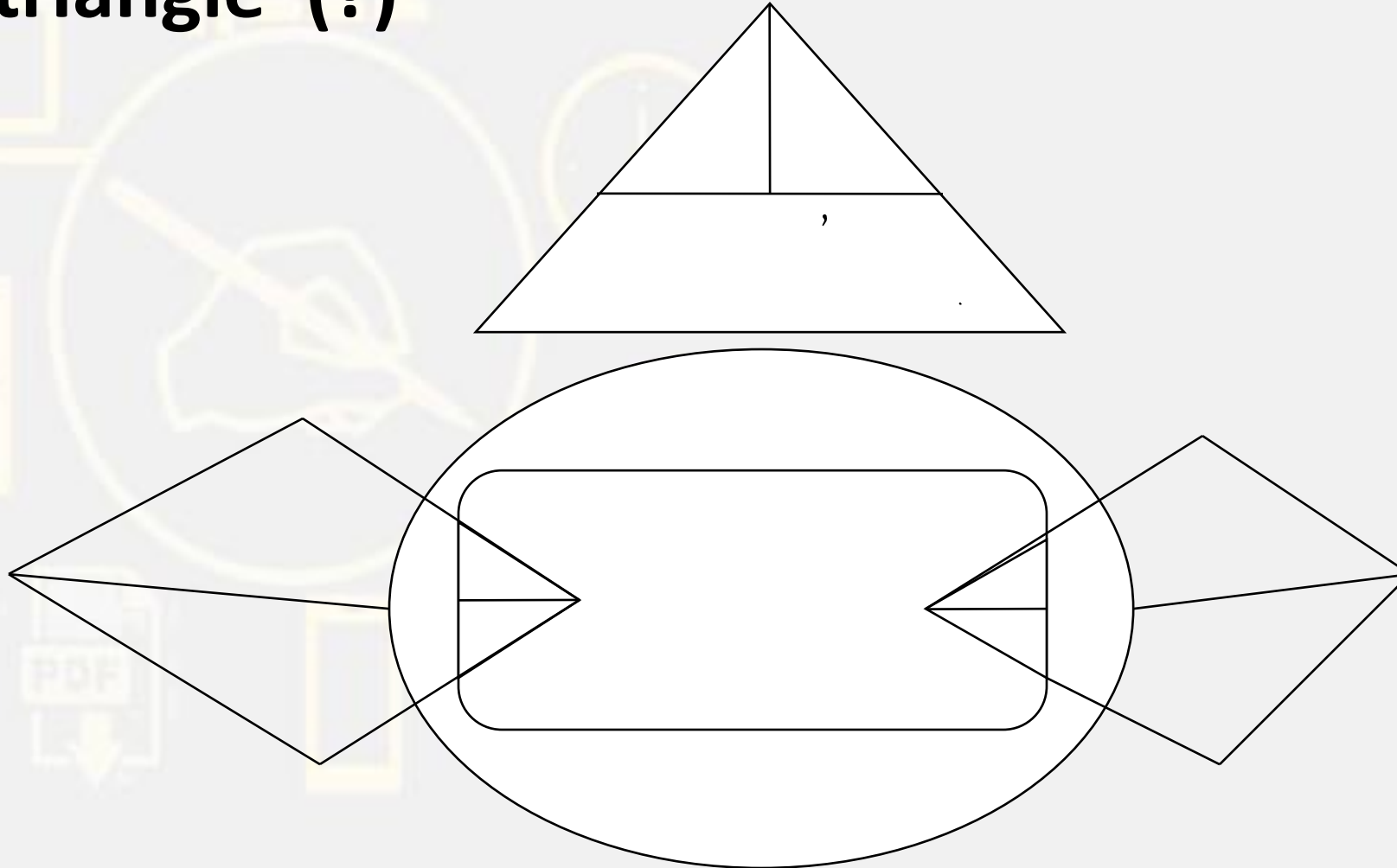
- (A) 107
- (B) 56
- (C) 72
- (D) 87



Find the triangle (?)



- 1. 10
- 2. 12
- 3. 14
- 4. 16



Find the option which should replace (?)

$$12 : 7 :: 16 : ?$$


- (A) 7
- (B) 8
- (C) 9
- (D) 10



Find the rectangle (?)



1. 15
2. 18
3. 17
4. 16



Find the missing term(?)

Candle : Wick :: ?

मोमबत्ती : बाती :: ?

A. Hammer : Nail / हथौड़ा : कील

B. Light : Bulb / लाइट : बल्ब

C. Oven : Fire / ओवन : आग

D. Bicycle : Wheel / साइकिल : पहिया

20

Find the option which should replace (?)

540 : 981 :: 145 : ?

- (A) 784**
- (B) 576**
- (C) 255**
- (D) 921**



Find the option which should replace (?)

$$16 : 13 :: 64 : ?$$

- (A) 35
- (B) 46
- (C) 92
- (D) 66



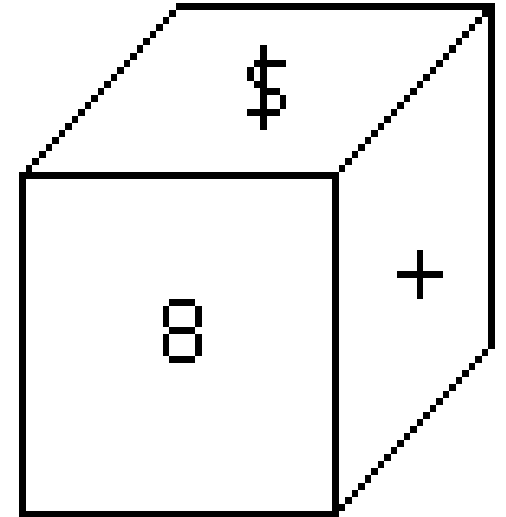
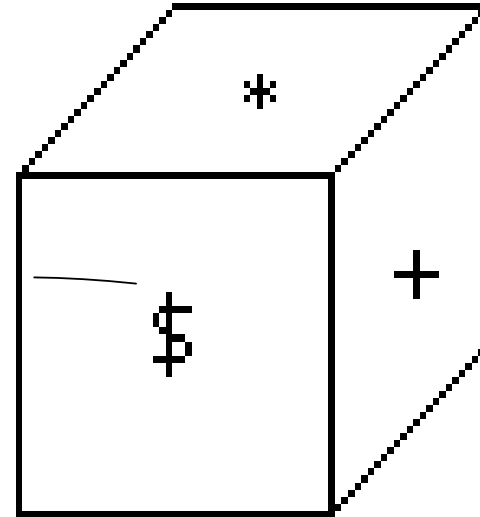
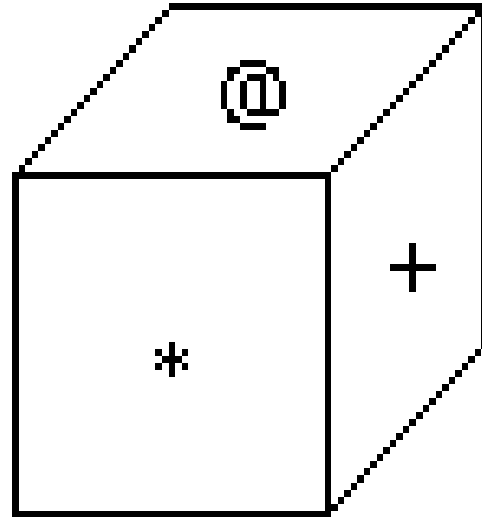
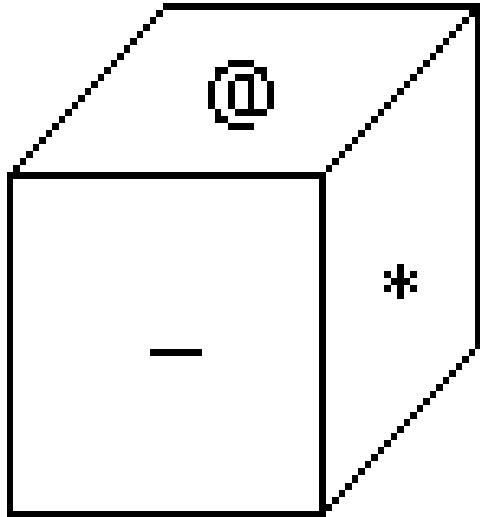
Find the option which should replace (?)

1 5 : 1 :: 15 21 : ?

- (A) A
- (B) B
- (C) C
- (D) D



Which symbol will be on the face opposite to the face with symbol * ?



A.@

B.\$

C.8

D.+



Find the ODD one(?)

- (A) Cricket / क्रिकेट
- (B) Baseball / बेसबॉल
- (C) Hockey / हॉकी
- (D) Boxing / मुक्केबाजी

