

RRB NTPC CBT 2/GROUP D



REASONING

अबकी बार **RAILWAY** पार

Complete Revision



LIVE 7:30 PM





Don't Let Your Studies Get Impacted By COVID-19 Pandemic

Stay Home & Study Online With Mahendras Hybrid Model

Features



Offline Classes



Live Interactive Online Classes



Same Faculty



Same Batch



Same Batch Timing



Online Library Facility



Recorded Video



PDFs



Classes In Both Model

CONTACT US:

1800-103-5225

www.mahendras.org





UPCOMING ONLINE BATCHES

January 2022

05 Jan 2022

08:00 AM to 10:00 AM

BANK ONLINE LIVE CLASS

10:30 AM to 12:30 PM

SSC ONLINE LIVE CLASS

01:00 PM to 03:00 PM

SSC ONLINE LIVE CLASS

05:30 PM to 07:30 PM

BANK ONLINE LIVE CLASS

BILINGUAL

12 Jan 2022

08:00 AM to 10:00 AM

SSC ONLINE LIVE CLASS

10:30 AM to 12:30 PM

BANK ONLINE LIVE CLASS

03:00 PM to 05:00 PM

BANK ONLINE LIVE CLASS

05:30 PM to 07:30 PM

SSC ONLINE LIVE CLASS

BILINGUAL

19 Jan 2022

08:00 AM to 10:00 AM

BANK ONLINE LIVE CLASS

01:00 PM to 03:00 PM

BANK ONLINE LIVE CLASS

03:00 PM to 05:00 PM

SSC ONLINE LIVE CLASS

07:30 PM to 09:30 PM

SSC ONLINE LIVE CLASS

BILINGUAL

27 Jan 2022

10:30 AM to 12:30 PM

BANK ONLINE LIVE CLASS

07:30 PM to 09:30 PM

BANK ONLINE LIVE CLASS

08:00 AM to 10:00 AM

SSC ONLINE LIVE CLASS

01:00 PM to 03:00 PM

SSC ONLINE LIVE CLASS

BILINGUAL



RRB NTPC Stage-2 Exam Pattern

Sections	No. of Questions	Total Marks	Duration
Mathematics	35	35	90 minutes
General Intelligence and Reasoning	35	35	
General Awareness	50	50	
Total	120	120	



🌸 PUJA KUNDU 🌸 16 hours ago

1700---- Century year.....thank you sir for the session 🔥🔥🙏🙏

👍 1 🗨️ REPLY

▼ [View reply from Mahendras : Online Videos For Govt. Exams](#)



Radha Garima 15 hours ago

Answer : Century year
Nice session sir 🙏🙏

👍 1 🗨️ REPLY

▼ [View reply from Mahendras : Online Videos For Govt. Exams](#)



Viśhñù Güptâ 15 hours ago

Non leap year right ans
Very nice session sir Thank you 🙏 sir love you 😊 sir

👍 1 🗨️ REPLY

▼ [View reply from Mahendras : Online Videos For Govt. Exams](#)



ANGAD KUMAR 15 hours ago

HW = non leapyear
Thank you so much sir
👍👍🌸🌸🌹🌹🌸🌸

👍 1 🗨️ REPLY

▼ [View reply from Mahendras : Online Videos For Govt. Exams](#)

P

Pardeep Dhedhar 16 hours ago

Good evning sir ji



REPLY



Shruti Jain 3 hours ago

Non leap year. 🙏🙏



REPLY

C

Chhavi Saxena 16 hours ago

Century year 🙏🙏



1



REPLY

View reply from Mahendras : Online Videos For Govt. Exams

A

Archita Dubey 12 hours ago

1700 is a century year



1



REPLY

View reply from Mahendras : Online Videos For Govt. Exams

D

DEEKSHA SHARMA 15 hours ago

century year



1



REPLY

View reply from Mahendras : Online Videos For Govt. Exams

a

arun ch mandal 13 hours ago

ans is century year thank you sir



1



REPLY

View reply from Mahendras : Online Videos For Govt. Exams



ANNU LATA 13 hours ago

1700 century year

1 [REPLY](#)

[View reply from Mahendras : Online Videos For Govt. Exams](#)



404_error~ 16 hours ago

Century year

1 [REPLY](#)

[View reply from Mahendras : Online Videos For Govt. Exams](#)



Archita Dubey 16 hours ago

Leap year

1 [REPLY](#)

[View reply from Mahendras : Online Videos For Govt. Exams](#)



Kapil Bhagat 16 hours ago

Non leap year

[REPLY](#)



puspranjan singh 16 hours ago

None leap year

1 [REPLY](#)

[View reply from Mahendras : Online Videos For Govt. Exams](#)

Find the option which should replace (?)

1943 : Non-leap year :: 1700 : ?

- A. Leap year**
- B. Non – leap year**
- C. Century year**
- D. Leap century year**



Q In each of the following question, four numbers are given, out of which three are alike in some manner while the fourth one is different. Choose the odd one.

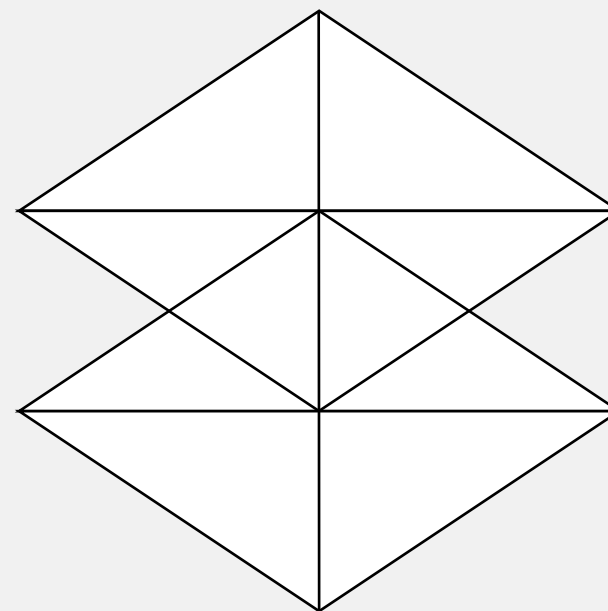
- (A) 16-64 (B) 17-68
(C) 20-100 (D) 21-84

प्र. निम्नलिखित में से प्रत्येक प्रश्न में, चार संख्याएं दी गयी हैं, जिनमें से तीन एक जैसे हैं, जबकि चौथा एक अलग है। दिए गए विकल्पों में से विभिन्न का चयन करें।

- (A) 16-64 (B) 17-68
(C) 20-100 (D) 21-84

Find number of triangle in the given figure ?

दी गई आकृति में त्रिभुज की संख्या ज्ञात कीजिए?



- (A) 13**
- (B) 22**
- (C) 24**
- (D) 16**

Find the missing one (?)

$$4 : 32 :: 8 : ?$$

- (A) 11
- (B) 7
- (C) 5
- (D) 9



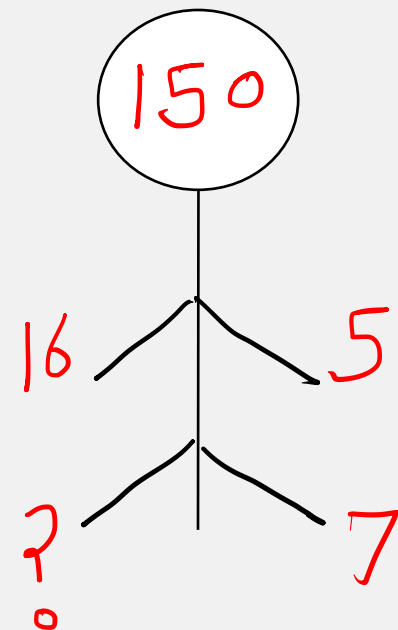
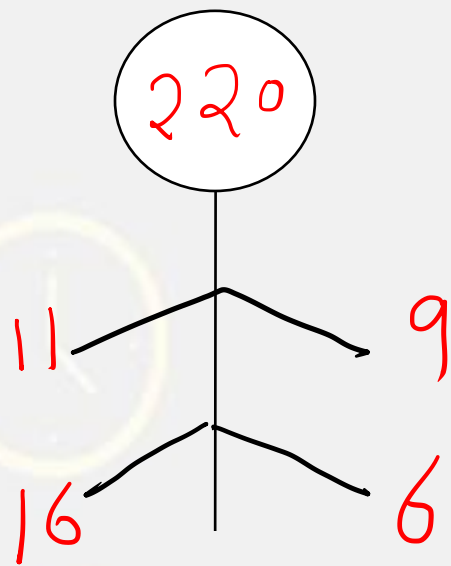

Find the missing one (?)

Bees : Hum :: Owls : ?

मधुमक्खियों: गुनगुनाहट :: उल्लू:?

- (A) Roar / गर्जन
- (B) Talk / बातचीत
- (C) Hiss / फुफकार
- (D) Hoot / बोली





- (A) 11
- (B) 12
- (C) 10
- (D) 13



Find the option which should replace (?)

SIT : 8

TOY : 10

VIP : ?

A. 11

B. 15

C. 16

D. 7



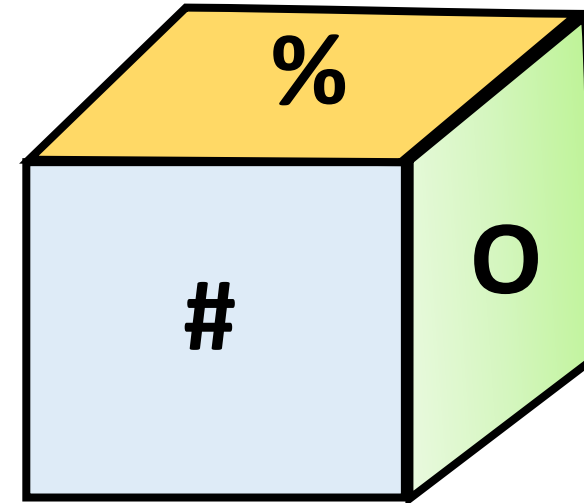
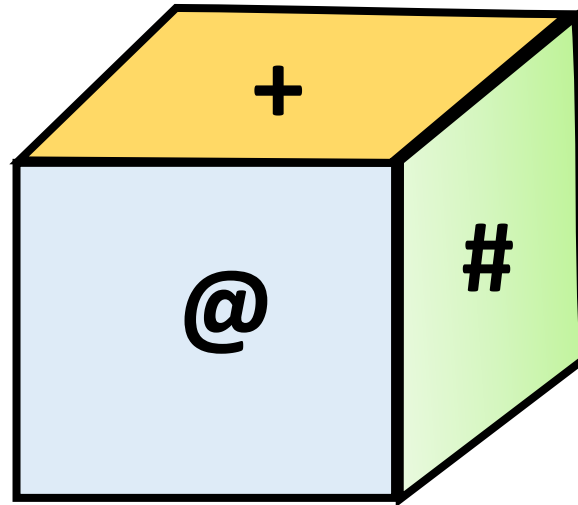
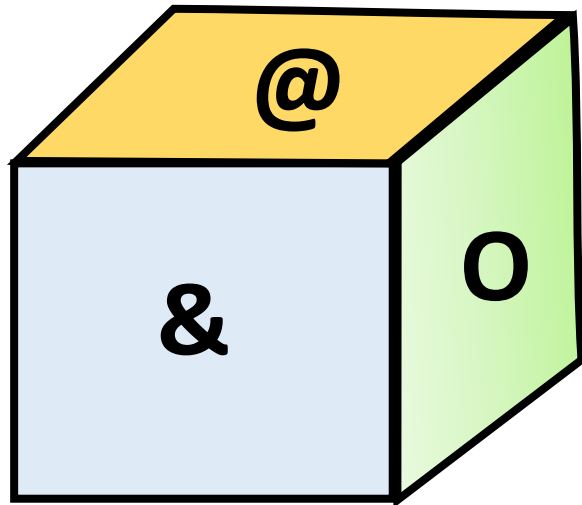
Three positions of dice are shown. What will appear on the opposite to the face containing 0? पासा की तीन स्थितियां दिखाई गई है तो ज्ञात कीजिए की '0' के विपरीत सतह पर क्या होगा?

(A) #

(B) +

(C) %

(D) &



Find the option which should replace (?)

JK : 87 :: RS : ?

- A. 98
- B. 109
- C. 110
- D. 89



Find the option which should replace (?)

$$4 : 71 :: 7 : ?$$

- (A) 49
- (B) 05
- (C) 51
- (D) 52



Find the option which should replace (?)

127, 63, 31, 15, 7, ?

(A) 2

(B) 3

(C) 5

(D) 4



Find the missing one (?)

$$85 : 20 :: 139 : ?$$

- (A) 124
- (B) 117
- (C) 180
- (D) 109



Find the option which should replace (?)

5 , 6 , 15 , ? , 89 , 170 , 291

- (A) 40**
- (B) 45**
- (C) 50**
- (D) 55**

