



Don't Let Your Studies Get Impacted By COVID-19 Pandemic

Stay Home & Study Online With Mahendras Hybrid Model

Features



Offline Classes



Live Interactive Online Classes



Same Faculty



Same Batch



Same Batch Timing



Online Library Facility



Recorded Video



PDFs



Classes In Both Model

CONTACT US:

1800-103-5225

www.mahendras.org





UPCOMING ONLINE BATCHES

August 2021

04 AUG 2021

10:30 AM to 12:30 PM

LIVE PREMIUM GREEN CARD
(BANK PO & CLERK)

07:30 PM to 09:30 PM

LIVE PREMIUM SILVER CARD
(SSC CGL & CHSL)

07:30 PM to 09:30 PM

LIVE CLASS COURSE
(MATHS)

03:00 PM to 05:00 PM

LIVE CLASS COURSE
(UP SI)

BILINGUAL

11 AUG 2021

01:00 PM to 03:00 PM

LIVE CLASS COURSE
(TET & CTET)

05:30 PM to 07:30 PM

LIVE PREMIUM GREEN CARD
(BANK PO & CLERK)

08:00 AM to 10:00 AM

LIVE CLASS COMPLETE COURSE
(SSC GD)

BILINGUAL

18 AUG 2021

08:00 AM to 10:00 AM

LIVE PREMIUM GREEN CARD
(BANK PO & CLERK)

01:00 PM to 03:00 PM

LIVE PREMIUM SILVER CARD
(SSC CGL & CHSL)

BILINGUAL

25 AUG 2021

07:30 PM to 09:30 PM

LIVE PREMIUM GREEN CARD
(BANK PO & CLERK)

BILINGUAL



The Staff Selection Commission has decided to re-schedule its following examinations as per the details given below:

S. No.	Name of Examination	Revised Schedule
1.	Sub-Inspector in Delhi Police, CAPFs and ASI in CISF Examination (Paper-II), 2019	26.07.2021
2.	Combined Higher Secondary (10+2) Level Examination (Tier-I), 2020 - For left-over candidates	04.08.2021-12.08.2021
3.	Combined Graduate Level Examination (Tier-I), 2020	13.08.2021-24.08.2021

S No	Name of Examination	Paper/ Stage	Schedule of Examination
1	Combined Graduate Level Examination-2019	Skill Test	15.09.2021 to 16.09.2021
2	Junior Engineer (Civil, Mechanical, Electrical and Quantity Surveying & Contracts) Examination, 2020	Paper-II	26.09.2021
3	Multi Tasking (Non-Technical) Staff Examination, 2020	Paper-I	05.10.2021 to 20.10.2021
4	Stenographer Grade 'C' and 'D' Examination, 2019	Skill Test	21.10.2021 To 22.10.2021

SSC CGL

(13TH August 2021 all Shift Exam Analysis)

REASONING

SSC CGL (13TH August 2021 all Shift Exam Analysis) REASONING :-

Topics	Q . No	
Alphabet & Logical order of words	2-3	
Analogy and Classification	5-6	
Blood Relation	1-2	
Coding Decoding	2-3	
Missing Number	3-4	
Non – verbal	4	
Syllogism	3	
Figure counting	2-3	
Venn Diagram & Dice	2	
Series	4-5	
Mathematical Operation & Arithmetical Reasoning	2	

SSC CGL (13TH August 2021 all Shift Exam Analysis) REASONING :-

Topics	Q . No	
Direction		
Order and Ranking		
Sitting Arrangement		
Puzzle		
Clock		
Calendar		
Matrix		
Statement and Assumption		
Statement and Conclusion		

Find the option which should replace (?)

Tree : Forest :: Grass : ?

वृक्ष: वन :: घास:?

- (A) Lawn / मैदान
- (B) Pond / तालाब
- (C) Next / घाँसला
- (D) Floor / तल



Find the option which should replace (?)

245 : 121 :: 357 : ?

- (A) 233
- (B) 225
- (C) 216
- (D) 456



Find the option which should replace (?)

EGOU : 9 :: ABDH : ?

- (A) 15
- (B) 16
- (C) 17
- (D) 18



Find the option which should replace (?)

F : 216 :: L : ?

- (A) 144
- (B) 1728
- (C) 1729
- (D) 1628



Find the option which should replace (?)

9 : 28 :: 56 : ?

- (A) 3
- (B) 18
- (C) 112
- (D) 169



Find the option which should replace (?)

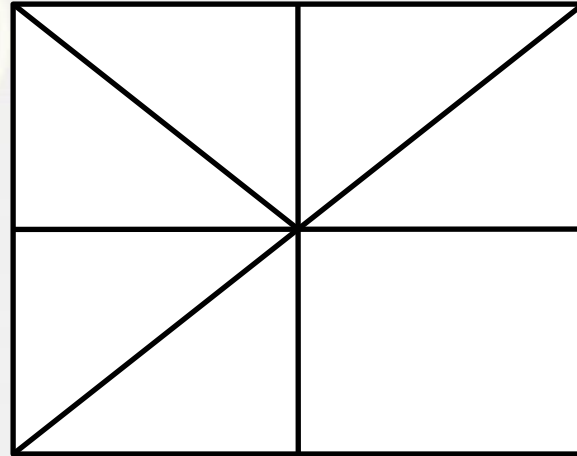
12 : 35 :: 16 : ?

- (A) 78
- (B) 32
- (C) 55
- (D) 63



Find the number of triangles in the given figure.

दिए गए आंकड़े में त्रिकोणों की संख्या ज्ञात कीजिए।



- A.8
- B.10
- C.12
- D.NOT

Find the option which should replace (?)

Pride : Lion :: Shoal : ?

- (A) Teacher / अध्यापक
- (B) Student / छात्र
- (C) Self – respect / आत्म सम्मान
- (D) Fish / मछली



Find the option which should replace (?)

RUST : 9687 :: TSUR : ?

- (A) 7896
- (B) 7869
- (C) 7689
- (D) 6789



Find the option which should replace (?)

HOME : KOQI :: TOY : ?

- (A) WOA
- (B) ZOX
- (C) VOB
- (D) WOB



Find the option which should replace (?)

23 : 31 :: 36 : ?

- (A) 216
- (B) 248
- (C) 225
- (D) 217



Find the option which should replace (?)

$$4 : 9 :: 25 : ?$$

- (A) 64
- (B) 49
- (C) 125
- (D) 51



Find the option which should replace (?)

PO : 2321 :: SU : ?

- (A) 1921**
- (B) 2024**
- (C) 2225**
- (D) 2627**



Find the option which should replace (?)

Oar : Rowboat :: Foot : ?

चप्पू : नाव :: पैर

- (A) Runnning / रनिंग
- (B) Sneaker / स्नीकर
- (C) Stakeboard / स्टेकबोर्ड
- (D) Jumping / कूदना



Find the option which should replace (?)

10 : 29 :: 66 : ?

- (A) 127
- (B) 128
- (C) 164
- (D) 129



Find the missing ONE (?)

7, 9, 66, 12, 14, 66, 17, ?, ?

A. 19, 66

B. 66, 19

C. 19, 22

D. 20, 66

E. 66, 20



Find the missing ONE (?)

(1/9), (1/3), 1, _____, 9,

A.(2/3)

B.3

C.6

D.27



From the given alternative words, select the word which can be formed using the letters of the give word :

दिए गए वैकल्पिक शब्दों से, उस शब्द का चयन करें जिसे शब्द के अक्षरों का उपयोग करके बनाया जा सकता है:

WINDIGITALLIFESTYLE

- (1) WODISA
- (2) INGAIL
- (3) JOLLYNA
- (4) LONGJUMP

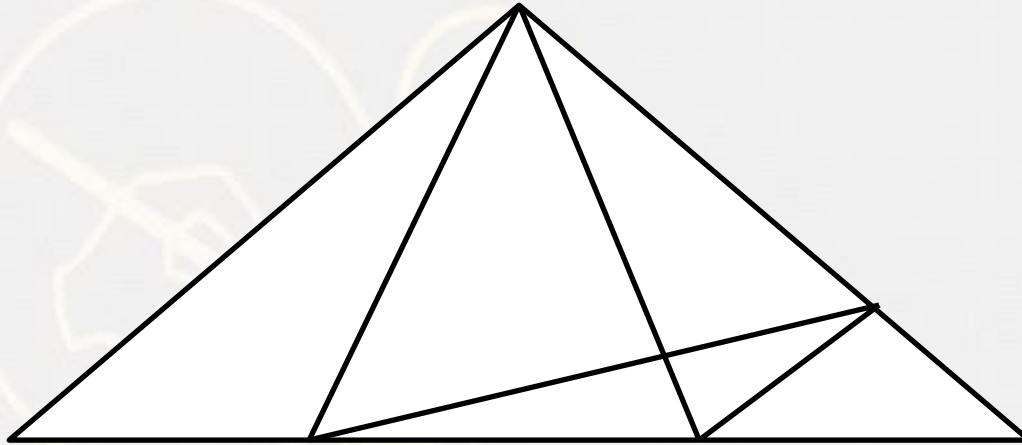




Find the odd one (?)

- (A) Red – Color / लाल - रंग
- (B) Air – Cooler / वायु - कूलर
- (C) Wheat – Grain / गेहूं - अनाज
- (D) Copper – Metal / तांबा - धातु

Find the number of triangles in the given figure.



- A. 21
- B. 14
- C. 16
- D. 23

Find the option which should replace (?)

$$2 : 5 :: 7 : ?$$

- (A) 14
- (B) 16
- (C) 13
- (D) 11



Find the option which should replace (?)

122 : 170 :: 290 : ?

- (A) 362
- (B) 299
- (C) 315
- (D) 341



Find the option which should replace (?)

5 : 20 :: 6 : ?

- (A) 36
- (B) 32
- (C) 31
- (D) 50



Find the missing term(?)



- (A) 188
- (B) 278
- (C) 288
- (D) 178

12	16	32
24	36	288
37	49	?

Find the missing ONE (?)

- (A) 54
- (B) 30
- (C) 20
- (D) 50

4	3	2
6	9	10
9	27	?



Find the missing ONE (?)

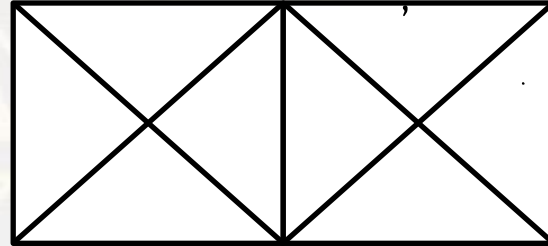
- (A) 150
- (B) 170
- (C) 230
- (D) 250

20	30	50
110	130	?
410	430	470



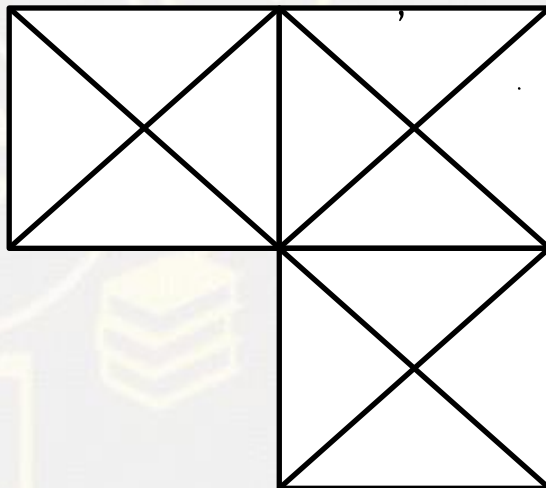


Find the TRIANGLE (?)



1. 14
2. 15
3. 16
4. 18

Find the TRIANGLE (?)



1. 24
2. 28
3. 29
4. 30

Choose the alternative which is closely resembles the **mirror image** of the given combination.

1965 I NDOPAK

(1) KAPODI I 2961

(3) KAPODI I 2961

(2) 2961ODI I KAP

(4) 1965 I NDOPAK

- A.1
- B.2
- C.3
- D.4



Q.. Statement :

All liquids are solids.

Some solids are gases.

All gases are clouds.

Conclusions :

(I) Some clouds are solids.

(II) Some solids are clouds.



प्र.. कथन :

सभी तरल पदार्थ ठोस हैं।

कुछ ठोस गैस हैं।

सभी गैस बादल हैं।

निष्कर्ष:

(I) कुछ बादल ठोस हैं।

(II) कुछ ठोस बादल हैं।

Q.. Statement :

All liquids are solids.

Some solids are gases.

All gases are clouds.

Conclusions :

(I) Some clouds are solids.

(II) Some solids are clouds.

BRAVE = 20

COMMAN = 30

KISHORE = ?

(A) 85

(C) 75

(B) 42

(D) 40



Find the missing (?)

$$N = 30$$

$$COT = 78$$

$$PET = ?$$

1. 41

2. 100

3. 70

4. 84



Arrange the words given below in a meaningful sequence.

1. Flat / फ्लैट
2. Street / सड़क
3. Room / कमरा
4. Apartment / अपार्टमेंट
5. City / शहर

- A.3, 1, 5, 4, 2
- B.3, 1, 4, 2, 5
- C.1, 3, 2, 4, 5
- D.4, 3, 1, 5, 2



Find the missing (?)


BROWSE = GUYQTD

AMALGAM = ?

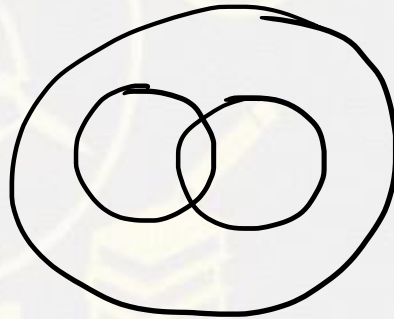
1. **CONCICO**
2. **OCINCOC**
3. **DPMDGCP**
4. **PMDGCPD**



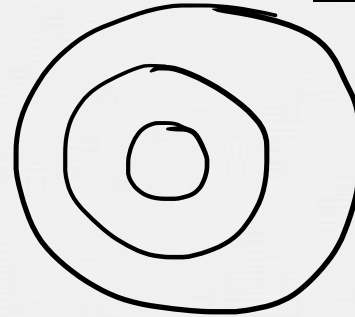
Which of the following diagrams indicates the best relation between **Women, Mothers and pregnant lady** (महिलाएं, माताएं और गर्भवती महिला)?



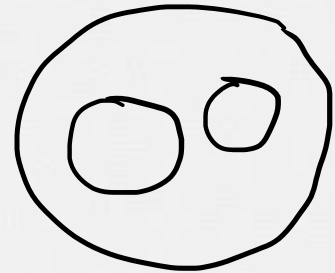
(A)



(B)



(C)



(D)



If + means \times , \times means \div , \div means + and \div means \times , then

$$25 \times 5 \div 8 - 4 + 7 = ?$$

- (1) 44
- (2) 30
- (3) 7
- (4) 24



Find the missing (?)

Work : Joule :: Area : ?

कार्य : जूल :: क्षेत्र : ?

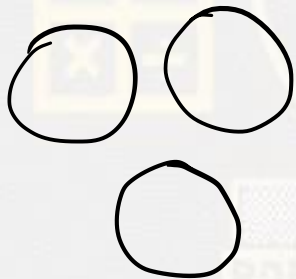
1. Radian / कांति
2. Perimeter / परिमाप
3. Length / लंबाई
4. Hectare / हैक्टर




Find the missing (?)



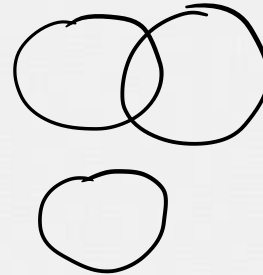
Reptile , Mammal , Lizard / सरीसृप, स्तनपायी, छिपकली




(A)



(B)



(C)



(D)

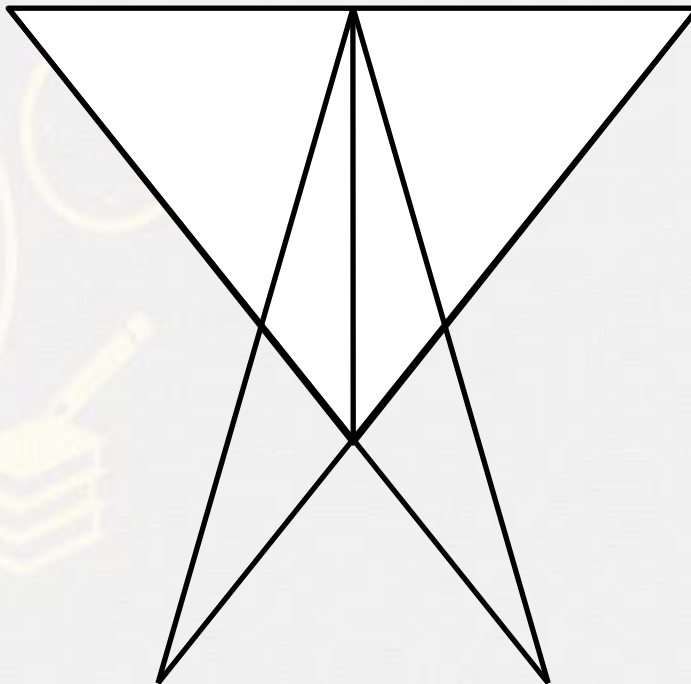
Find the missing (?)

$(3 , 68 , 5) :: ?$

1. $2 , 72 , 10$
2. $4 , 64 , 5$
3. $5 , 95 , 8$
4. $2 , 10 , 1$



Find the number of triangle (?)



- (A) 12
- (B) 13
- (C) 18
- (D) 15

Q. Mukesh is 40 years old and he is five times as old as his brother Rohit. When Mukesh is thrice as old as Rohit then age of Mukesh is

मुकेश की आयु 40 वर्ष है और वह अपने भाई रोहित से पांच गुना बड़ा है। जब मुकेश की आयु रोहित से तीन गुना है तो मुकेश की आयु है

(A) 44 years

(B) 46 years

(C) 48 years

(D) 40 years



Q.. Statement :

Some actors are singers.

All the singers are dancers.

Conclusions :

(I) Some actors are dancers.

(II) No singer is actor.

प्र.. कथन :

कुछ अभिनेता गायक हैं।

सभी गायक नर्तक हैं।

निष्कर्ष:

(I) कुछ अभिनेता नर्तक हैं।

(II) कोई गायक अभिनेता नहीं है।



Q.. Statement :

Some actors are singers.

All the singers are dancers.

Conclusions :

(I) Some actors are dancers.

(II) No singer is actor.