

# TOPIC WISE REASONING



- **Analogy**
- **Blood Relation**
- **Syllogism**
- **Missing Number**

ALL COMPETITIVE EXAMS

 2:00 PM



LIVE 



# Don't Let Your Studies Get Impacted By COVID-19 Pandemic

Stay Home & Study Online With Mahendras Hybrid Model

## Features



Offline Classes



Live Interactive Online Classes



Same Faculty



Same Batch



Same Batch Timing



Online Library Facility



Recorded Video



PDFs



Classes In Both Model

CONTACT US:

1800-103-5225

[www.mahendras.org](http://www.mahendras.org)





# UPCOMING ONLINE BATCHES

## October 2021

06 Oct 2021

08:00 AM to 10:00 AM

**LIVE PREMIUM GREEN CARD**  
(BANK-PO & CLERK)

01:00 PM to 03:00 PM

**LIVE PREMIUM GREEN CARD**  
(BANK-PO & CLERK)

03:00 PM to 05:00 PM

**LIVE PREMIUM SILVER CARD**  
(SSC CGL & CHSL)

10:30 AM to 12:30 PM

**LIVE CLASS NIELIT CARD**  
(CCC)

**BILINGUAL**

13 Oct 2021

10:30 AM to 12:30 PM

**LIVE PREMIUM GREEN CARD**  
(BANK-PO & CLERK)

05:30 PM to 07:30 PM

**LIVE PREMIUM GREEN CARD**  
(BANK-PO & CLERK)

07:30 PM to 09:30 PM

**LIVE PREMIUM SILVER CARD**  
(SSC CGL & CHSL)

**BILINGUAL**

20 Oct 2021

03:00 PM to 05:00 PM

**LIVE PREMIUM GREEN CARD**  
(BANK-PO & CLERK)

08:00 AM to 10:00 AM

**LIVE PREMIUM SILVER CARD**  
(SSC CGL & CHSL)

01:00 PM to 03:00 PM

**LIVE CLASS CTET CARD**  
(CTET)

**BILINGUAL**

27 Oct 2021

08:00 AM to 10:00 AM

**LIVE PREMIUM GREEN CARD**  
(BANK-PO & CLERK)

07:30 PM to 09:30 PM

**LIVE PREMIUM GREEN CARD**  
(BANK-PO & CLERK)

10:30 AM to 12:30 PM

**LIVE PREMIUM SILVER CARD**  
(SSC CGL & CHSL)

**BILINGUAL**



<b>S No</b>	<b>Name of Examination</b>	<b>Paper/ Stage</b>	<b>Schedule of Examination</b>
1	Combined Graduate Level Examination-2019	Skill Test	15.09.2021 to 16.09.2021
2	Junior Engineer (Civil, Mechanical, Electrical and Quantity Surveying & Contracts) Examination, 2020	Paper-II	26.09.2021
3	Multi Tasking (Non-Technical) Staff Examination, 2020	Paper-I	05.10.2021 to 20.10.2021
4	Stenographer Grade 'C' and 'D' Examination, 2019	Skill Test	21.10.2021 To 22.10.2021



🌸 PUJA KUNDU 🌸 12 hours ago

The answer is "5h.40 minutes.".....AMAZING SESSION SIR 🙌🙌🙌.....THANK YOU SOO MUCH SIR...AND HAPPY DURGA PUJA SIR 🙏

👍 🗨️ REPLY



VEDANT yaduwanshi 18 hours ago

5H:40M

Super sessions sir 🙏🙏

👍 2 🗨️ REPLY

▼ [View reply from Mahendras : Online Videos For Govt. Exams](#)



Savita Economics 21 hours ago

5 hours 40mintus

Thanks a lot sir g 🙏🙏 to teach us with nice way of teaching and experience sir g 🙏🙏

Superb session sir g 🙏

👍 2 🗨️ REPLY

▼ [View reply from Mahendras : Online Videos For Govt. Exams](#)



Viśhñù Güptâ 20 hours ago

5 hours 40minutes right ans very dhashu session sir

Thank you so much sir 🙏❤️❤️

👍 2 🗨️ REPLY

▼ [View reply from Mahendras : Online Videos For Govt. Exams](#)



Chhavi Saxena 21 hours ago

Home work answer is 5 hours and 40 minutes

$(85+45+85+45+80)\text{min}=340\text{min}$  means 5 hours 40 min

Very Nice Session Sir Thank You So Much 🙏🙏🙏🙏🙏🙏🙏

👍 1 🗨️ REPLY



Radha Garima 19 hours ago

Answer: 5H:40M

Nice session sir 🙏🙏

👍 1 🗨️ REPLY

View reply from Mahendras : Online Videos For G



arun ch mandal 19 hours ago

5H:40M

THANK YOU SIR

NICE SESSION

👍 1 🗨️ REPLY

View reply from Mahendras : Online Videos For G



Manidipa Mandal 21 hours ago

5hr 40min .

Thank you sir.....nice session sir 🙏🙏🙏

👍 2 🗨️ REPLY

View reply from Mahendras : Online Videos For G



Ankit Vish 21 hours ago

5 hr 40 minutes

Nice session sir 🙏🙏

👍 2 🗨️ REPLY

View reply from Mahendras : Online Videos For G



Roshni Khandelwal 13 hours ago

Answer is 5H:40M

Very nice session sir thank you

👍 1 🗨️ REPLY

View reply from Mahendras : Online Video



DEEKSHA SHARMA 21 hours ago

Home work answer is 5 hours 40 minutes

very nice session sir ji 🙏🙏🙏🙏

👍 1 🗨️ REPLY

View reply from Mahendras : Online Video



bablu sharma 19 hours ago

Nice session sir ji 🙏🙏

👍 1 🗨️ REPLY

View reply from Mahendras : Online Video



Sahu motivational hub 21 hours ago

Thanks 🙏🙏🙏 sir

👍 3 🗨️ REPLY

View reply from Mahendras : Online Video



Rimjhim Sharma 15 hours ago

Sir aap bahut accha padhte hai

👍 2 🗨️ REPLY

▼ [View reply from Mahendras : Online Videos For Govt. Exams](#)



Shruti Jain 5 hours ago



👍 🗨️ REPLY



Anurag Vishwakarma 21 hours ago

5 hours 40 Minute,👍

👍 2 🗨️ REPLY

▼ [View reply from Mahendras : Online Videos For Govt. Exams](#)



Abhishek Pandey 20 hours ago

Answer is 5hrs 40minutes

👍 1 🗨️ REPLY

▼ [View reply from Mahendras : Online Videos For Govt. Exams](#)



BABA\_KA\_DHABA\_₹ 21 hours ago

Hw question ans is 5 hr 40 minutes

👍 1 🗨️ REPLY

▼ [View reply from Mahendras : Online Videos For Govt. Exams](#)



Sirvesh yadav Sirvesh yadav 21 hours ago

Last me West me hga

👍 1 🗨️ REPLY

▼ [View reply from Mahendras : Online Videos For Govt. Exams](#)



Preeti 21 hours ago

5hr 40minute

👍 1 🗨️ REPLY

▼ [View reply from Mahendras : Online Videos For Govt. Exams](#)



Subhrajah Pahari 18 hours ago

ans is 5h 40m

👍 1 🗨️ REPLY

▼ [View reply from Mahendras : Online Videos For Govt. Exams](#)

**Q. A person walks 20 km in east direction from his home then he turns right and walks 10 km then he turns towards his right and walks 20 km again now he walks in south direction for 10 km and finally took a left turn and walks 20 km to reach his office.**

**Q. If he travel at the speed of 15 km per hour and take a halt of 5 minute in each turn then how many time he will take to reach his office ?**



Find the option which should replace (?)

**H : 8 :: E : ?**

- (A) 8
- (B) 6
- (C) 27
- (D) 14



Find the option which should replace (?)

$$16 + 39 = 16$$

$$72 + 81 = 18$$

$$49 + 32 = 12$$

$$25 + 43 = ?$$

(A) 17

(B) 13

(C) 12

(D) 14



Find the MISSING (?)

**245 : 132 :: 256 : ?**

- (A) 128
- (B) 182
- (C) 144
- (D) 169



Find the option which should replace (?)

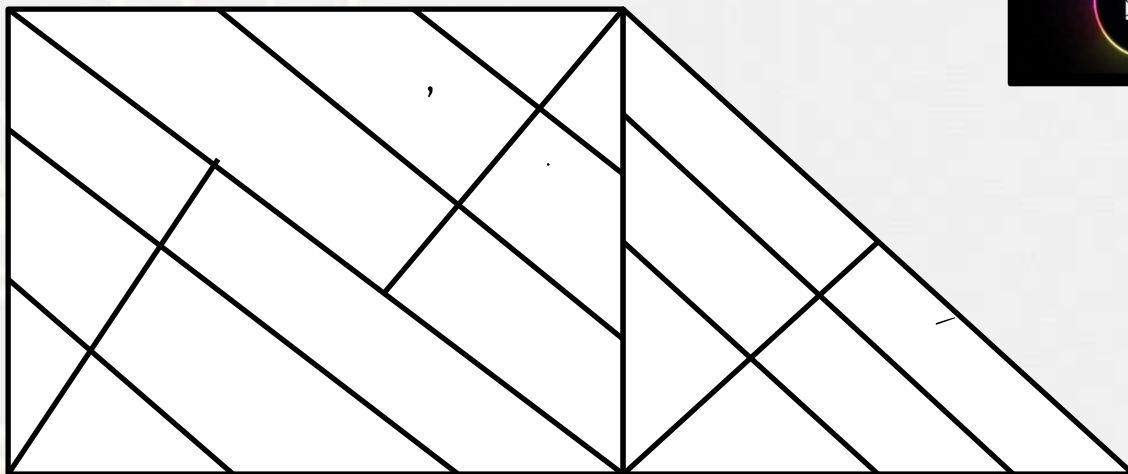
**7 : 85 :: ? : ?**

- (A) 3 : 31
- (B) 8 : 113
- (C) 5 : 43
- (D) 2 : 9



Find the triangle (?)

- 1. 29
- 2. 28
- 3. 27
- 4. 30



2	1	4
7	14	11
41	195	?



- (A) 104
- (C) 51

- (B) 105
- (D) 57

47	40	50	43
23	20	22	19
20	21	1	?



(A) 4

(B) 3

(C) 1

(D) 2

Q Which number will replace the question mark ?

4	2	5
3	3	10
6	9	4
8	6	?


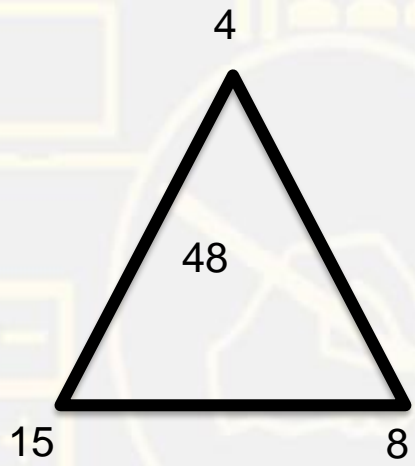


- (A) 3  
(C) 2

- (B) 7  
(D) 1



Q Which number will replace the question mark ?



- (A) 42
- (C) 52

- (B) 32
- (D) 22

## Statements :

Some fruits are Sweets.

All Sweets are vegetables.

No cake is a fruit.

## Conclusions :

I. Some Sweets are cakes.

II. Some fruits are vegetables.

## कथन:

कुछ फल मिठाई हैं।  
सभी मिठाई सब्जियाँ हैं।  
कोई केक फल नहीं है।

## निष्कर्ष:

कुछ स्वीट केक हैं।  
कुछ फल सब्जियाँ हैं।

**Statements :**

No car is a bike.

All bicycles are cars.

No bike is bus.

**Conclusions :**

I. No bicycle is a bike.

II. No car is bus.

**कथन:**

कोई कार बाइक नहीं है।

सभी साइकिल कार हैं।

कोई बाइक बस नहीं है।

**निष्कर्ष:**

कोई साइकिल बाइक नहीं है।

कोई कार बस नहीं है।

## Statements :

Only a few spoons are bottles.

All bottles are clocks.

No clock is a stool.

## Conclusions :

I. At least some spoons are clocks.

II. All spoons can never be stools.

## कथन:

केवल कुछ चम्मच बोतल हैं।

सभी बोतलें घड़ियां हैं।

कोई घड़ी स्टूल नहीं है।

## निष्कर्ष:

कम से कम कुछ चम्मच घड़ियां हैं। सभी चम्मच कभी मल नहीं हो सकते।

## Statement –

- I. All fruits are lions
- II. All lions are foxes
- III. Some foxes are beggars

## Conclusion –

- I. All fruits are foxes.
- II. Some fruits are beggars.

## कथन –

- I. सभी फल शेर हैं
- II. सभी शेर लोमड़ी हैं
- III. कुछ लोमड़ियाँ भिखारी हैं

## निष्कर्ष –

- I. सभी फल लोमड़ी हैं।
- II. कुछ फल भिखारी हैं।



## Statement –

- I. All flowers are toys.
- II. Some toys are idiots.
- III. Some angels are idiots.

## Conclusion –

- I. Some angels are toys.
- II. Some idiots are flowers.
- III. Some flowers are angels.

## कथन –

- I. सभी फूल खिलौने हैं।
- II. कुछ टॉय इडियट्स हैं।
- III. कुछ एंजल इडियट्स हैं।

## निष्कर्ष –

- I. कुछ फरिश्ते खिलौने हैं।
- II. कुछ इडियट्स फूल हैं।
- III. कुछ फूल फरिश्ते हैं।



## Statement -

- I. Some pens are books.
- II. All temples are books.
- III. Some libraries are temples.

## Conclusion -

- I. Some libraries are pens.
- II. Some pens are temples.
- III. Some libraries are books.



## कथन -

- I. कुछ पेन किताबें हैं।
- II. सभी मंदिर किताबें हैं।
- III. कुछ पुस्तकालय मंदिर हैं।

## निष्कर्ष -

- I. कुछ पुस्तकालय पेन हैं।
- II. कुछ पेन मंदिर हैं।
- III. कुछ पुस्तकालय पुस्तकें हैं।

## Statement –

- I. All bats are lions.
- II. No cow is lion.
- III. Some camels are cows.

## Conclusion -

- I. Some lions are camels.
- II. No camel is bat.
- III. Some bats are cows.

## कथन –

- I. सभी चमगादड़ शेर हैं।
- II. कोई गाय शेर नहीं है।
- III. कुछ ऊंट गाय हैं।

## निष्कर्ष –

- I. कुछ शेर ऊंट हैं।
- II. कोई कैमल बैट नहीं है।
- III. कुछ चमगादड़ गाय हैं।





There are five members in a family, R is brother of T, M is sister of R, K is brother of M, W is father of T.

परिवार में पांच सदस्य हैं, R, T का भाई है, M, R की बहन है, K, M का भाई है, W, T के पिता हैं।

Q.(1) How many males members are there in a family?

परिवार में कितने पुरुष सदस्य हैं?

(A) 2

(B) 4

(C) 3

(D) 3 or 4



Q.(2) Kalyani is mother-in-law of veena who is sister-in-law of Ashok. Veena has no sibling . Dheeraj is father of Sandeep who is only brother of Ashok. How Sandeep is related Kalyani?

कल्याणी वीणा की सास है जो अशोक की सिस्टर इन लॉ है। वीणा के पास कोई भाई-बहन नहीं है, धीरज संदीप का पिता है जो अशोक का एकलौटा भाई है। संदीप कल्याणी से कैसे संबंधित है?

(A) Son / पुत्र

(B) Son-in-law / दामाद

(C) Brother/ भाई

(D) Father / पिता



All the six members of a family A, B, C, D, E and F are travelling together. B is the son of C but C is not the mother of B. A and C are a married couple. E is the brother of C. D is the daughter of A. F is sister of B.

एक परिवार के सभी छह सदस्य A, B, C, D, E और F एक साथ यात्रा कर रहे हैं। B, C का पुत्र है लेकिन C, B की मां नहीं है। A व C विवाहित जोड़े हैं। E, C का भाई है। D, A की बेटी है। F, B की बहन है।

Who among the following persons is the son of A?

निम्नलिखित में से कौन सा व्यक्ति A का पुत्र है?

(A) B

(C) F

(B) D

(D) E

