



# RRB GROUP D 2022



## REASONING

# MOST EXPECTED PAPERS

### PAPER-2

**LIVE**  **08:30 PM**





# UPCOMING ONLINE BATCHES

## August 2022

**03 AUG 2022**

**03:00 PM to 05:00 PM**

**BANK ONLINE LIVE CLASS**

**01:00 PM to 03:00 PM**

**SSC ONLINE LIVE CLASS**

**BILINGUAL**

**10 AUG 2022**

**05:30 PM to 07:30 PM**

**BANK ONLINE LIVE CLASS**

**08:00 AM to 10:00 AM**

**SSC ONLINE LIVE CLASS**

**BILINGUAL**

**17 AUG 2022**

**08:00 AM to 10:00 AM**

**BANK ONLINE LIVE CLASS**

**05:30 PM to 07:30 PM**

**SSC ONLINE LIVE CLASS**

**BILINGUAL**

**24 AUG 2022**

**07:30 PM to 09:30 PM**

**BANK ONLINE LIVE CLASS**

**10:30 AM to 12:30 PM**

**SSC ONLINE LIVE CLASS**

**BILINGUAL**

**31 AUG 2022**

**10:30 AM to 12:30 PM**

**BANK ONLINE LIVE CLASS**

**07:30 PM to 09:30 PM**

**SSC ONLINE LIVE CLASS**

**BILINGUAL**

**10 AUG 2022**

**02:00 PM to 04:00 PM**

**BANK ONLINE LIVE CLASS**

**BENGALI+ENGLISH**

**31 AUG 2022**

**06:30 PM to 08:30 PM**

**BANK ONLINE LIVE CLASS**

**BENGALI+ENGLISH**



[www.mahendras.org](http://www.mahendras.org)



7052477777/7052577777



PUJA KUNDU 15 hours ago 7 subscribers

15 square hai and 0 triangles.....thank you sir for the amazing session 🔥👏

👍 🗨️ REPLY

▼ 🚫 • 1 REPLY



Chhavi Saxena 15 hours ago

Home work answer is option B (15)

Very Nice session sir Thank you so much dear Sir 👏👏👏👏👏👏

👍 🗨️ REPLY

▼ 🚫 • 1 REPLY



Ankit Vish 15 hours ago 260 subscribers

Answer. 0 triangle

15 square hai

Lajwab session sir 👏👏

👍 🗨️ REPLY

▼ 🚫 • 1 REPLY



Army girl 15 hours ago 27 subscribers

15 👏

👍 🗨️ REPLY

▼ 🚫 • 1 REPLY



Puspranjan singh 15 hours ago 1 subscribers

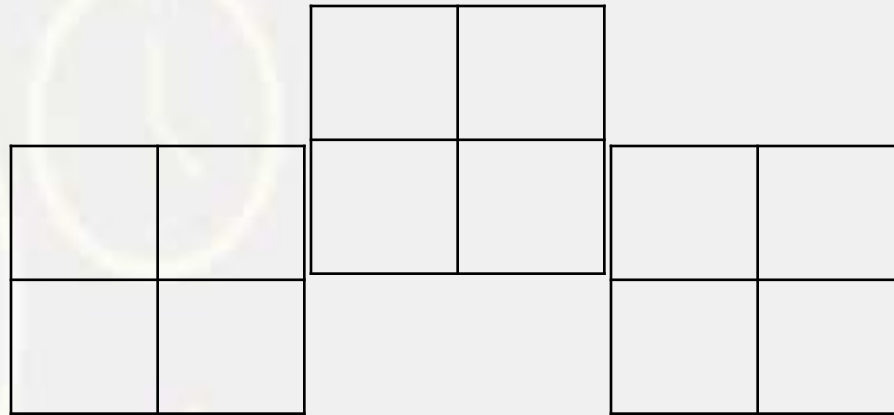
15

👍 🗨️ REPLY

**Find the number of triangle (?)**

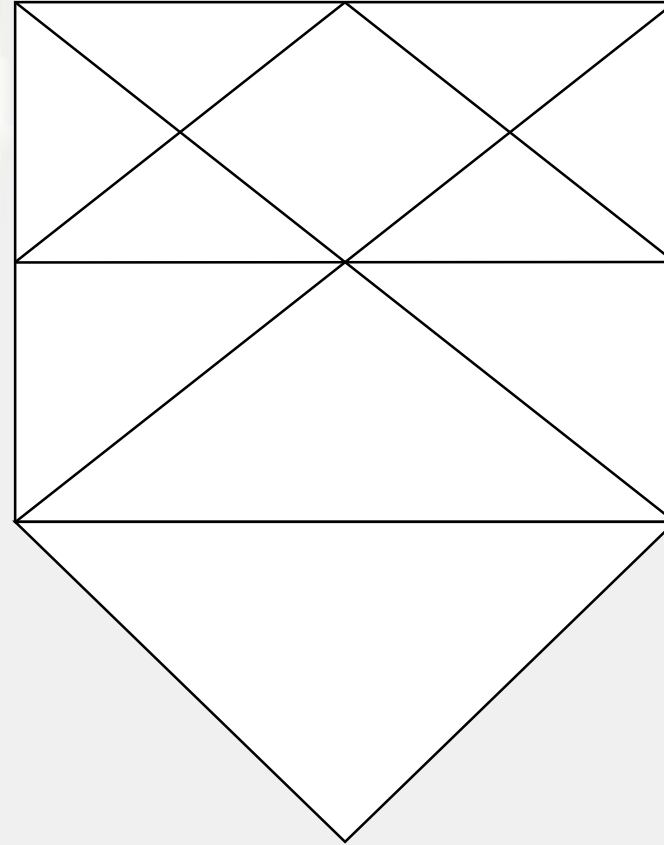


- (A) 13**
- (B) 15**
- (C) 17**
- (D) 12**



**Find the number of triangle (?)**

- (A) 20**
- (B) 24**
- (C) 22**
- (D) 12**



Find the missing term(?)



Goldsmith : Gold :: ? : ?

सुनार : सोना :: ? : ?

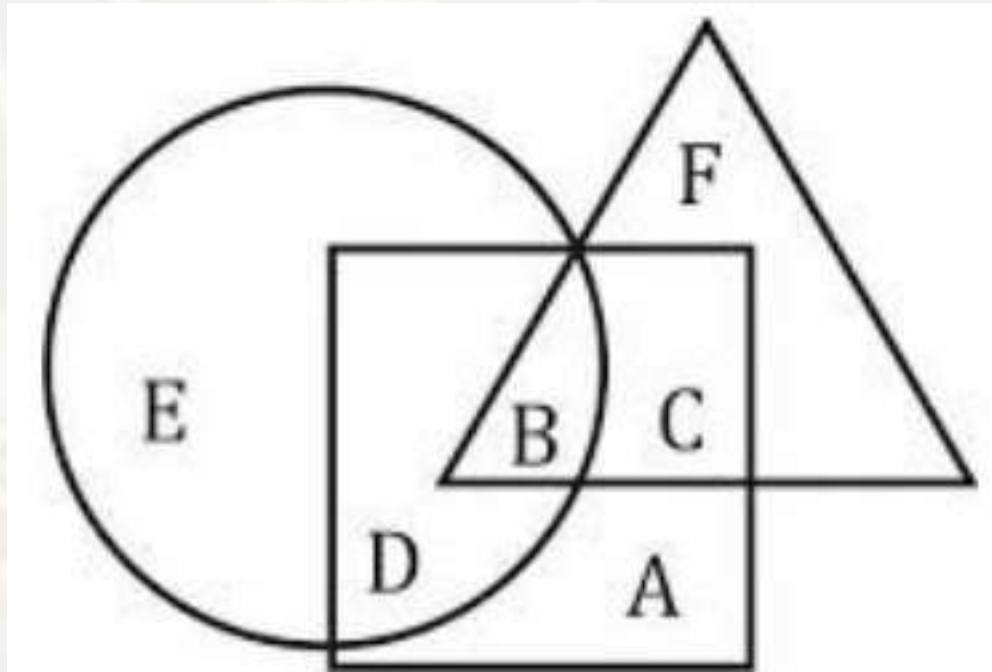
- (A) Carpenter : Wood / बढई : लकड़ी  
(B) Cobbler : Shoes / मोची : जूते  
(C) Jeweller : Jewellery / जौहरी : आभूषण  
(D) Barber : Shave / नाई : दाढ़ी

**Brother , Human , Men / भाई, मानव, पुरुष**



The triangle = the school teachers, / विद्यालय के शिक्षक,  
the square = the married persons / विवाहित व्यक्ति  
the circle = the persons living in joint families/ संयुक्त परिवारों में रहने वाले व्यक्ति  
Q.- Married persons living in joint families but not working as school teachers are represented by  
संयुक्त परिवारों में रहने वाले विवाहित व्यक्ति लेकिन स्कूल के शिक्षकों के रूप में काम नहीं करते

- (a) F
- (b) D
- (c) A
- (d) C





Find the missing term(?)

$$20 : 30 :: 110 : ?$$

- (A) 123
- (B) 321
- (C) 312
- (D) 132



Find the missing term(?)

**2 , 3 , 9 , 49 , ? , 3841**

- (A) 385**
- (B) 685**
- (C) 458**
- (D) 565**



# A , Alphabet , Vowel / **A, वर्णमाला, स्वर**



Arrange the words given below in a meaningful sequence.

1. Injury / चोट
2. Recovery / स्वास्थ्य लाभ
3. Accident / दुर्घटना
4. Showroom / शोरूम
5. Drive / ड्राइव
6. Car / कार

- A. 3, 6, 1, 5, 4, 2
- B. 4, 6, 5, 3, 1, 2
- C. 1, 6, 3, 2, 4, 5
- D. 4, 6, 3, 1, 5, 2



Find the missing :-

**( 5 , 10 , 7 )**

1. 26 , 50 , 05
2. 17 , 35 , 72
3. 37 , 50 , 65
4. 24 , 35 , 48



## Statement :-

Some roads are car./ कुछ सड़कें कार हैं।  
Some care are bus./ कुछ देखभाल बस हैं।



## Conclusion :-

Some roads are bus./ कुछ सड़कें बस हैं।  
No roads are bus./ कोई सड़कें बस नहीं हैं।

Q.. If + means  $-$ ,  $-$  means  $\times$ ,  $\div$  means  $+$  and  $\times$  means  $\div$ , then

$$25 \times 5 \div 8 - 4 + 7 = ?$$

- (1) 44
- (2) 30
- (3) 7
- (4) 24



Find the missing :-

**8 , 5 , 13 , 11 , 18 , 17 , 23 , 23 , 28 , ?**

1. 27
2. 26
3. 29
4. 30





Find the missing term(?)



Light : Darkness :: Knowledge : ?

प्रकाश : अंधकार :: ज्ञान : ?

- (A) Ignorance / अज्ञान
- (B) Intelligence / इंटेलिजेंस
- (C) Brightness / चमक
- (D) Creative / महान

**Find the odd :-**

- 1. 63 - 72**
- 2. 104 - 117**
- 3. 136 - 153**
- 4. 152 - 171**



Find the missing :-

**A , 2 , 3 , B , 5 , 6 , 7 , ? , ?**

1. C , C
2. 8 , 9
3. C , 9
4. 8 , C



Find the missing :-

$$223 : 131 :: ? : ?$$

1. 32 : 17
2. 31 : 12
3. 69 : 31
4. 44 : 11



## Statement :-

Some roads are car./ कुछ सड़कें कार हैं।  
Some care are bus./ कुछ देखभाल बस हैं।



## Conclusion :-

Some A are B./ कुछ A, B हैं।  
No A are B./ कोई A, B नहीं है।

Find the missing :-

1. 23
2. 25
3. 32
4. 42

8	4	3	39
9	5	4	30
6	2	3	?

