

TOPIC WISE REASONING



- **Missing Number**
- **Arithmetical Reasoning**
- **Puzzle**
- **Order & Ranking**



ALL COMPETITIVE EXAMS

 2:00 PM

LIVE 



Don't Let Your Studies Get Impacted By COVID-19 Pandemic

Stay Home & Study Online With Mahendras Hybrid Model

Features



Offline Classes



Live Interactive Online Classes



Same Faculty



Same Batch



Same Batch Timing



Online Library Facility



Recorded Video



PDFs



Classes In Both Model

CONTACT US:

1800-103-5225

www.mahendras.org





UPCOMING ONLINE BATCHES

October 2021

06 Oct 2021

08:00 AM to 10:00 AM

LIVE PREMIUM GREEN CARD
(BANK-PO & CLERK)

01:00 PM to 03:00 PM

LIVE PREMIUM GREEN CARD
(BANK-PO & CLERK)

03:00 PM to 05:00 PM

LIVE PREMIUM SILVER CARD
(SSC CGL & CHSL)

10:30 AM to 12:30 PM

LIVE CLASS NIELIT CARD
(CCC)

BILINGUAL

13 Oct 2021

10:30 AM to 12:30 PM

LIVE PREMIUM GREEN CARD
(BANK-PO & CLERK)

05:30 PM to 07:30 PM

LIVE PREMIUM GREEN CARD
(BANK-PO & CLERK)

07:30 PM to 09:30 PM

LIVE PREMIUM SILVER CARD
(SSC CGL & CHSL)

BILINGUAL

20 Oct 2021

03:00 PM to 05:00 PM

LIVE PREMIUM GREEN CARD
(BANK-PO & CLERK)

08:00 AM to 10:00 AM

LIVE PREMIUM SILVER CARD
(SSC CGL & CHSL)

01:00 PM to 03:00 PM

LIVE CLASS CTET CARD
(CTET)

BILINGUAL

27 Oct 2021

08:00 AM to 10:00 AM

LIVE PREMIUM GREEN CARD
(BANK-PO & CLERK)

07:30 PM to 09:30 PM

LIVE PREMIUM GREEN CARD
(BANK-PO & CLERK)

10:30 AM to 12:30 PM

LIVE PREMIUM SILVER CARD
(SSC CGL & CHSL)

BILINGUAL



S No	Name of Examination	Paper/ Stage	Schedule of Examination
1	Combined Graduate Level Examination-2019	Skill Test	15.09.2021 to 16.09.2021
2	Junior Engineer (Civil, Mechanical, Electrical and Quantity Surveying & Contracts) Examination, 2020	Paper-II	26.09.2021
3	Multi Tasking (Non-Technical) Staff Examination, 2020	Paper-I	05.10.2021 to 20.10.2021
4	Stenographer Grade 'C' and 'D' Examination, 2019	Skill Test	21.10.2021 To 22.10.2021



Chhavi Saxena 18 hours ago

Home work answer is option D

Very Nice Session Sir , Thank You So Much 🙏🙏🙏🙏

👍 🗨️ REPLY



ANGAD KUMAR 18 hours ago

Option=D

Super session sir ji

👍👍🌸🌸🌸🌸🌸

Mirror image=11:60...

Read more

👍 🗨️ REPLY



Vishnu Gupta 18 hours ago

4 is the right ans

Very dhashu session sir thank you 🙏 sir love ❤️ you sir

👍 🗨️ REPLY



Manidipa Mandal 18 hours ago

Option (D)

Thank you sir....nice session sir 🙏🙏🙏🙏

👍 🗨️ REPLY



nikita Chauhan 17 hours ago

Homework ANS-----

Option DDD

Thank you sir 😊🙏

👍 1 🗨️ REPLY



arun ch mandal 17 hours ago

OPT-D

very nice session sir

thank you sir

👍 🗨️ REPLY



SANIA ____ 13 hours ago

nice session sir 🙏🙏

thank you 🙏🙏

👍 🗨️ REPLY



Roshni Khandelwal 15 hours ago

Answer is Option D

Very nice session sir thank you

👍 🗨️ REPLY



Ankit Vish 18 hours ago

DDD

Lajawab session sir 🙏🙏

👍 1 🗨️ REPLY



VEDANT yaduwanshi 11 hours ago

Home work answer DD nice session sir 🙏🙏🙏🙏🙏🙏🙏🙏🙏🙏🙏🙏

👍 🗨️ REPLY



Anjali vaishnav 14 hours ago

Home work answer is (D)

👍 🗨️ REPLY



Rimjhim Sharma 11 hours ago

Thank you sir you are best

👍 1 🗨️ REPLY



DEEKSHA SHARMA 17 hours ago

Home answer is option D

👍 🗨️ REPLY



Anurag Vishwakarma 18 hours ago

Option Ddddd

Home work 🙏🙏


👍 1 🗨️ REPLY



Anurag Vishwakarma 18 hours ago

4

👍 1 🗨️ REPLY



Kaushal (कोशल) 116_____ 18 hours ago

4


👍 🗨️ REPLY



Atri Ray 18 hours ago

Option (d)

👍 🗨️ REPLY



BABA_KA_DHABA_₹ 18 hours ago

Option D


👍 🗨️ REPLY



bablu sharma 17 hours ago

Option d

👍 🗨️ REPLY



barbie dancer 18 hours ago

D ❤️ ❤️ ❤️

👍 🗨️ REPLY



Shruti Jain 17 hours ago

D

👍 🗨️ REPLY

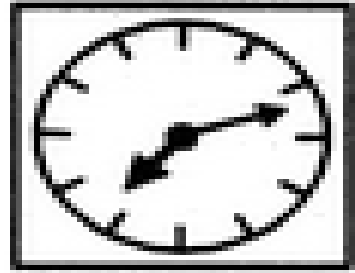


NADEEM KASSAR 17 hours ago


Dd

👍 🗨️ REPLY

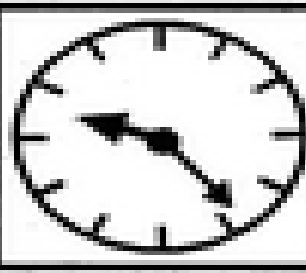
Choose the correct mirror image of the given figure (X) from amongst the four alternatives ?



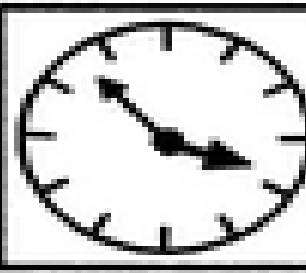
(X)



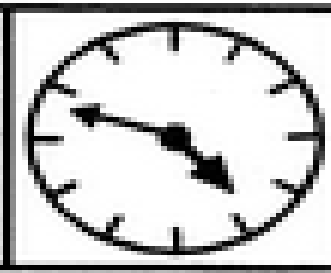
(A)



(B)



(C)



(D)

Find the option which should replace (?)

541 : 992 :: 145 : ?

- (A) 784
- (B) 576
- (C) 776
- (D) 921



Find the option which should replace (?)

$$16 : 13 :: 64 : ?$$

- (A) 22
- (B) 20
- (C) 19
- (D) 18



Find the option which should replace (?)

$$39 : 82 :: 88 : ?$$

- (A) 64
- (B) 56
- (C) 81
- (D) 99



Find the option which should replace (?)

$$5 * 9 * 4 = 36$$

$$5 * 3 * 1 = 15$$

$$7 * 9 * 1 = ?$$

(A) 54

(B) 63

(C) 77

(D) 81



Find the missing one (?)

$$850 : 368 :: 430 : ?$$

- (A) 437
- (B) 737
- (C) 534
- (D) 451



Q Which number will replace the question mark ?

(A) 22

(C) 66

(B) 33

(D) 77



42	44	38
23	55	28
37	?	39

Q Which number will replace the question mark ?

?	25	16
529	169	81
676	144	49

(A) 1084

(C) 49

(B) 484

(D) 36



Q Which number will replace the question mark ?



 ?	 13	 15
 9	 28	 4
 13	 12	 16

- (A) 13
(C) 17

- (B) 6
(D) 22

55	22	28
33	44	28
66	33	?



- (A) 48
(C) 28

- (B) 7
(D) 36

2	1	4
7	14	11
41	195	?



(A) 104

(C) 51

(B) 105

(D) 57

47	40	50	43
23	20	22	19
20	21	1	?



(A) 4

(B) 3

(C) 1

(D) 2

Q Which number will replace the question mark ?

4	2	5
3	3	10
6	9	4
8	6	?



- (A) 3
(C) 2

- (B) 7
(D) 1

A tailor had a number of shirt pieces to cut from a roll of fabric. He cut each roll of equal length into 10 pieces. He cut at the rate of 45 cuts a minute. How many rolls would be cut in 24 minutes ?

एक दर्जी के पास कपड़े के एक रोल से काटने के लिए कई शर्ट के टुकड़े थे। उसने बराबर लंबाई के प्रत्येक रोल को 10 टुकड़ों में काट दिया। उन्होंने 45 कट प्रति मिनट की दर से कटौती की। 24 मिनट में कितने रोल काटे जाएंगे?

A.32 rolls **B.54 rolls**

C.108 rolls **D.120 rolls**



Your age is 10 years less than half of your mother's age . Mother is 5 years younger than your father , if your father is 45 years old , then what is your age ?

आपकी उम्र आपकी माँ की उम्र के आधे से 10 साल कम है। माँ आपके पिता से 5 साल छोटी है, अगर आपके पिता की उम्र 45 साल है, तो आपकी उम्र क्या है?

- (A) 20 years
- (B) 15 years
- (C) 10 years
- (D) 5 years



Q. In ASEAN Summit, all leaders shake hands with each other once. How many handshakes will there be altogether if there are 15 leaders?

आसियान शिखर सम्मेलन में, सभी नेताओं एक बार एक-दूसरे के साथ हाथ मिलाते हैं। 15 नेता हैं तो कितने हैंडशेक होंगे?

(A) 105

(C) 75

(B) 85

(D) 100



Q. Mukesh is 40 years old and he is five times as old as his brother Rohit. When Mukesh is thrice as old as Rohit then age of Mukesh is

मुकेश 40 साल का है और वह अपने भाई रोहित से पांच गुना बड़ा है। जब मुकेश रोहित से तीन गुना बड़ा है तो मुकेश की उम्र है-

(A) 44 years

(B) 46 years

(C) 48 years


(D) 40 years



Q. In a row of 35 students. Amit is 15th from right and Mohan is 12th from left. How many students are there between Mohan and Amit?

35 छात्रों की एक पंक्ति में। अमित दाएं से 15 वें स्थान पर हैं और मोहन बाएं से 12 वें स्थान पर हैं। मोहन और अमित के बीच कितने छात्र हैं?

- (1) 21
- (2) 13
- (3) 10
- (4) 8
- (5) None of these



Q. In a row of 25 students. X is 19th from right and Y is 21st from left. How many students are there between X and Y?

25 छात्रों की एक पंक्ति में। x दाएं ओर से 19 वें स्थान पर है और y बाएं ओर से 21 वें स्थान पर है। x और y के बीच कितने छात्र हैं?

- (1) 21
- (2) 13
- (3) 10
- (4) 6
- (5) None of these