



RRB GROUP D 2022



REASONING

MOST EXPECTED PAPERS

PAPER-1

LIVE  **08:30 PM**





UPCOMING ONLINE BATCHES

August 2022

03 AUG 2022

03:00 PM to 05:00 PM

BANK ONLINE LIVE CLASS

01:00 PM to 03:00 PM

SSC ONLINE LIVE CLASS

BILINGUAL

10 AUG 2022

05:30 PM to 07:30 PM

BANK ONLINE LIVE CLASS

08:00 AM to 10:00 AM

SSC ONLINE LIVE CLASS

BILINGUAL

17 AUG 2022

08:00 AM to 10:00 AM

BANK ONLINE LIVE CLASS

05:30 PM to 07:30 PM

SSC ONLINE LIVE CLASS

BILINGUAL

24 AUG 2022

07:30 PM to 09:30 PM

BANK ONLINE LIVE CLASS

10:30 AM to 12:30 PM

SSC ONLINE LIVE CLASS

BILINGUAL

31 AUG 2022

10:30 AM to 12:30 PM

BANK ONLINE LIVE CLASS

07:30 PM to 09:30 PM

SSC ONLINE LIVE CLASS

BILINGUAL

10 AUG 2022

02:00 PM to 04:00 PM

BANK ONLINE LIVE CLASS

BENGALI+ENGLISH

31 AUG 2022

06:30 PM to 08:30 PM

BANK ONLINE LIVE CLASS

BENGALI+ENGLISH



www.mahendras.org



7052477777/7052577777



Ankit Vish 2 hours ago 257 subscribers

Answer. AAA

Nice session sir 🙌🙌

👍 1 REPLY



🌸 PUJA KUNDU 🌸 ----- 14 hours ago 7 subscribers

The answer is 7324....total 16....bakio ka 17..thank you sir 🙌🙌🙌 and happy rakhi 😊😊

👍 REPLY

▼ • 1 REPLY



Bhavya thakur _____ 14 hours ago 27 subscribers

7324 🙌

👍 REPLY

▼ • 1 REPLY



Surbhi Sinha 14 hours ago

7324 , happy Raksha Bandhan sir ★

👍 REPLY

▼ • 1 REPLY



🍁 PUJA KUNDU 🍁 ----- 1 day ago 7 subscribers

The answer is BUS ..thank you sir for the amazing session 🙌😊🙌🙌

👍 🗨️ REPLY

▼ 🚫 • 1 REPLY




Chhavi Saxena 1 day ago

Home work answer is option D (Bus)

Very Nice Session Sir Thanku So much dear Sir 🙌🙌🙌🙌

👍 🗨️ REPLY

▼ 🚫 • 1 REPLY



Ankit Vish 1 day ago 257 subscribers

Answer. DDD

Nice session sir 🙌🙌

👍 1 🗨️ REPLY

▼ 🚫 • 1 REPLY



vedant yaduwanshi 1 day ago

Homework ans option D BUS 🏠 🙌🙌

👍 🗨️ REPLY

▼ 🚫



Bhavya thakur _____ 1 day ago 27 subscribers

Bus 🙌

👍 🗨️ REPLY

▼ 🚫 • 1 REPLY



khushbu 1 day ago

DDD is the right answer

👍 🗨️ REPLY

▼ 🚫 • 1 REPLY



Puspranjan singh 1 day ago 1 subscribers

Bus

👍 🗨️ REPLY

▼ 🚫 • 1 REPLY

Find the odd one (?)

- (A) Parachute
- (B) Aeroplane
- (C) Helicopter
- (D) Bus



Find the odd one (?)

- (A) 3564
- (B) 8181
- (C) 7164
- (D) 5251



Arrange in meaningful order :

1. Fish
2. Ant
3. Elephant
4. Whale
5. Dog
6. Cat

- A. 5,4,2,1,3,6
- B. 2,4,1,3,6,5
- C. 1,2,3,4,5,6
- D. 2,1,6,5,3,4



Find the missing term(?)

12 , 65 , 330 , 1655 , ?

- (A) 8280**
- (B) 8690**
- (C) 7960**
- (D) 8255**



Find the missing term(?)

Z , U , W , W , T , Y , Q , ? , ?

- (A) A , N
- (B) Z , N
- (C) B , O
- (D) A , S



Find the missing :-

$$12 : 84 :: 24 : ?$$

1. 312
2. 315
3. 268
4. 270



Find the option which should replace (?)

$$94 + 16 = 42$$

$$89 + 23 = 78$$

$$63 + 45 = ?$$

(A) 18

(B) 28

(C) 38

(D) 48



Find the option which should replace (?)

CDEF : EGJM

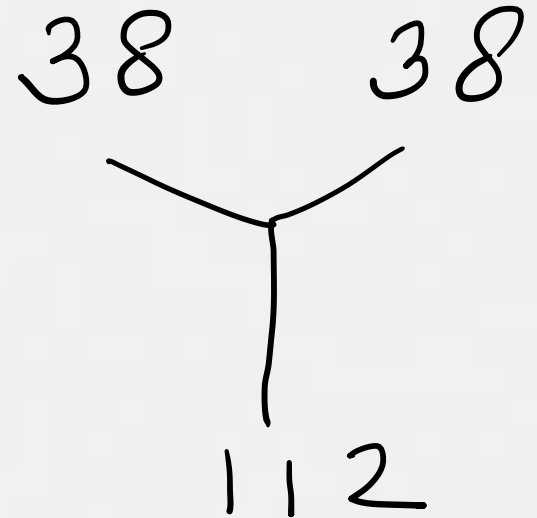
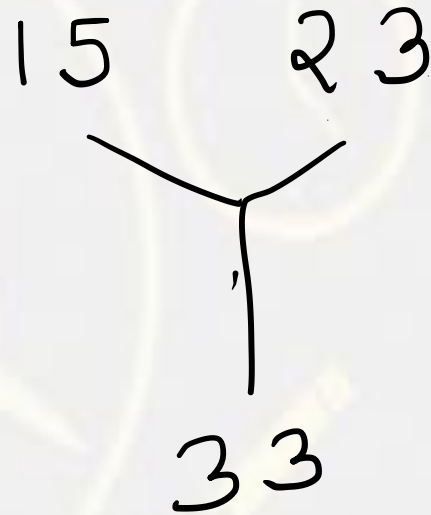
PQRS :: ?

- (A) RTUZ**
- (B) SUMK**
- (C) ADIL**
- (D) ALNP**



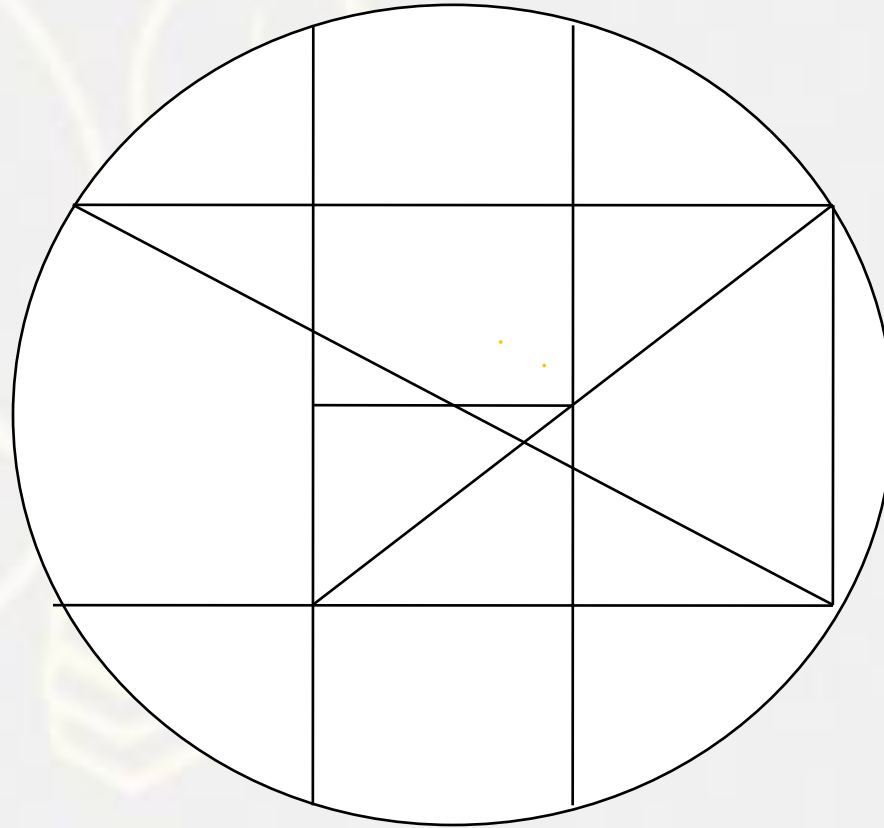
Find the option which should replace (?)

- (A) 98
- (B) 100
- (C) 132
- (D) 2560



Find the number of square (?)

- (A) 5**
- (B) 2**
- (C) 3**
- (D) 1**



Find the option which should replace (?)

8 : 8 , 10

5 : 8 , 7

4 : ? , ?

(A) 10 , 7

(B) 7 , 10

(C) 5 , 12

(D) 12 , 5



Find the option which should replace (?)

Breeze : Cyclone :: Drizzle

हवा : चक्रवात :: बूँदा बांदी

- (A) Flood / बाढ़
- (B) Dought / सूखा
- (C) Downpour / मूसलधार बारिश
- (D) Rain / वर्षा



Find the odd one (?)

- 1. Fog / कोहरा**
- 2. Cloud / बादल**
- 3. Rain / वर्षा**
- 4. Mist / धुंध**



Find the option which should replace (?)

$$6 * 3 = 13$$

$$5 * 20 = 96$$

$$19 * 11 = ?$$



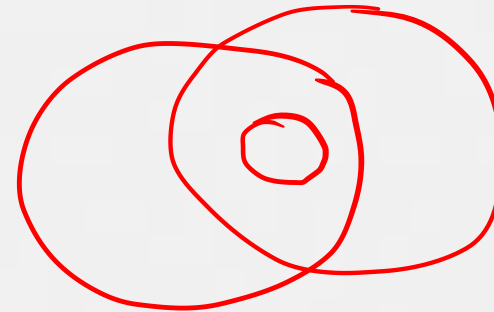

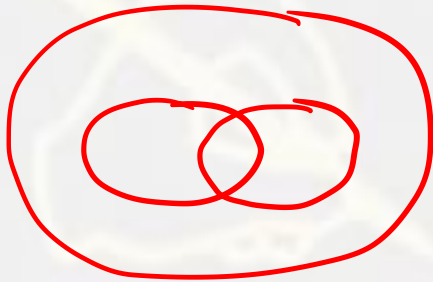

(A) 191

(B) 194

(C) 207

(D) 209

Which of the following diagrams indicates the best relation between
(Criminal , Thief , Murderer) / (अपराधी, चोर, हत्यारा)



A.

B

.C

.D.



Find the missing term(?)

$$5 : 36 :: 11 : ?$$

- (A) 70
- (B) 77
- (C) 72
- (D) 80



Find the missing term(?)

$$16 : 240 :: 25 : ?$$

- (A) 625
- (B) 650
- (C) 675
- (D) 600



Find the missing term(?)

$$6 : 27 :: 10 : ?$$

- (A) 115
- (B) 145
- (C) 105
- (D) 125

