



Mahendra's



UP POLICE कॉन्स्टेबल

REASONING

PREVIOUS YEAR

QUESTION PAPER

SUPER TRICK

LIVE

04:00 PM





Don't Let Your Studies Get Impacted By COVID-19 Pandemic

Stay Home & Study Online With Mahendras Hybrid Model

Features

- Offline Classes ↔ Live Interactive Online Classes
- Same Faculty
- Same Batch
- Same Batch Timing
- Online Library Facility
- Recorded Video
- PDFs
- Classes In Both Model

CONTACT US:

1800-103-5225

www.mahendras.org





UPCOMING ONLINE BATCHES

April 2022

06 April 2022

10:30 AM to 12:30 PM

BANK ONLINE LIVE CLASS

05:30 PM to 07:30 PM

SSC ONLINE LIVE CLASS

BILINGUAL

13 April 2022

01:00 PM to 03:00 PM

BANK ONLINE LIVE CLASS

03:00 PM to 05:00 PM

SSC ONLINE LIVE CLASS

11:30 AM to 01:30 PM

BANK ONLINE LIVE CLASS
(English & Bengali)

07:30 PM to 09:30 PM

BANK ONLINE LIVE CLASS
(English & Odia)

BILINGUAL

05:30 PM to 06:30 PM

CCC ONLINE LIVE CLASS
(NIELIT COMPUTER COURSE)

BILINGUAL

20 April 2022

08:00 AM to 10:00 AM

BANK ONLINE LIVE CLASS

07:30 PM to 09:30 PM

SSC ONLINE LIVE CLASS

04:15 PM to 06:15 PM

SSC ONLINE LIVE CLASS
(English & Bengali)

01:00 PM to 03:00 PM

SSC ONLINE LIVE CLASS
(English & Odia)

BILINGUAL

10:30 AM to 11:30 AM

ENGLISH SPEAKING COURSE 2022
(SPEAKING COURSE)

BILINGUAL

27 April 2022

07:30 PM to 09:30 PM

BANK ONLINE LIVE CLASS

08:00 AM to 10:00 AM

SSC ONLINE LIVE CLASS

BILINGUAL



🌸 PUJA KUNDU 🌸 16 hours ago 8 subscribers

The answer is $132(12^2=144-12)$thank you sir for this session 🙏

👍 🗨️ 📌 ▼ 📄 REPLY ➡

▶ [View reply from Mahendras : Online Videos For Govt. Exams](#)



Chhavi Saxena 16 hours ago

Home work answer is option D(132)

Very Nice Session Sir Thanku so much Sir 🙏🙏🙏🙏🙏🙏🙏

👍 🗨️ 📌 ▼ 📄 REPLY ➡

▶ [View reply from Mahendras : Online Videos For Govt. Exams](#)



Vishnu Gupta 16 hours ago 3 subscribers

132 is the right ans

Very super nice session sir thank you 🙏 sir love you 😊 sir

👍 🗨️ 📌 ▼ 📄 REPLY ➡

▶ [View reply from Mahendras : Online Videos For Govt. Exams](#)



Ankit Vish 13 hours ago 22 subscribers

Answer. D

Lajwab session sir 🙏🙏

👍 1 🗨️ 📌 ▼ 📄 REPLY ➡

▶ [View reply from Mahendras : Online Videos For Govt. Exams](#)



Puspranjan singh 17 hours ago [2 subscribers](#)

Nice session sir



REPLY



Puspranjan singh 17 hours ago [2 subscribers](#)

132



REPLY



[View reply from Mahendras : Online Videos For Govt. Exams](#)



ANNU LATA 12 hours ago

ddd is right ans



REPLY



[View reply from Mahendras : Online Videos For Govt. Exams](#)

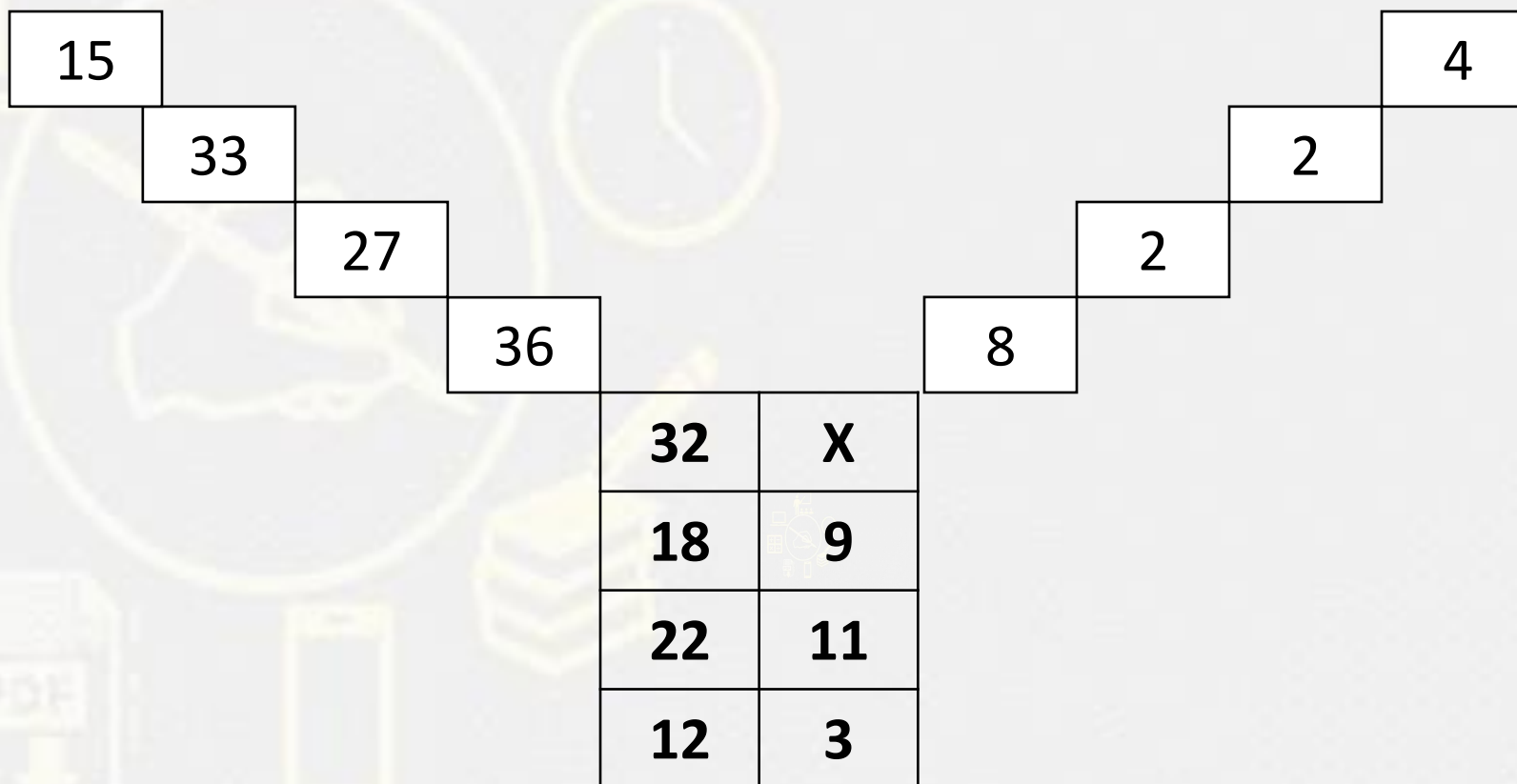
Find the missing term(?)

$$20 : 30 :: 110 : ?$$

- (A) 123
- (B) 321
- (C) 312
- (D) 132



Find the option which should replace (x)



- (A) 3
- (B) 6
- (C) 5
- (D) 4

Find the option which should replace (?)

- (A) 1
- (B) 2
- (C) 4
- (D) 3

729	3	216
343	?	64



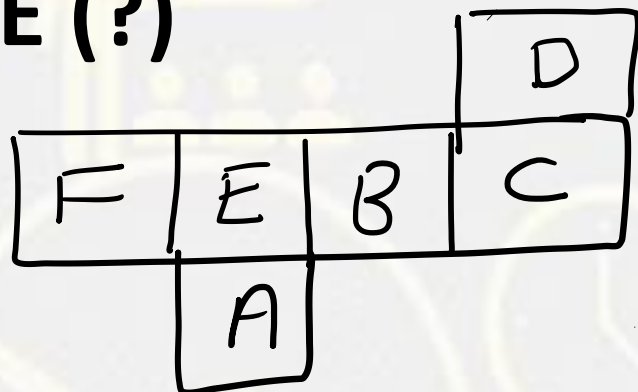
Find the missing term(?)

2 , 3 , 9 , 49 , ? , 3841

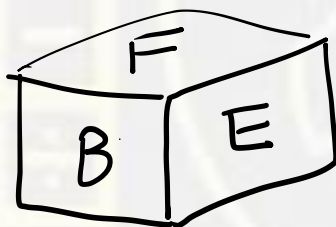
- (A) 385**
- (B) 685**
- (C) 458**
- (D) 565**



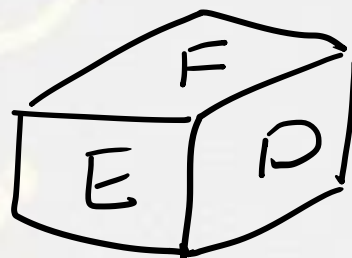
Find the DICE (?)



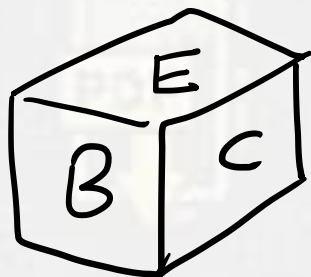
(A)



(B)



(C)



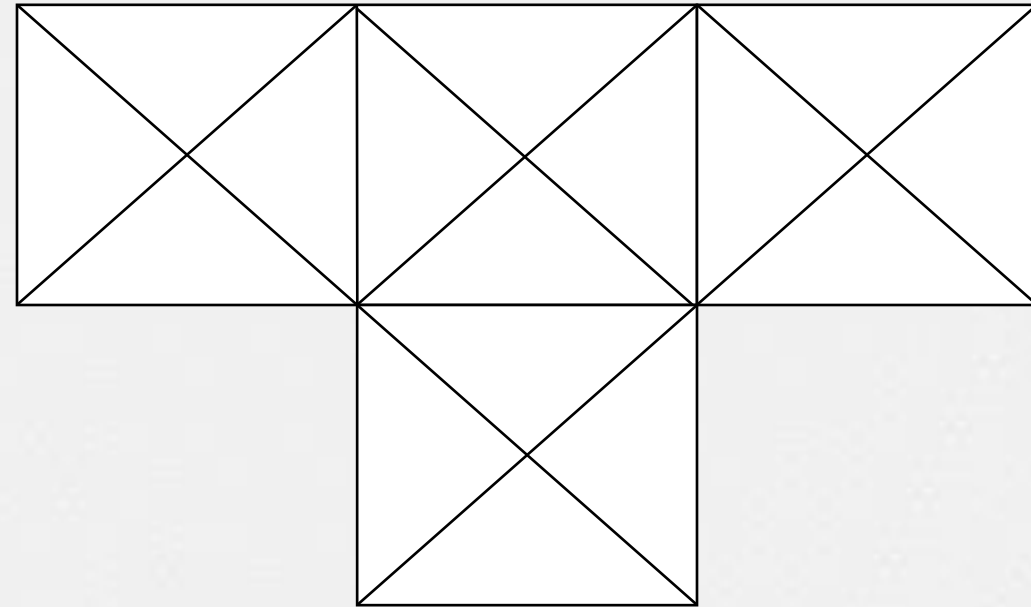
(D)



Find number of triangle in the given figure ?

दी गई आकृति में त्रिभुज की संख्या ज्ञात कीजिए?

- (A) 40**
- (B) 41**
- (C) 38**
- (D) 25**



In a Certain code **HERO** is written as **9685**, than find the code for **GIRL** ?

एक निश्चित कोड में **HERO** का कोड **9685** लिखा गया है तो **GIRL** का कोड क्या होगा ?

- (1) 3997
- (2) 9397
- (3) 9379
- (4) 3979



Find the odd one (?)

- (A) Pear / नाशपाती**
- (B) Orange / ऑरेंज**
- (C) Guava / अमरूद**
- (D) Apple / सेब**



Find the missing term(?)

GAP : 48

PEN : 70

LAN : ?

(A) 54

(B) 27

(C) 38

(D) 58



Which of the following calendar year is similar to the calendar of the year 2003.

निम्नलिखित कैलेंडर वर्ष में से कौन सा वर्ष 2003 के कैलेंडर के समान है।

- (A) 2009
- (B) 2010
- (C) 2012
- (D) 2014



Find the missing term(?)

Green Revolution : Plants :: Grey Revolution : ?
हरित क्रांति: पौधे :: ग्रे क्रांति:?

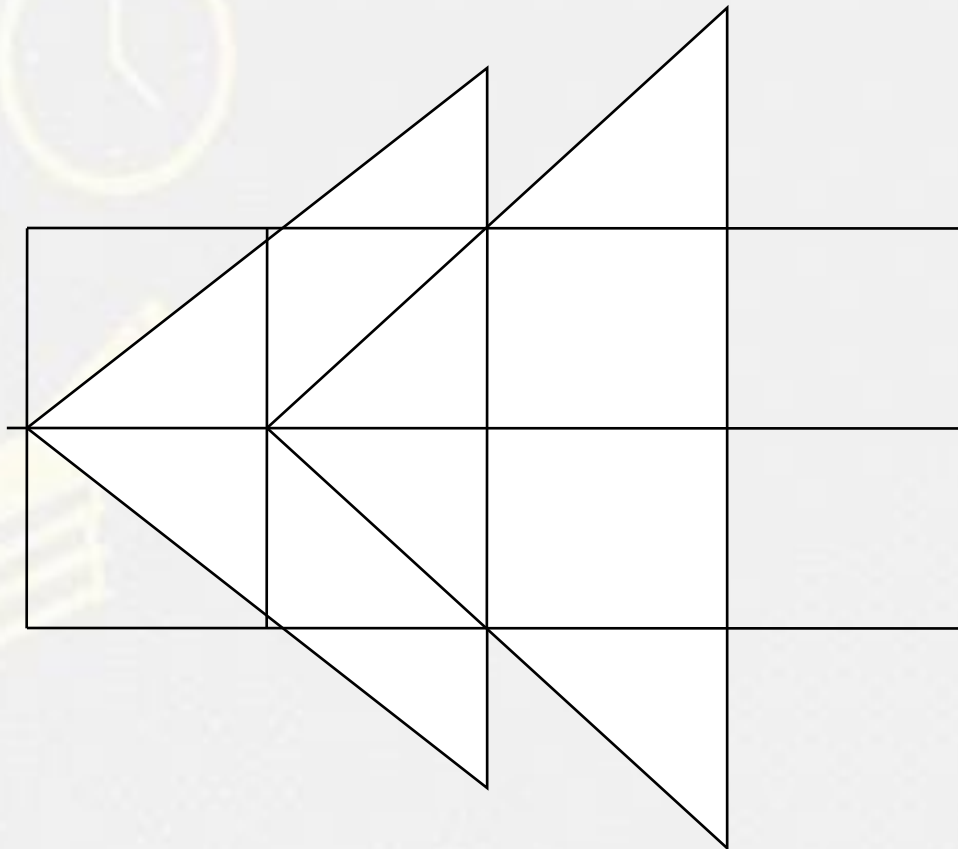
- (A) Poultry / पोल्टी
- (B) Fertilizers / उर्वरक
- (C) Animals / पशु
- (D) Forests / वन



Find number of triangle in the given figure ?

दी गई आकृति में त्रिभुज की संख्या ज्ञात कीजिए?

- (A) 13**
- (B) 14**
- (C) 15**
- (D) NOT**



Find the option which should replace (?)

$$18 * 7 = 315$$

$$8 * 5 = 100$$

$$12 * 4 =$$

- A. 230
- B. 120
- C. 215
- D. 265



Find the option which should replace (?)

1 , 5 , 7 , 43 , ?

- A. 98
- B. 56
- C. 89
- D. 65



Find the number of triangle (?)



- (A) 125
- (B) 216
- (C) 256
- (D) 64

