

# TOPIC WISE REASONING



- **Missing Number** ☆
- **Dice**
- **Series**
- **Mirror Image**

ALL COMPETITIVE EXAMS

 2:00 PM



LIVE 



# Don't Let Your Studies Get Impacted By COVID-19 Pandemic

Stay Home & Study Online With Mahendras Hybrid Model

## Features



Offline Classes



Live Interactive Online Classes



Same Faculty



Same Batch



Same Batch Timing



Online Library Facility



Recorded Video



PDFs



Classes In Both Model

CONTACT US:

1800-103-5225

[www.mahendras.org](http://www.mahendras.org)





# UPCOMING ONLINE BATCHES

## October 2021

06 Oct 2021

08:00 AM to 10:00 AM

**LIVE PREMIUM GREEN CARD**  
(BANK-PO & CLERK)

01:00 PM to 03:00 PM

**LIVE PREMIUM GREEN CARD**  
(BANK-PO & CLERK)

03:00 PM to 05:00 PM

**LIVE PREMIUM SILVER CARD**  
(SSC CGL & CHSL)

10:30 AM to 12:30 PM

**LIVE CLASS NIELIT CARD**  
(CCC)

**BILINGUAL**

13 Oct 2021

10:30 AM to 12:30 PM

**LIVE PREMIUM GREEN CARD**  
(BANK-PO & CLERK)

05:30 PM to 07:30 PM

**LIVE PREMIUM GREEN CARD**  
(BANK-PO & CLERK)

07:30 PM to 09:30 PM

**LIVE PREMIUM SILVER CARD**  
(SSC CGL & CHSL)

**BILINGUAL**

20 Oct 2021

03:00 PM to 05:00 PM

**LIVE PREMIUM GREEN CARD**  
(BANK-PO & CLERK)

08:00 AM to 10:00 AM

**LIVE PREMIUM SILVER CARD**  
(SSC CGL & CHSL)

01:00 PM to 03:00 PM

**LIVE CLASS CTET CARD**  
(CTET)

**BILINGUAL**

27 Oct 2021

08:00 AM to 10:00 AM

**LIVE PREMIUM GREEN CARD**  
(BANK-PO & CLERK)

07:30 PM to 09:30 PM

**LIVE PREMIUM GREEN CARD**  
(BANK-PO & CLERK)

10:30 AM to 12:30 PM

**LIVE PREMIUM SILVER CARD**  
(SSC CGL & CHSL)

**BILINGUAL**



<b>S No</b>	<b>Name of Examination</b>	<b>Paper/ Stage</b>	<b>Schedule of Examination</b>
1	Combined Graduate Level Examination-2019	Skill Test	15.09.2021 to 16.09.2021
2	Junior Engineer (Civil, Mechanical, Electrical and Quantity Surveying & Contracts) Examination, 2020	Paper-II	26.09.2021
3	Multi Tasking (Non-Technical) Staff Examination, 2020	Paper-I	05.10.2021 to 20.10.2021
4	Stenographer Grade 'C' and 'D' Examination, 2019	Skill Test	21.10.2021 To 22.10.2021



RASHMI SONI 👑 \_\_\_\_\_ 1 day ago

ONLY 1 WILL BE CORRECT ONE ❤️,,,,, THANK YOU SO MUCH SIR 😊  
VVV NICE SESSION 😊😊

👍 🗨️ REPLY



🌸 PUJA KUNDU 🌸 1 day ago

ANS OF THE QN IS Option 1 ....AAJ KA SESSION AMAZING SESSION RHA SIR...BAHAT NEW LOGIC SIKHA.....THANKS FOR THE SESSION SIR 🙏

👍 🗨️ REPLY



SANIA \_\_\_\_\_ 1 day ago

Dhansu session sir 🙏🙏🙏🔥🔥🔥

👍 🗨️ REPLY



Roshni Khandelwal 11 hours ago

Answer is Option 1  
Awesome session sir bahat ache questions the

👍 🗨️ REPLY



Radha Garima 1 day ago

Answer : only 1  
Nice session sir 🙏🙏

👍 🗨️ REPLY



Vishnu Gupta 1 day ago

Only 1 right ans  
Very nice 🔥 dhashu session sir thank you 🙏 sir

👍 🗨️ REPLY



Abhi Vaghela 1 day ago

Only 1....nice session sir 🙏🙏❤️

👍 🗨️ REPLY



barbie dancer 1 day ago

1 osm session sir 😊

👍 🗨️ REPLY



arun ch mandal 1 day ago

only 1  
thank you sir  
very nice session

👍 🗨️ REPLY



Ankit Vish 1 day ago

Answer 1  
Nice session sir 🙏🙏

👍 1 🗨️ REPLY



**bablu sharma** 1 day ago

Only one follow nice session sir ji

REPLY



**Nishu Gupta** 1 day ago

Only 1....very nice session sir

REPLY



**Chhavi Saxena** 1 day ago

Home work answer is Only 1

Very Nice Session Sir 🙏🙏, Thank You So Much 🙏🙏🙏🙏

REPLY



**Anurag Vishwakarma** 1 day ago

Answer 1 🙏🙏🙏🙏🙏🙏🙏

1 REPLY



**Shruti Jain** 1 day ago

Only 1

REPLY



**Preeti** 1 day ago

Only 1

REPLY



**Abhishek Pandey** 1 day ago

only 1.

REPLY



**Hrithik\_\_\_\_\_** 1 day ago

ONLY 1

REPLY



**DEEKSHA SHARMA** 1 day ago

only 1

REPLY



**Kaushal116** 1 day ago

Only 1


REPLY



**Masum Idki** 😊 1 day ago

Only 1

REPLY



**NADEEM KASSAR** 1 day ago

Only 1

REPLY

**Q. Statement: For supervising the advertisements by different companies, should a censor board be created?**

**I. Yes, It is seen many times that a particular ad comes under a topic**

**of debate about showing of some scenes.**

**II. No, There is no need of censor boards for all purposes.**

**विभिन्न कंपनियों द्वारा विज्ञापनों की निगरानी के लिए, क्या एक सेंसर बोर्ड बनाया जाना चाहिए ?**

**I. हां, यह कई बार देखा जाता है कि एक विशेष विज्ञापन किसी विषय के अंतर्गत आता है जो कुछ दृश्यों के बारे में बहस करता है।**

**II. नहीं, सभी उद्देश्यों के लिए सेंसर बोर्ड की कोई आवश्यकता नहीं है।**

Find the missing :-

$$29 : 13 :: 37 : ?$$

- (A) 17
- (B) 14
- (C) 15
- (D) 25





Find the missing (?)

$$4 @ 5 = 209$$

$$6 @ 7 = 601$$

$$8 @ 2 = ?$$

(A) 620

(B) 495

(C) 540

(D) 536



Find the missing (?)

**47 , 57 , 69 , 85 , ?**

- (A) 109**
- (B) 101**
- (C) 92**
- (D) 95**



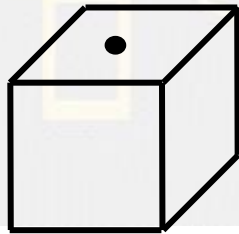
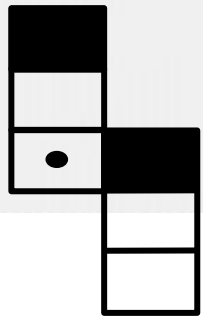
The figure given on the left hand side in each of the following questions is folded to form a box. Choose from the alternatives (1), (2), (3) and (4) the box can be formed.

(A) 2 and 3 only

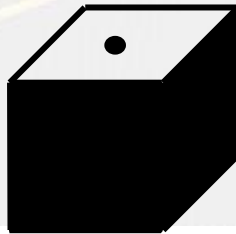
(B) 1, 3 and 4 only

(C) 2 and 4 only

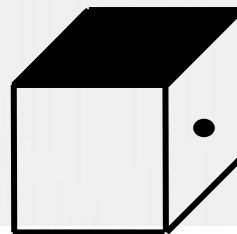
(D) 1 and 4 only



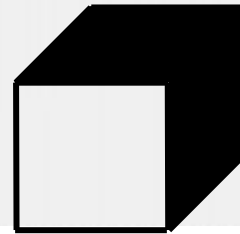
1



2

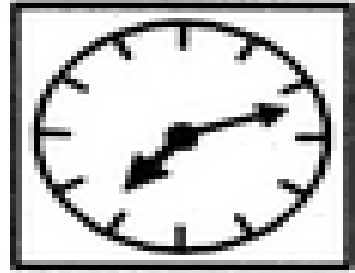


3




4

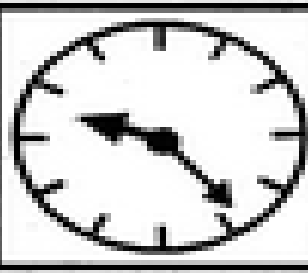
Choose the correct mirror image of the given figure (X) from amongst the four alternatives ?



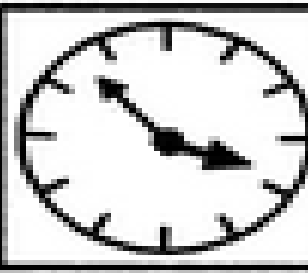
(X)



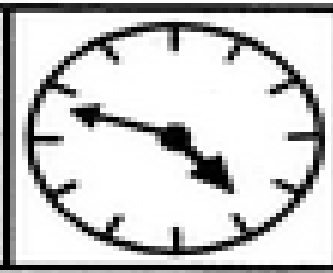
(A)



(B)



(C)



(D)

Q Which number will replace the question mark ?

(A) 22

(C) 66

(B) 33

(D) 77



42	44	38
23	55	28
37	?	39

Q Which number will replace the question mark ?

?	25	16
529	169	81
676	144	49

(A) 1084

(C) 49

(B) 484

(D) 36



Q Which number will replace the question mark ?



- (A) 13
- (C) 17

- (B) 6
- (D) 22

 ?	 13	 15
 9	 28	 4
 13	 12	 16

55	22	28
33	44	28
66	33	?



- (A) 48  
(C) 28

- (B) 7  
(D) 36



2	1	4
7	14	11
41	195	?



(A) 104

(C) 51

(B) 105

(D) 57

47	40	50	43
23	20	22	19
20	21	1	?



(A) 4

(B) 3

(C) 1

(D) 2

Q Which number will replace the question mark ?


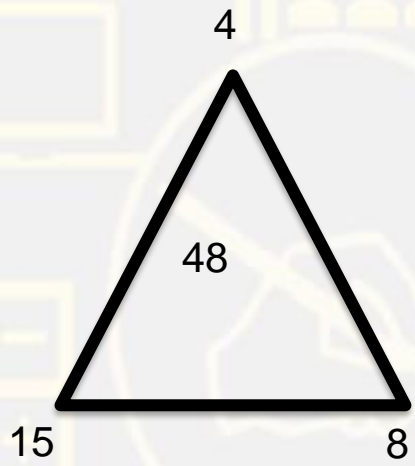
4	2	5
3	3	10
6	9	4
8	6	?



- (A) 3  
(C) 2

- (B) 7  
(D) 1

Q Which number will replace the question mark ?



- (A) 42
- (C) 52

- (B) 32
- (D) 22

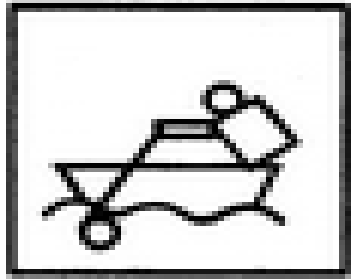
Find the missing :-

- (A) 4
- (B) 5
- (C) 6
- (D) 7

<b>8</b>	<b>6</b>	<b>4</b>
<b>3</b>	<b>?</b>	<b>7</b>
<b>14</b>	<b>14</b>	<b>18</b>




Choose the correct mirror image of the given figure (X) from amongst the four alternatives ?




(X)




(A)



(B)



(C)



(D)

Find the next term.

**2, 3, 8, 27, 112, ?**

(A) 226

(C) 452

(B) 339

(D) 565

Find the next term.

**5, 6, 9, 14, 21, ?**

(A) 32

(B) 31

(C) 35

(D) 30