

SSC MTS/HAWALDAR/CHSL



REASONING

LIVE EXAM

तैयारी जीत की...

LIVE

08:30 PM





UPCOMING ONLINE BATCHES

June 2022

01 June 2022

08:00 AM to 10:00 AM

BANK ONLINE LIVE CLASS

03:00 PM to 05:00 PM

SSC ONLINE LIVE CLASS

BILINGUAL

08 June 2022

01:00 PM to 03:00 PM

BANK ONLINE LIVE CLASS

07:30 PM to 09:30 PM

SSC ONLINE LIVE CLASS

BILINGUAL

15 June 2022

05:30 PM to 07:30 PM

BANK ONLINE LIVE CLASS

10:30 AM to 12:30 PM

SSC ONLINE LIVE CLASS

BILINGUAL

 www.mahendras.org

 7052477777/7052577777



Vishnu Gupta 1 hour ago 3 subscribers

340 is the right ans very super nice session sir thank you so sir ❤️ 👤



REPLY



Mannveer Singh 14 hours ago (edited)

$150 \times 2 + 40 = 340$



REPLY



View reply from Mahendras : Online Videos For Govt. Exams



NINJA 3 hours ago 2 subscribers

340 😊



1



REPLY



View reply from Mahendras : Online Videos For Govt. Exams



HRX 7 hours ago

340



REPLY



View reply from Mahendras : Online Videos For Govt. Exams



puspranjan singh 13 hours ago

340



REPLY



View reply from Mahendras : Online Videos For Govt. Exams



Find the missing :-

100 , 60 , 80 , 150 , ?

- 1. 300**
- 2. 210**
- 3. 310**
- 4. 340**





Find the missing :-

1495 : 11 :: 2659 : ?

- (A) 44
- (B) 33
- (C) 55
- (D) 22





Find the option which should replace (?)

3 (21) 92

5 (?) 18

7 (21) 74

(A) 28

(B) 25

(C) 35

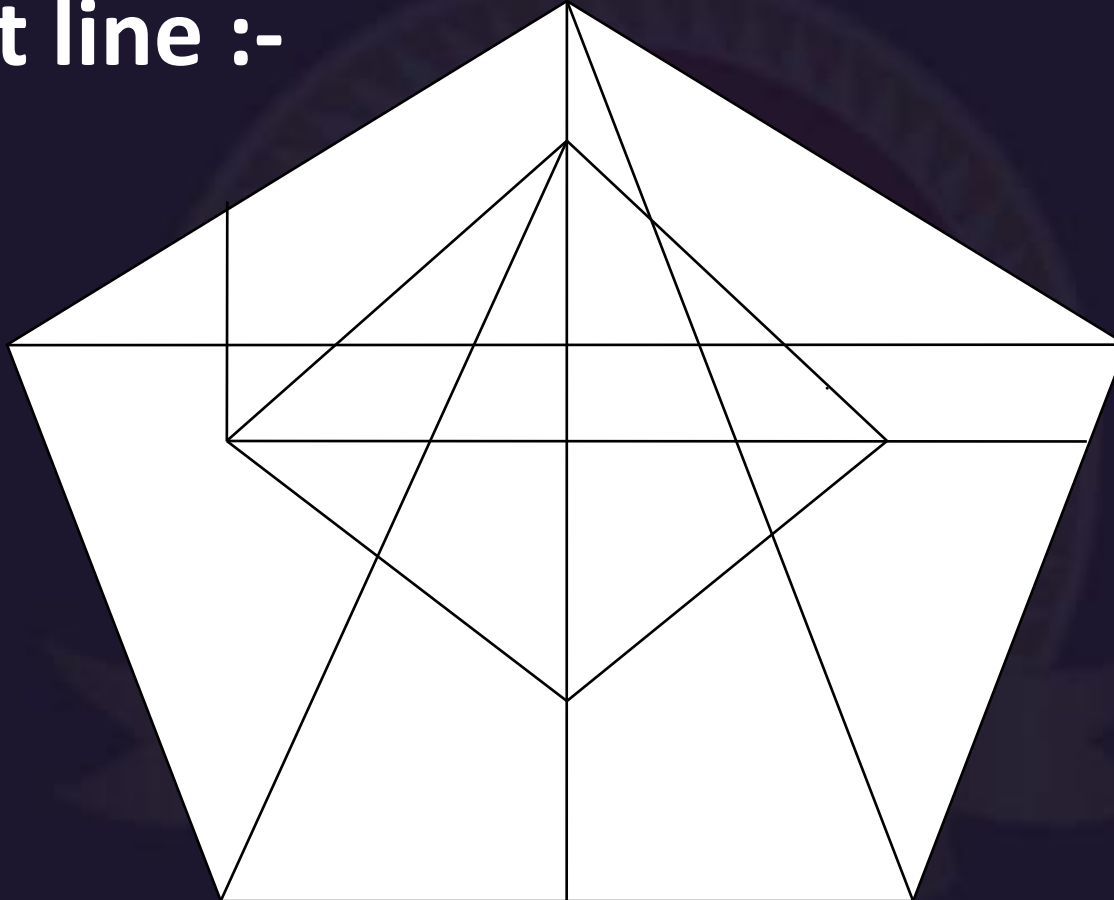
(D) 38





Find the Straight line :-

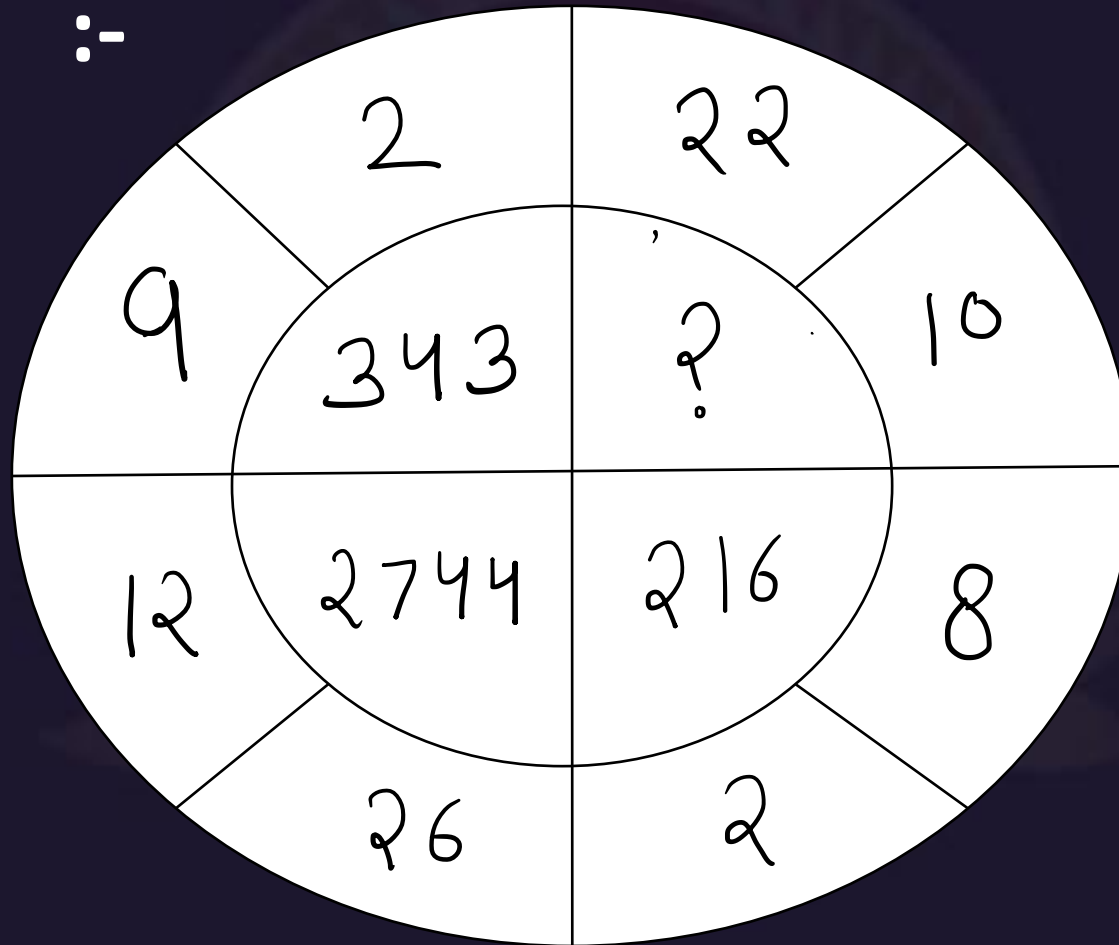
- (A) 15
- (B) 16
- (C) 17
- (D) 19





Find the missing :-

1. 1000
2. 1728
3. 878
4. 560





Find the missing :-

- (A) 12
- (B) 22
- (C) 25
- (D) 21


| | | |
|-----|-----|------|
| 11 | 17 | 8 |
| 5 | 3 | 15 |
| 3 | 7 | ? |
| 361 | 729 | 1225 |





Find the number of triangle (?)

- (A) 20
- (B) 26
- (C) 25
- (D) 23





Find the option which should replace (?)

43 : 26 : 4 :: 52 : 36 : ?

- (A) 27
- (B) 16
- (C) 25
- (D) 81





Find the option which should replace (?)

7 , 9 , 25 , 28 , ?

- (A) 31
- (B) 29.5
- (C) 28.5
- (D) 30.5





Find the option which should replace (?)

$$8 * 2 * 5 = 2645$$

$$5 * 7 * 3 = 7253$$

$$9 * 6 * 5 = ?$$

(A) 5369

(B) 6259

(C) 6815

(D) 9256





Find the option which should replace (?)

81 : 64 :: 32 : ?

- (A) 25
- (B) 16
- (C) 35
- (D) 49





Find the missing :-

- 1. 68
- 2. 71
- 3. 53
- 4. 76

| | | |
|---|----|---|
| | 8 | |
| 6 | 54 | 7 |
| | 4 | |

| | | |
|---|----|---|
| | 12 | |
| 8 | 51 | 4 |
| | 7 | |

| | | |
|---|----|---|
| | 14 | |
| 9 | ? | 5 |
| | 9 | |



Find the missing one (?)

55 : 32 :: 76 : ?

- (A) 14
- (B) 16
- (C) 18
- (D) 20





Find the missing one (?)

14 : 90 :: 26 : ?


- (A) 21
- (B) 31
- (C) 51
- (D) 31





Find the number of triangle (?)

- (A) 28
- (B) 29
- (C) 31
- (D) 30





Find the missing :-

47 : 65 :: 59 : ?

- (A) 95**
- (B) 110**
- (C) 106**
- (D) 118**





Find the option which should replace (?)

6 : 252 :: 5 : ?

- A. 225**
- B. 175**
- C. 150**
- D. 125**





Find the ODD ONE (?)

- (A) Troop / सेना
- (B) Group / समूह
- (C) Mob / मोब
- (D) Class / कक्षा





Find the missing :-




- (A) 84
- (B) 120
- (C) 27
- (D) 60

| | | | | |
|---|---|---|----|----|
| 4 | 3 | 2 | 8 | 32 |
| 5 | 3 | 1 | 9 | 24 |
| 7 | 3 | 3 | 7 | 70 |
| 2 | 9 | 4 | 12 | ? |



Find the missing :-

- (A) 9107
- (B) 97
- (C) 907
- (D) 1097





Find the missing :-



- (A) 18
- (B) 20
- (C) 19
- (D) NOT

| | | |
|----|---|---|
| 9 | 6 | 8 |
| 5 | 8 | 4 |
| 7 | 4 | ? |
| 11 | 2 | 7 |