



Mahendra's



UP POLICE कॉन्स्टेबल

REASONING

PREVIOUS YEAR

QUESTION PAPER

SUPER TRICK

LIVE

04:00 PM





Don't Let Your Studies Get Impacted By COVID-19 Pandemic

Stay Home & Study Online With Mahendras Hybrid Model

Features



Offline Classes



Live Interactive Online Classes



Same Faculty



Same Batch



Same Batch Timing



Online Library Facility



Recorded Video



PDFs



Classes In Both Model

CONTACT US:

1800-103-5225

www.mahendras.org





UPCOMING ONLINE BATCHES

April 2022

06 April 2022

10:30 AM to 12:30 PM

BANK ONLINE LIVE CLASS

05:30 PM to 07:30 PM

SSC ONLINE LIVE CLASS

BILINGUAL

13 April 2022

01:00 PM to 03:00 PM

BANK ONLINE LIVE CLASS

03:00 PM to 05:00 PM

SSC ONLINE LIVE CLASS

11:30 AM to 01:30 PM

BANK ONLINE LIVE CLASS

(English & Bengali)

07:30 PM to 09:30 PM

BANK ONLINE LIVE CLASS

(English & Odia)

BILINGUAL

05:30 PM to 06:30 PM

CCC ONLINE LIVE CLASS
(NIELIT COMPUTER COURSE)

BILINGUAL

20 April 2022

08:00 AM to 10:00 AM

BANK ONLINE LIVE CLASS

07:30 PM to 09:30 PM

SSC ONLINE LIVE CLASS

04:15 PM to 06:15 PM

SSC ONLINE LIVE CLASS

(English & Bengali)

01:00 PM to 03:00 PM

SSC ONLINE LIVE CLASS

(English & Odia)

BILINGUAL

10:30 AM to 11:30 AM

ENGLISH SPEAKING COURSE 2022
(SPEAKING COURSE)

BILINGUAL

27 April 2022

07:30 PM to 09:30 PM

BANK ONLINE LIVE CLASS

08:00 AM to 10:00 AM

SSC ONLINE LIVE CLASS

BILINGUAL



Maladri Kunchala 1 day ago

OU



REPLY




Find the missing :-

1921: EO :: 159 : ?

- (A) AF
- (B) OU
- (C) EA
- (D) OP



Which of the following diagrams indicates the best relation between (Gold Ring , Jewellery , Gold Article) / (गोल्ड रिंग, ज्वेलरी, गोल्ड आर्टिकल)



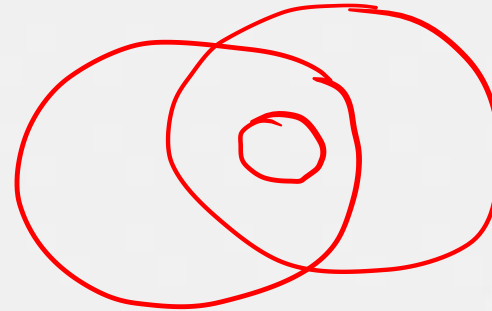
A.



B



.C



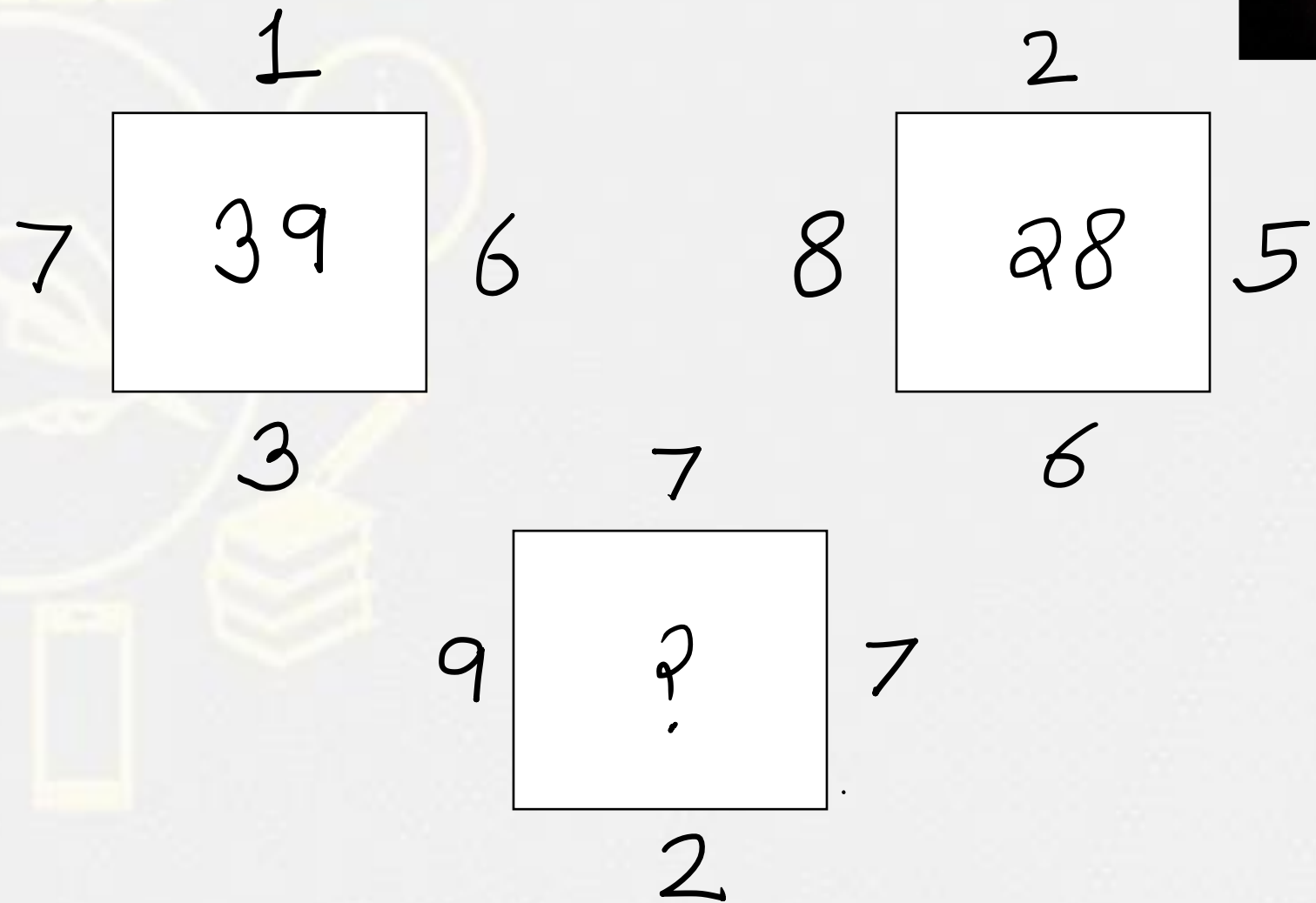
.D.





Find the option which should replace (?)

- (A) 49
- (B) 50
- (C) 44
- (D) 56



Find the missing :-

Table : Wood :: ? : ?

टेबल: लकड़ी ::? :?

1. Rubber : Latex / रबर: लेटेक्स
2. Wheat : crop / गेहूं : फसल
3. Paper : write / कागज: लिखो
4. Rubber : Erase / रबर: मिटाएँ



Find the missing :-

Cycle : Wheel :: Notebook : ?

साइकिल: पहिया :: नोटबुक:?

1. Write / लिखो
2. Writer / लेखक
3. Pages / पेज
4. Bind / बाइंड



Find the ODD :-

1. Chair / कुरसी
2. Sofa / सोफ़ा
3. Bench / बेंच
4. Pen / कलम



Find the missing :-

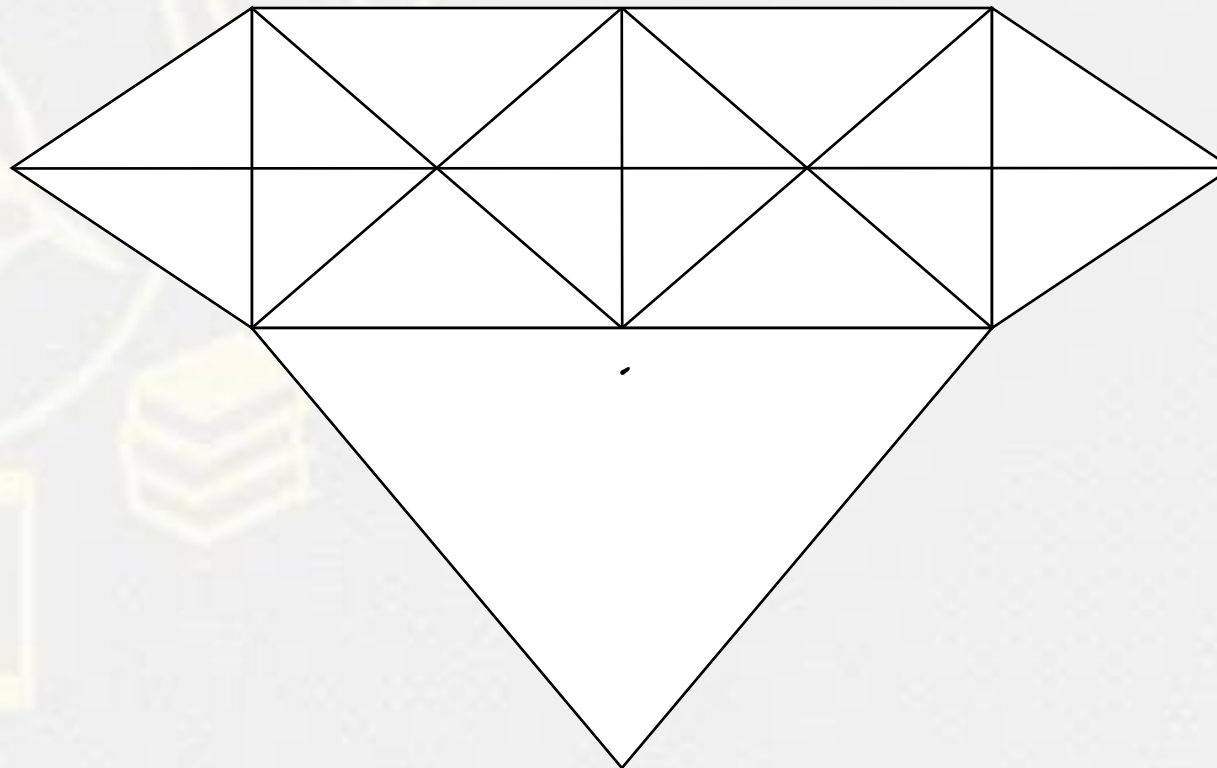
1. 66
2. 87
3. 78
4. 76

8	7	6
8	7	6
88	77	?
5632	3773	3132



Find the number of triangle (?)

- (A) 38**
- (B) 40**
- (C) 39**
- (D) 32**



Find the missing :-

1. 60
2. 15
3. 4
4. 2

15	16	10
3	2	2
5	4	3
0	4	?



Find the ODD :-

1. Pen / कलम
2. Pencil / पेंसिल
3. Rubber / रबर
4. Sketch pen / स्केच पेन



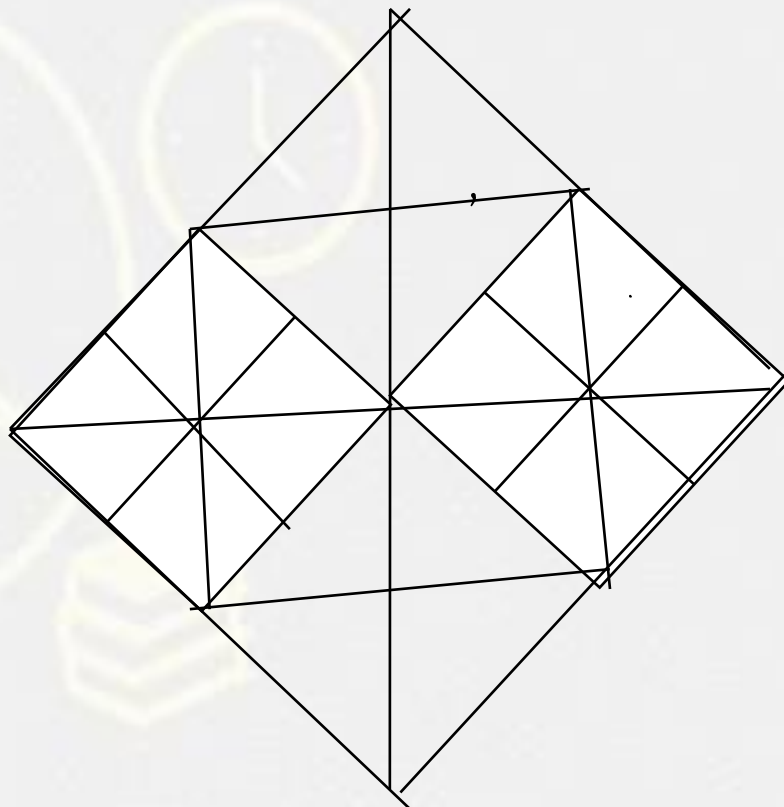
Find the ODD :-

1. DZVR
2. GCYU
3. QMIF
4. RNJF



Find the square :-

- 1. 12**
- 2. 16**
- 3. 14**
- 4. 18**



Arrange the number into ascending order.

- a. 864253
- b. 842563
- c. 825643
- d. 834562
- e. 852463

- A. abcde
- B. becda
- C. Cdbea
- D. deabc



Find the ODD :-

- 1. 268 - 16**
- 2. 246 - 12**
- 3. 357 - 15**
- 4. 579 - 13**



Find the missing :-

51 , 11 , 62 , 73 , 135 , ?

1. 208
2. 216
3. 323
4. 223



Find the missing :-

$$10 * 1 = 18$$

$$50 * 40 = 20$$

$$10 * 5 = ?$$

1. 10

2. 5

3. 15

4. 50

