



UP PET MOCK TEST



REASONING

30 DAYS

महाभ्यारस

DAY-15

*Previous
Year*



LIVE | 06:30 PM

By Kuldeep Mahendras



UPCOMING ONLINE BATCHES

October 2022

05 OCT 2022

05:30 PM to 07:30 PM

BANK ONLINE LIVE CLASS

01:00 PM to 03:00 PM

SSC ONLINE LIVE CLASS

BILINGUAL

12 OCT 2022

10:30 AM to 12:30 PM

BANK ONLINE LIVE CLASS

07:30 PM to 09:30 PM

SSC ONLINE LIVE CLASS

BILINGUAL

19 OCT 2022

03:00 PM to 05:00 PM

BANK ONLINE LIVE CLASS

10:30 AM to 12:30 PM

SSC ONLINE LIVE CLASS

BILINGUAL

26 OCT 2022

08:00 AM to 10:00 AM

BANK ONLINE LIVE CLASS

05:30 PM to 07:30 PM

SSC ONLINE LIVE CLASS

BILINGUAL

05 OCT 2022

04:15 PM to 06:15 PM

BANK ONLINE LIVE CLASS

BENGALI+ENGLISH

19 OCT 2022

06:30 PM to 08:30 PM

BANK ONLINE LIVE CLASS

BENGALI+ENGLISH



www.mahendras.org



7052477777/7052577777



The Shield 1 day ago 14 subscribers

Option b INGAIL is correct ans this session is too good and very helpfully thank you so much sir for help us ❤️❤️❤️🙏

👍 🗨️ REPLY ▶️

▼ 1 REPLY



🌸 PUJA KUNDU 🌸 ----- 1 day ago 8 subscribers

The ans is— ingail.... thank you sir for the amazing session 🙏

👍 🗨️ REPLY ▶️

▼ 1 REPLY



Chhavi Saxena 1 day ago

Home work answer is option B (INGAIL)

Very Nice Session Sir Thanku So much dear Sir 🙏

👍 🗨️ REPLY ▶️

▼ 1 REPLY



Vishnu Gupta 1 day ago 10 subscribers

INGAIL is the right ans thank you sir 🙏❤️🥰 Very super nice cls sir ❤️🙏

👍 🗨️ REPLY ▶️

▼ 1 REPLY



Komal Sharma 1 day ago




option 2 INJAIL sir...

👍 🗨️ REPLY ▶️

▼ 1 REPLY



Surbhi Sinha 1 day ago

INGAIL       

  REPLY 

▼ 1 REPLY



Kumar Subash 12 hours ago

You tube p jo pdhate h vo paid content k equal hota h ya niche

  REPLY 

▼ 1 REPLY



Hrx 1 day ago 29 subscribers

B

  REPLY 

▼ 1 REPLY



Mandvi Dixit 1 day ago

INGAIL

  REPLY 

▼ 1 REPLY

Share &
like!





From the given alternative words, select the word which can be formed using the letters of the give word :

दिए गए वैकल्पिक शब्दों से, उस शब्द का चयन करें जिसे शब्द के अक्षरों का उपयोग करके बनाया जा सकता है:

WINDIGITALLIFESTYLE



(1) ~~WODISA~~

(2) INGAIL

(3) ~~JOLLYNA~~

(4) ~~LONGJUMP~~

 Find the option which should replace (?)

$$(20 - 10) \rightarrow (24 - 8) = 16$$
$$T + J = 10 :: X + H = ?$$

- (A) 22
- (B) 32
- (C) 24
- (D) 16





Find the odd one out(?)

(A) Broad : Wide / ब्रॉड : वाइड

~~(B) Light : Heavy / हलका : भारी~~

(C) Tiny : Small / टिनी : छोटा

(D) Big : Large / बड़ा : विशाल

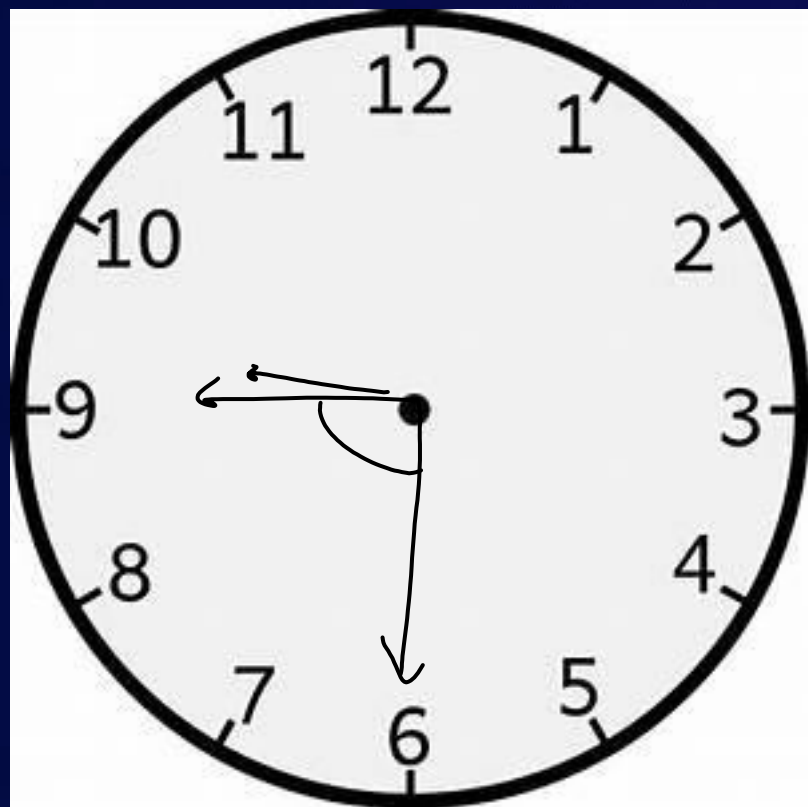





Q- What is the angle between the minute hand and the hour hand of a clock when the time is 9:30?

Q-समय 9:30 पर मिनट और घड़ी के घंटे के बीच का कोण क्या होगा ?

- (1) 100° (2) 90° (3) 105° (4) None of these




$$\begin{aligned} \text{MH} &= 15 \times 6^\circ = 90^\circ \\ \text{HH} &= 30 \times \frac{1}{2} = \frac{15^\circ}{2} \\ &= 7.5^\circ \\ &= 105^\circ \end{aligned}$$



Find the option which should replace (?)

$$\begin{array}{ccccccc} 6 & : & 24 & :: & 14 & : & ? \\ \hline 6 & & 6 & & 5 & & 5 \end{array}$$

(A) 61

(B) 75

(C) 131 ✓

(D) 65





Find the odd one (?)

- (A) 74, 82
- (B) 97, 63
- (C) 63, 81
- (D) 41, 40



$$7 \times 4 = 28$$

$$9 \times 7 = 63$$

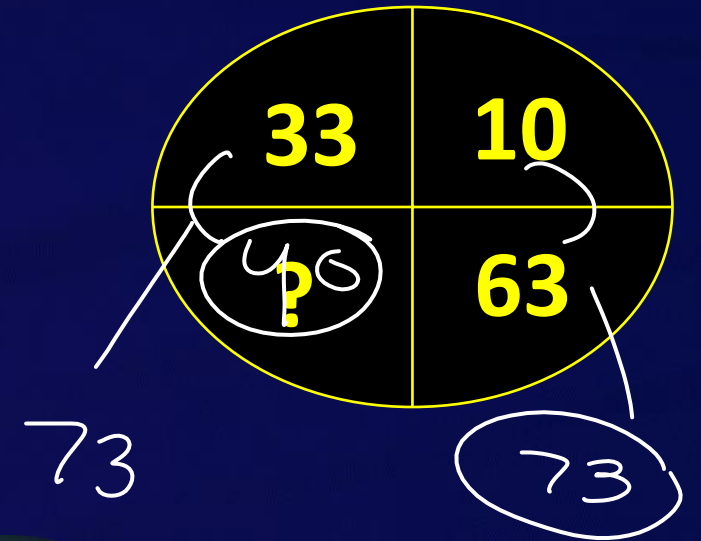
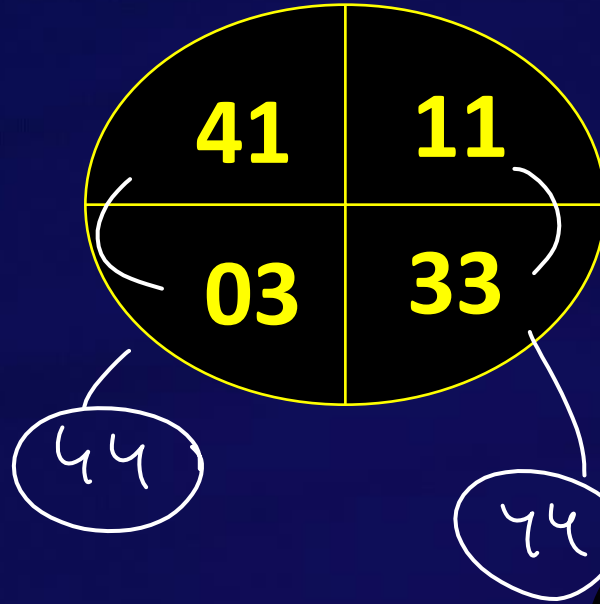
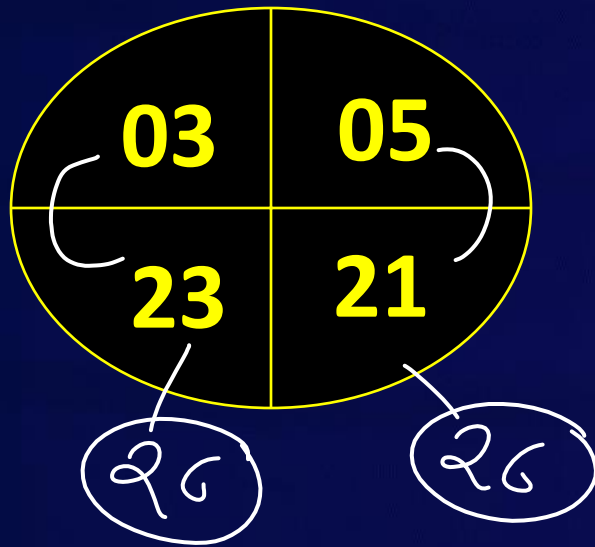
$$6 \times 3 = 18$$

$$4 \times 1 = 04$$





Which number will replace the question mark ?



(A) 52
(C) 71

(B) 40
(D) 56



Find the missing term(?)

RPU : TNS :: LDS : ?

(A) NIG

(B) NBG

(C) NBQ

(D) RIH

	18	16	21
	R	P	U
(+2)		(-2)	(-2)
	T	N	S
	20	14	19

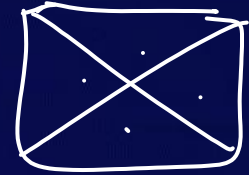
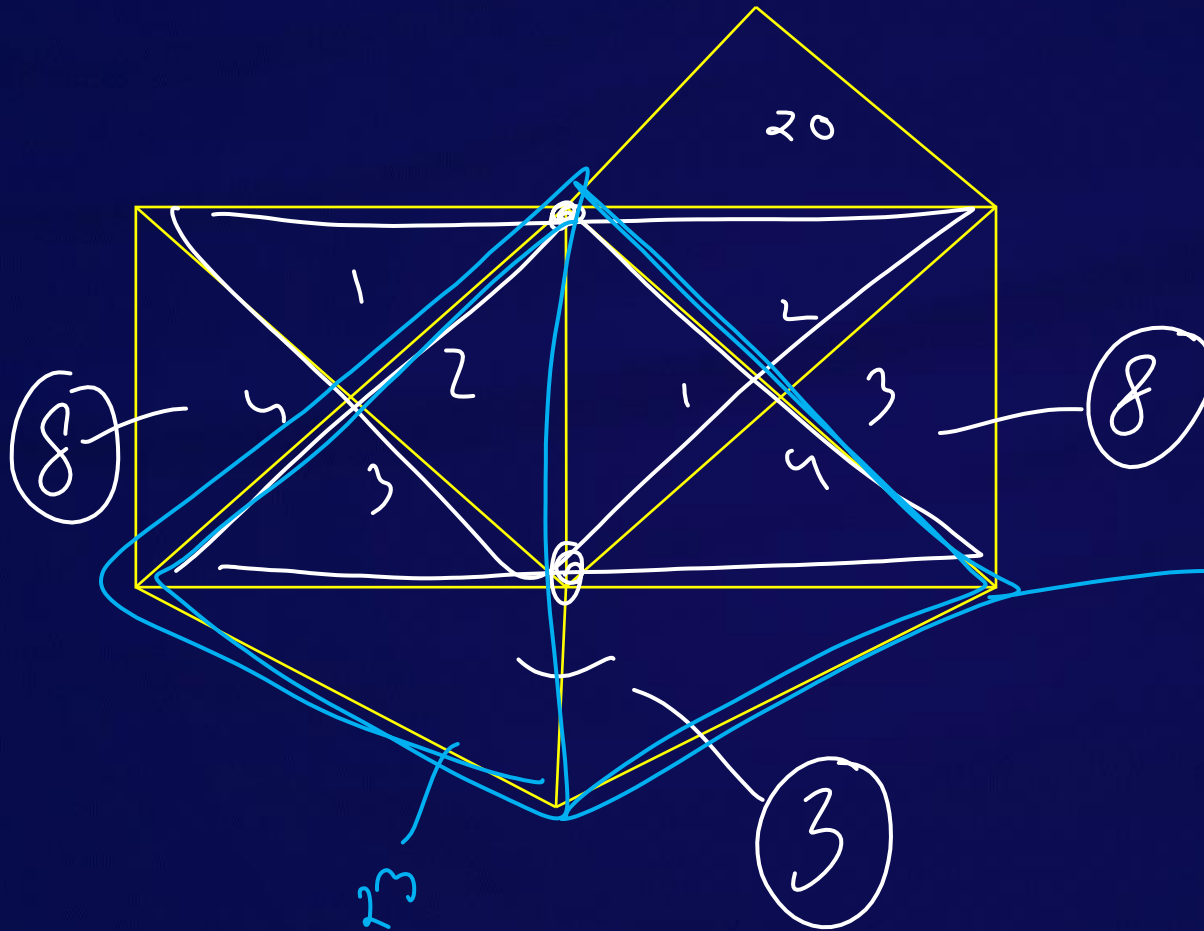


	12	4	19
	L	D	S
+2		-2	-2
	N	B	Q



Find the number of triangle (?)

- (A) 38
- (B) 24
- (C) 23
- (D) 42



$$4 \times 2 = 8$$



24



Find the missing term(?)

6 , 18 , 66 , ? , 1026

(A) 276

(B) 274

(C) 288

(D) 258

$$4^1 + 2 = 6$$

$$4^2 + 2 = 18$$

$$4^3 + 2 = 66$$

$$4^4 + 2 = 258$$





Find the missing term(?)

Hitler : Germany :: ? : ? / हिटलर : जर्मनी :: ? : ?

(A) **Shakerpear** : **England** / शेकरपीयर: इंग्लैंड

(B) **Mussolini** : **Italy** / मुसोलिनी: इटली ✓

(C) **Boris Yeltsin** : **Russia** / बोरिस येल्तसिन: रूस

(D) **Tulsidas** : **India** / तुलसीदास: भारत ✗

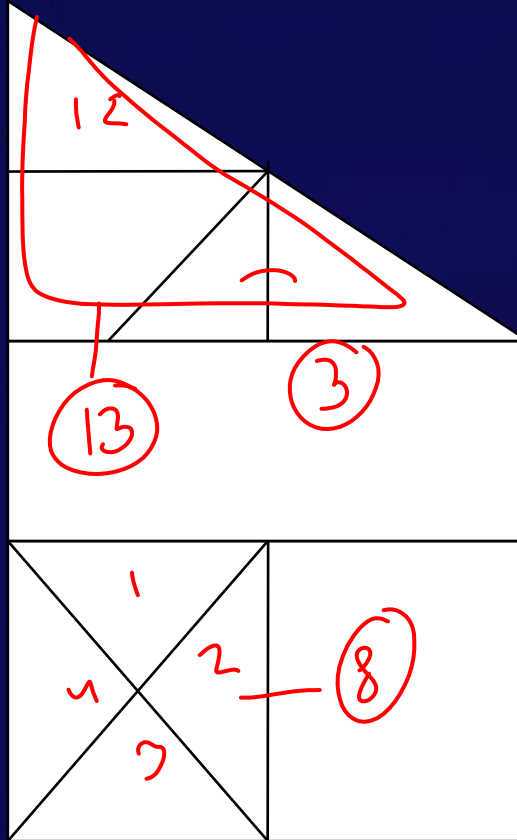






Find the number of triangle (?)

- (A) 38
- (B) 14
- (C) 13
- (D) 12





Find the missing term(?)

South : North west :: ? : South East

दक्षिण : उत्तर पश्चिम :: ? : दक्षिण पूर्व

- A. North / उत्तर**
- B. South East / दक्षिण पूर्व**
- C. West / पश्चिम**
- D. North West / उत्तर पश्चिम**





If today is Sunday then which day would be the 65th day after today ?

अगर आज रविवार है तो आज के 65 वें दिन कौन सा दिन होगा?

(A) Monday

(B) Tuesday

(C) Wednesday

(D) Sunday





Find the missing term(?)

$$28 : 14 :: \underline{172} : ?$$

- (A) 11
- (B) 13
- (C) 15
- (D) 14

No. of letters

$$2 \times 8 = 16 - 2 = 14$$
$$1 \times 7 \times 2 = 14 - 3 = 11$$



Find the missing term(?)

$$46 \quad 92 \\ \text{DF} : 42 :: \text{IB} : ?$$

(A) 92

(B) 81

(C) 80

(D) 11

$$4 \times 6 = 24$$

$$9 \times 2 = 18$$





Which number will replace the question mark ?

12	16	22
23	33	18
08	13	?

* 21222



$16 + 33 = 49$

$12 + 23 = 35$

$22 + 18 = 40$

(A) 40

(C) 12

~~(B) 04~~

(D) 14



Find the missing term(?)

AUSTRALIA : PARLIAMENT :: ? : ALTHING

ऑस्ट्रेलिया : संसद :: ? : अलथिंग

(A) Afghanistan / अफगानिस्तान

(B) Bangladesh / बांग्लादेश

(C) Iceland / आइसलैंड ✓

(D) Israel / इज़राइल





Find the missing term(?)

Operation Blue Star : 1984 :: Bhopal gas Tragedy : ?

ऑपरेशन ब्लू स्टार : 1984 :: भोपाल गैस त्रासदी : ?

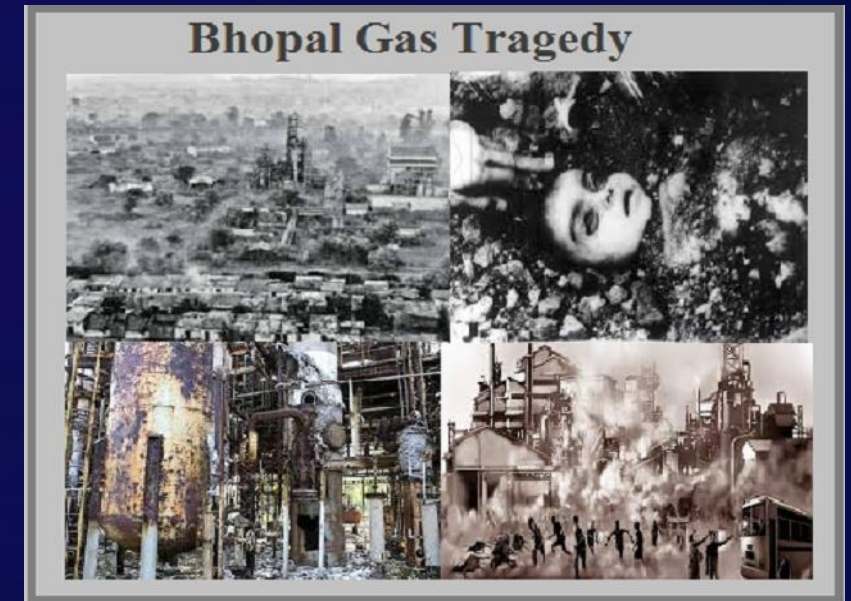


(A) 1992

(B) 1975

(C) 1984

(D) 1999





Find the number of triangle (?)

(A) 64

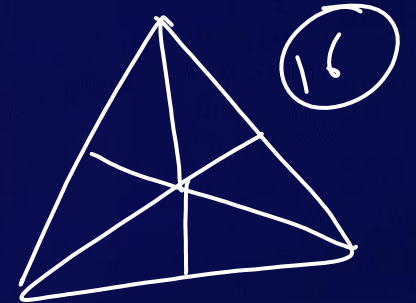
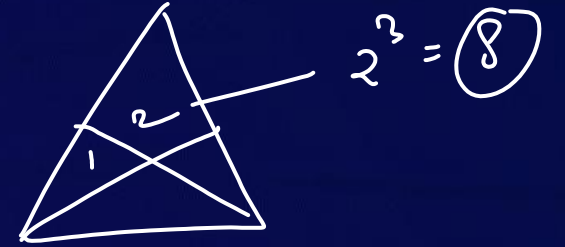
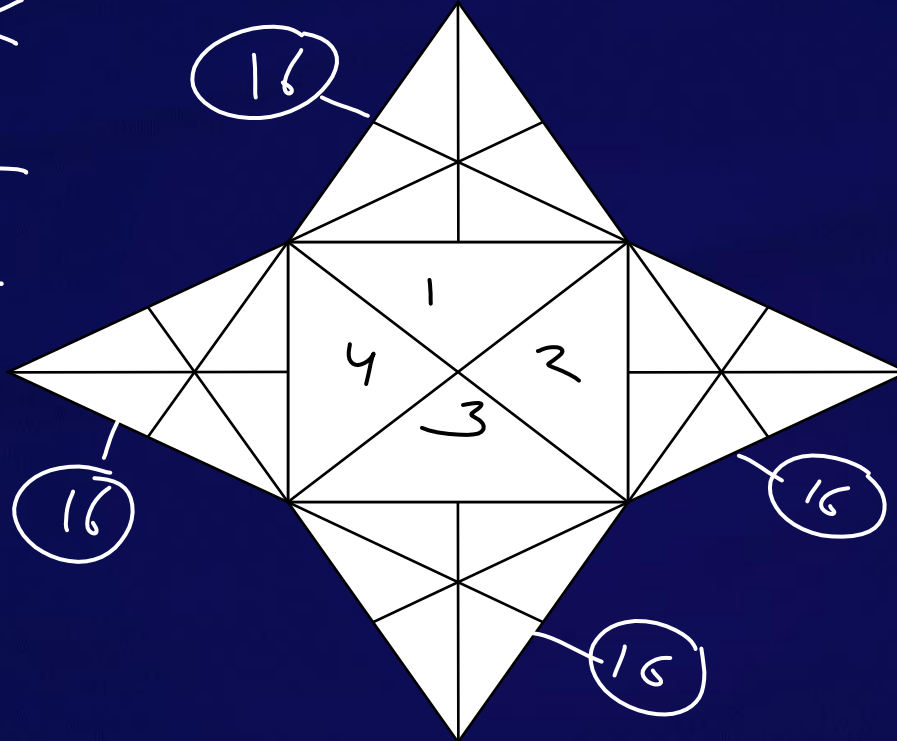
(B) 72

(C) 66

(D) 70

$$\begin{array}{r} \cancel{48} \\ + \cancel{8} \\ \hline \cancel{56} \end{array}$$



$$\begin{array}{r} 54 \\ + 4 \\ \hline 72 \end{array}$$





Find the number of triangle (?)

- (A) 16
- (B) 14
- (C) 13
- (D) 12





Find the option which should replace (?)

$$1 + 4 = 15$$

$$8 + 2 = 60$$

$$3 + 6 = 27$$

$$9 + 7 = ?$$

$$1^2 - 4^2 = 15$$

$$8^2 - 2^2 = 60$$

$$3^2 - 6^2 = 27$$

$$9^2 - 7^2 = 32$$

$$\begin{array}{r} 8 \\ 4 \\ \hline 15 \\ 30 \\ \hline 32 \end{array}$$

(A) 37

(B) 49

(C) 32

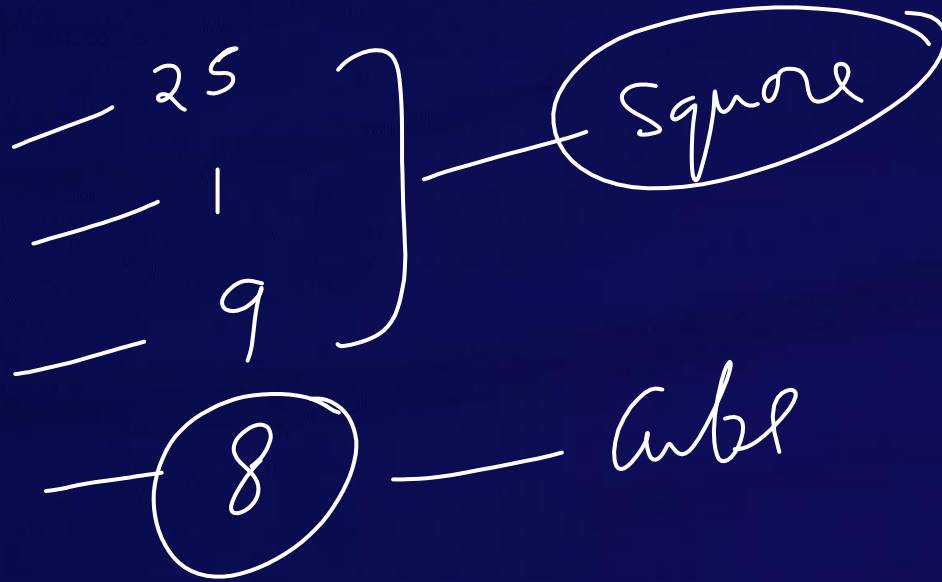
(D) 35





Find the odd one (?)

- (A) Y
- (B) A
- (C) I
- (D) H

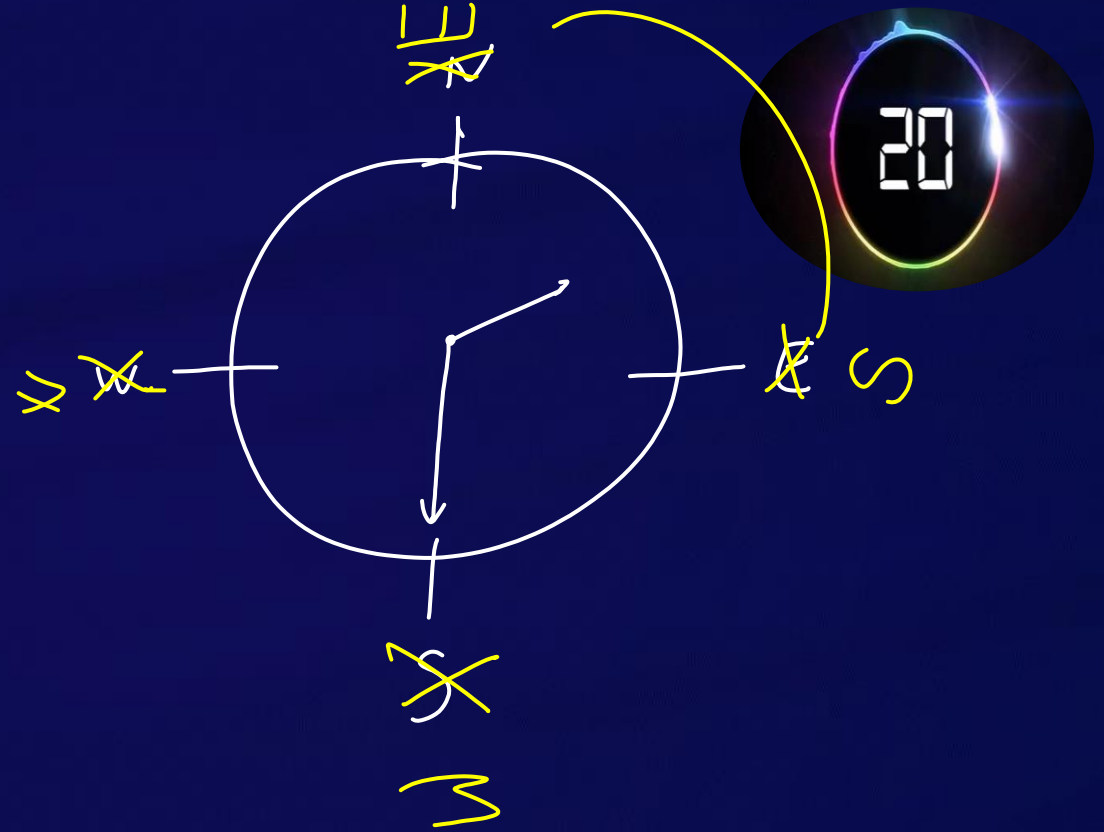




In a clock time shows 2:30, if the accordingly minute hand is at west than in which direction is the hour hand(?)

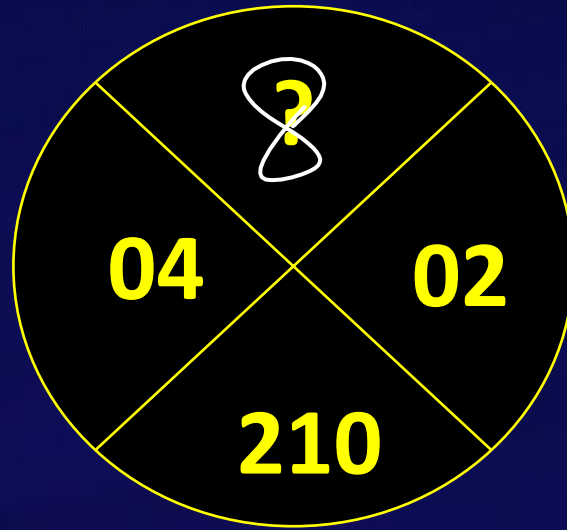
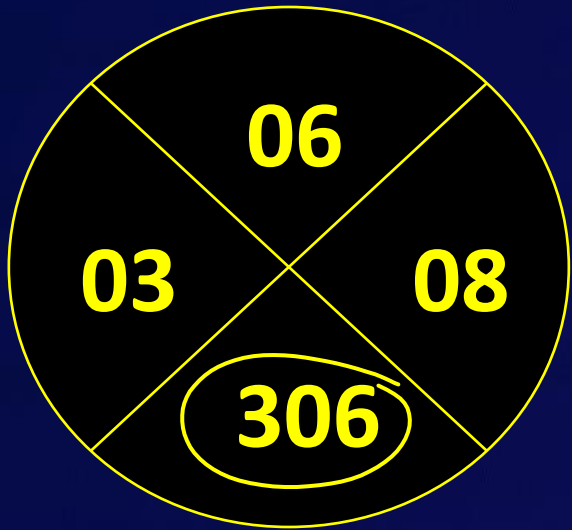
एक घड़ी में समय 2:30 दिखाता है, यदि तदनुसार मिनट की सुई पश्चिम की ओर है तो घंटे की सुई किस दिशा में है (?)

- (A) North East / उत्तर पूर्व
- (B) North West / उत्तर पश्चिम
- (C) South East / दक्षिण पूर्व ✓
- (D) South West / दक्षिण पश्चिम





Find the missing term(?)



(A) 6

~~(B) 8~~

(C) 5

(D) 4

$$6 + 3 + 8 = 17^2 + 17 = 289 + 17 = \textcircled{306}$$



$$4 + 2 + \textcircled{8} = 14^2 + 14 = 196 + 14 = \textcircled{210}$$



Which of the following diagrams indicates the best relation between Paper, Stationery and Ink ?
निम्नलिखित में से कौन सा आरेख कागज, स्टेशनरी और स्याही के बीच सबसे अच्छे संबंध को दर्शाता है?



H.W.



IBPS PO
SBZ Clerk
SBZ PO
FCI 20

Reasoning - Bank (9.00 AM)