

SSC GD 2021



REASONING

25 कदम
Exam की ओर.....

Complete
MOCK TEST

25/25

LIVE  **8:30 PM**





Don't Let Your Studies Get Impacted By COVID-19 Pandemic

Stay Home & Study Online With Mahendras Hybrid Model

Features



Offline Classes



Live Interactive Online Classes



Same Faculty



Same Batch



Same Batch Timing



Online Library Facility



Recorded Video



PDFs



Classes In Both Model

CONTACT US:

1800-103-5225

www.mahendras.org





UPCOMING ONLINE BATCHES

November 2021

03 Nov 2021

10:30 AM to 12:30 PM

LIVE PREMIUM GREEN CARD
(BANK-PO & CLERK)

01:00 PM to 03:00 PM

LIVE PREMIUM GREEN CARD
(BANK-PO & CLERK)

05:30 PM to 07:30 PM

LIVE PREMIUM SILVER CARD
(SSC CGL & CHSL)

BILINGUAL

10 Nov 2021

03:00 PM to 05:00 PM

LIVE PREMIUM GREEN CARD
(BANK-PO & CLERK)

08:00 AM to 10:00 AM

LIVE PREMIUM SILVER CARD
(SSC CGL & CHSL)

BILINGUAL

17 Nov 2021

08:00 AM to 10:00 AM

LIVE PREMIUM GREEN CARD
(BANK-PO & CLERK)

05:30 PM to 07:30 PM

LIVE PREMIUM GREEN CARD
(BANK-PO & CLERK)

10:30 AM to 12:30 PM

LIVE PREMIUM SILVER CARD
(SSC CGL & CHSL)

BILINGUAL

24 Nov 2021

10:30 AM to 12:30 PM

LIVE PREMIUM GREEN CARD
(BANK-PO & CLERK)

07:30 PM to 09:30 PM

LIVE PREMIUM GREEN CARD
(BANK-PO & CLERK)

03:00 PM to 05:00 PM

LIVE PREMIUM SILVER CARD
(SSC CGL & CHSL)

BILINGUAL





🍁 PUJA KUNDU 🍁 16 hours ago

THE CORRECT ANSWER IS -9:47:40.....AMAZING SESSION SIRTHANK YOU SOO MUCH SIR 🙏

👍 1 🗨️ REPLY

▶ [View reply from Mahendras : Online Videos For Govt. Exams](#)



Viśhñù Güptâ 16 hours ago

9:47:40 is the right ans

Very Amazing session sir thank you so much sir ❤️ 🙏 love you sir ❤️

👍 1 🗨️ REPLY

▶ [View reply from Mahendras : Online Videos For Govt. Exams](#)



Abhishek Pandey 16 hours ago

Option -(A). nice session sir

👍 1 🗨️ REPLY

▶ [View reply from Mahendras : Online Videos For Govt. Exams](#)



SANIA _____ 16 hours ago

Shandaar session sir 🙏 🙏

option A 🔥 🔥 🔥 🔥 🔥

👍 1 🗨️ REPLY

▶ [View reply from Mahendras : Online Videos For Govt. Exams](#)



Deepali Yadav 16 hours ago

Option A..... Nice session sir 🙏 ... Thank you so much sir 🙏

1 REPLY

▼ [View reply from Mahendras : Online Videos For Govt. Exams](#)



Anurag Vishwakarma 16 hours ago

Home work option A sir

Nice section sir ji 🙏🙏🙏🙏🙏

1 REPLY

▼ [View reply from Mahendras : Online Videos For Govt. Exams](#)



arun ch mandal 16 hours ago

opt A

nice session sir

1 REPLY

▼ [View reply from Mahendras : Online Videos For Govt. Exams](#)



bablu sharma 2 hours ago

Option a right answer

REPLY



future YT's 16 hours ago

A is the correct answer 😊😊

1 REPLY



Hrithik_____ 16 hours ago

Option A

1 [REPLY](#)

[View reply from Mahendras : Online V](#)



Bharti Chaudhary 16 hours ago

Ans_9:47:40

1 [REPLY](#)

[View reply from Mahendras : Online V](#)



Kapil Bhagat 16 hours ago

AAA

[REPLY](#)



Masum Idki 😊 16 hours ago

A

1 [REPLY](#)

[View reply from Mahendras : Online V](#)



Preeti 16 hours ago

A

1 [REPLY](#)

[View reply from Mahendras : Online V](#)

Time of **2 : 12 : 20** is being seen in the mirror , what time will it show ?

2:12:20 का समय दर्पण में देखा जा रहा है, यह किस समय दिखाई देगा?

- (A) 9 : 47 : 40
- (B) 9 : 45 : 41
- (C) 9 : 42 : 43
- (D) 9 : 41 : 45



Find the option which should replace (?)

243 : 27 :: 354 : ?

- (A) 36
- (B) 40
- (C) 45
- (D) 60



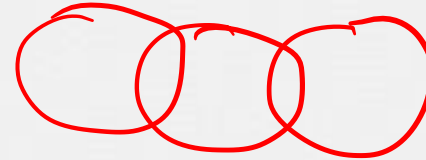

Find the missing one (?)

2F : FD :: 3C : ?

- (A) HU
- (B) HA
- (C) HO
- (D) BG



Which of the following diagrams indicates the best relation between
(Players , Singers , Students) / (खिलाड़ी, गायक, छात्र)



A.

B

.C

.D.

Find the option which should replace (?)

BDE : 697

CCD :: ?

- (A) 677**
- (B) 666**
- (C) 667**
- (D) 776**



Find the option which should replace (?)

29 : 319 :: 23 :: ?

- (A) 252**
- (B) 151**
- (C) 46**
- (D) 115**



Find the MISSING (?)

335 : 16 :: 837 :

- (A) 216
- (B) 225
- (C) 289
- (D) 676



Find the MISSING (?)

16 : 46 :: 10 : ?

- (A) 25**
- (B) 52**
- (C) 64**
- (D) 63**



Find the MISSING (?)

Agenda : Meeting :: ? : ?

एजेंडा: बैठक :: ? : ?



- (A) Programme : Function / कार्यक्रम: कार्य
(B) Performance : Ticket / प्रदर्शन: टिकट
(C) Map : Scale / मानचित्र: स्केल
(D) Footnote : Article / फुटनोट: लेख

Find the option which should replace (?)

11 : 1210 :: ? : ?

- (A) 6 : 216
- (B) 7 : 1029
- (C) 8 : 448
- (D) 9 : 729



Find the option which should replace (?)

(3 , 5 , 7)

(A) 29, 35 , 41

(B) 23 , 29 , 30

(C) 19 , 21 , 31

(D) 11 , 13 , 19



Find the option which should replace (?)

$$\text{If } 62 * 73 * 63 = 51$$

$$54 * 49 * 27 =$$

- (A) 60
- (B) 62
- (C) 66
- (D) 70



Find the option which should replace (?)

$$5 * 9 * 4 = 7$$

$$5 * 3 * 1 = 4$$

$$7 * 9 * 1 = ?$$

(A) 5

(B) 6

(C) 7

(D) 8



Which of the following diagrams indicates the best relation between **Horses , Parrot and Birds (घोड़े, तोता और पक्षी) ?**



A.

B

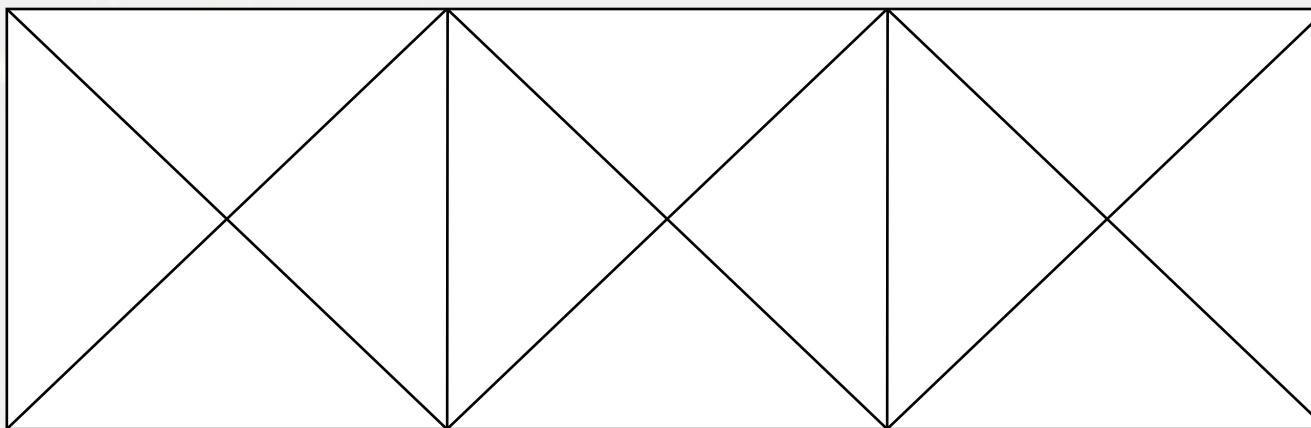
.C

.D.



Find the number of triangle?

- (A) 28
- (B) 20
- (C) 22
- (D) 24



Find the odd one out(?)

- A. CA**
- B. FD**
- C. KI**
- D. TQ**



