



Don't Let Your Studies Get Impacted By COVID-19 Pandemic

Stay Home & Study Online With Mahendras Hybrid Model

Features



Offline Classes



Live Interactive Online Classes



Same Faculty



Same Batch



Same Batch Timing



Online Library Facility



Recorded Video



PDFs



Classes In Both Model

CONTACT US:

1800-103-5225

www.mahendras.org





UPCOMING ONLINE BATCHES

August 2021

04 AUG 2021

10:30 AM to 12:30 PM

LIVE PREMIUM GREEN CARD
(BANK PO & CLERK)

07:30 PM to 09:30 PM

LIVE PREMIUM SILVER CARD
(SSC CGL & CHSL)

07:30 PM to 09:30 PM

LIVE CLASS COURSE
(MATHS)

03:00 PM to 05:00 PM

LIVE CLASS COURSE
(UP SI)

BILINGUAL

11 AUG 2021

01:00 PM to 03:00 PM

LIVE CLASS COURSE
(TET & CTET)

05:30 PM to 07:30 PM

LIVE PREMIUM GREEN CARD
(BANK PO & CLERK)

08:00 AM to 10:00 AM

LIVE CLASS COMPLETE COURSE
(SSC GD)

BILINGUAL

18 AUG 2021

08:00 AM to 10:00 AM

LIVE PREMIUM GREEN CARD
(BANK PO & CLERK)

01:00 PM to 03:00 PM

LIVE PREMIUM SILVER CARD
(SSC CGL & CHSL)

BILINGUAL

25 AUG 2021

07:30 PM to 09:30 PM

LIVE PREMIUM GREEN CARD
(BANK PO & CLERK)

BILINGUAL



Mahendra's
**FREEDOM
FESTIVAL**

Best deal

13th - 15th Aug 2021

Upto

75%

Discount

ON ALL DIGITAL PRODUCTS*

Use code:

FREEDOM75

*Except branch admission & membership

The Staff Selection Commission has decided to re-schedule its following examinations as per the details given below:

S. No.	Name of Examination	Revised Schedule
1.	Sub-Inspector in Delhi Police, CAPFs and ASI in CISF Examination (Paper-II), 2019	26.07.2021
2.	Combined Higher Secondary (10+2) Level Examination (Tier-I), 2020 - For left-over candidates	04.08.2021-12.08.2021
3.	Combined Graduate Level Examination (Tier-I), 2020	13.08.2021-24.08.2021

S No	Name of Examination	Paper/ Stage	Schedule of Examination
1	Combined Graduate Level Examination-2019	Skill Test	15.09.2021 to 16.09.2021
2	Junior Engineer (Civil, Mechanical, Electrical and Quantity Surveying & Contracts) Examination, 2020	Paper-II	26.09.2021
3	Multi Tasking (Non-Technical) Staff Examination, 2020	Paper-I	05.10.2021 to 20.10.2021
4	Stenographer Grade 'C' and 'D' Examination, 2019	Skill Test	21.10.2021 To 22.10.2021



PUJA KUNDU 12 hours ago

THE ANS IS "D"...NICE SESSION SIR 🙏🙏 THANK YOU SOO MUCH 🙏🙏

👍 1 🗨️ REPLY

▼ [View reply from Mahendras : Online Videos For Govt. Exams](#)



sarita rawat 13 hours ago

Homework answer

Option (D)

Awesome session sir 🙏👍👍👍

Thanku so much sir 🙏

👍 🗨️ REPLY

▼ [View reply from Mahendras : Online Videos For Govt. Exams](#)



Viśhñù Güptâ 16 hours ago

Option (D) right ans

Very nice session sir ♥️🙏

👍 🗨️ REPLY

▼ [View reply from Mahendras : Online Videos For Govt. Exams](#)



Manidipa Mandal 16 hours ago

Option (D) .

Thank you sir.....Nice session sir 🙏🙏🙏🙏🙏

👍 🗨️ REPLY



DEEKSHA SHARMA 16 hours ago

Home work answer is DD

very nice session sir 🙏🙏

👍 🗨️ REPLY

▼ [View reply from Mahendras : Online Videos For](#)



Chhavi Saxena 16 hours ago

Home work answer is option D

Very Nice Session sir 🙏🙏🙏🙏

👍 🗨️ REPLY

▼ [View reply from Mahendras : Online Videos For](#)



Ravindra Singh 16 hours ago

Home work answer optin DDDD

Owesome class session

👍 🗨️ REPLY

▼ [View reply from Mahendras : Online Videos For](#)



Masum Idki 😊 16 hours ago

Option d is the correct ans 👍👍

Very dhashu session 🙏🙏

👍 🗨️ REPLY

▼ [View reply from Mahendras : Online Videos For](#)



barbie dancer 16 hours ago

D hoga sir 👍👍👍👍❤️ ossm session sir

👍 🗨️ REPLY



MISTY MISTY 📖🔥 16 hours ago

Nice session sir right answer is option number d

👍 🗨️ REPLY

▼ [View reply from Mahendras : Online Videos For Govt.](#)



Sukhchand Paradkar 43 minutes ago

DD 🙏🙏

👍 🗨️ REPLY



nikita Chauhan 14 hours ago

Homework ANS option DDD

👍 1 🗨️ REPLY

▼ [View reply from Mahendras : Online Videos For Govt.](#)



Abhishek Pandey 12 hours ago

Answer is (d)

👍 🗨️ REPLY

▼ [View reply from Mahendras : Online Videos For Govt.](#)



sahil Israni 11 hours ago

Hw ans : D)

👍 🗨️ REPLY



Preeti 16 hours ago

Hw question and is ddd

👍 🗨️ REPLY

▼ [View reply from Mahendras : Online Videos For Govt.](#)



Naved Khan 14 hours ago

Ddd

👍 🗨️ REPLY

▼ [View reply from Mahendras : Online Videos For Govt.](#)



Preeti rajput 16 hours ago

dd

👍 🗨️ REPLY

▼ [View reply from Mahendras : Online Videos For Govt.](#)



Itu Soren 23 hours ago

Ans:- Option D .

VERY NICE SESSION 😊🙏

👍 1 🗨️ REPLY



vaibhav sahu 11 hours ago

aans d is right sir thanq so much 🙏🙏🙏🙏🙏🙏🙏🙏🙏🙏

👍 🗨️ REPLY



Satyam Pandey 13 hours ago

D correct ans 🙏🙏

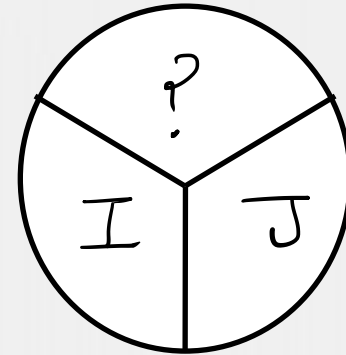
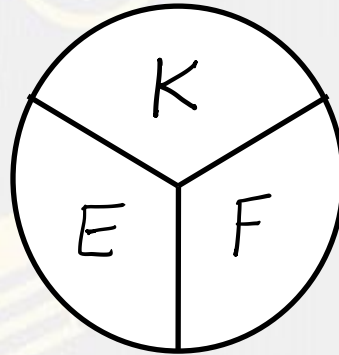

Super session sir g 🙏🙏

👍 🗨️ REPLY

Find the missing :-



1. S
2. T
3. W
4. Z

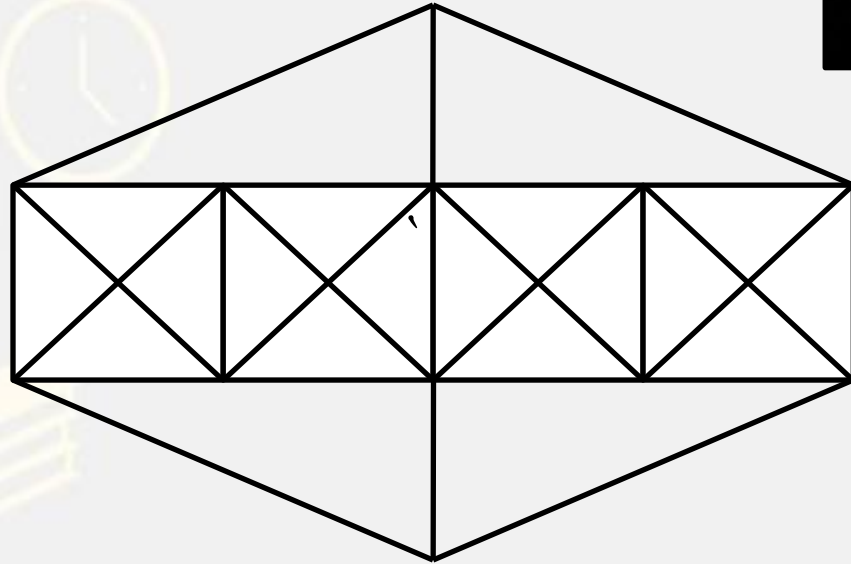


Find number of triangle in the given figure ?

दी गई आकृति में त्रिभुज की संख्या ज्ञात कीजिए?

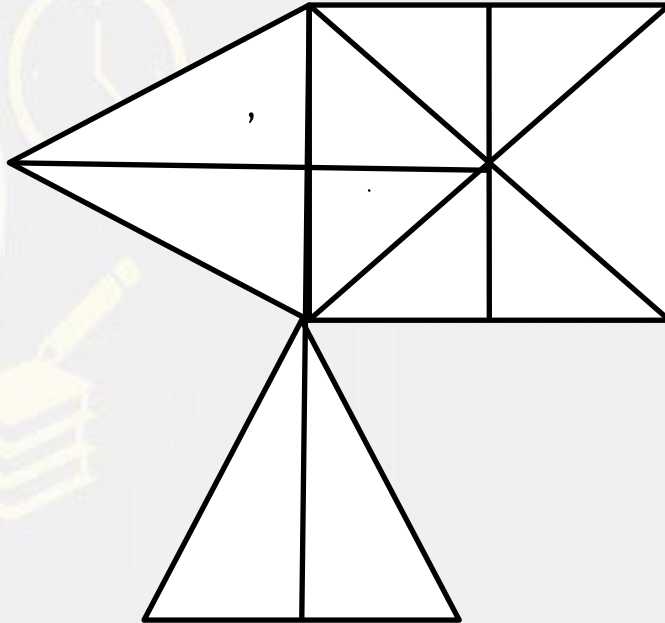


- (A) 40
- (B) 38
- (C) 44
- (D) 46



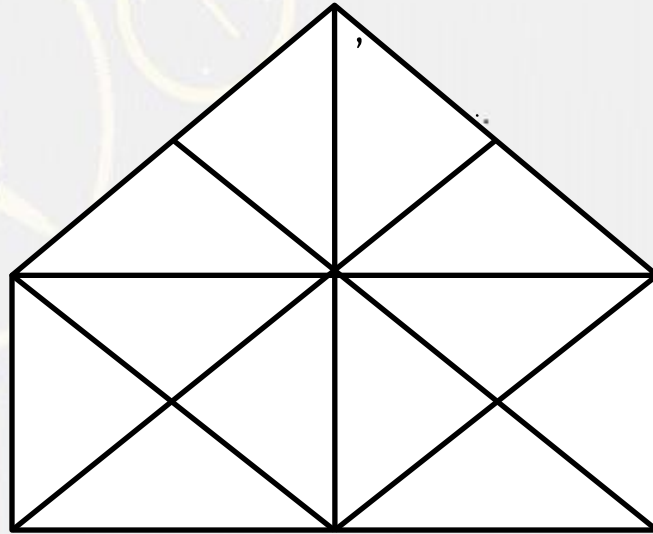
Find the triangle (?)

- 1. 31
- 2. 26
- 3. 23
- 4. 22



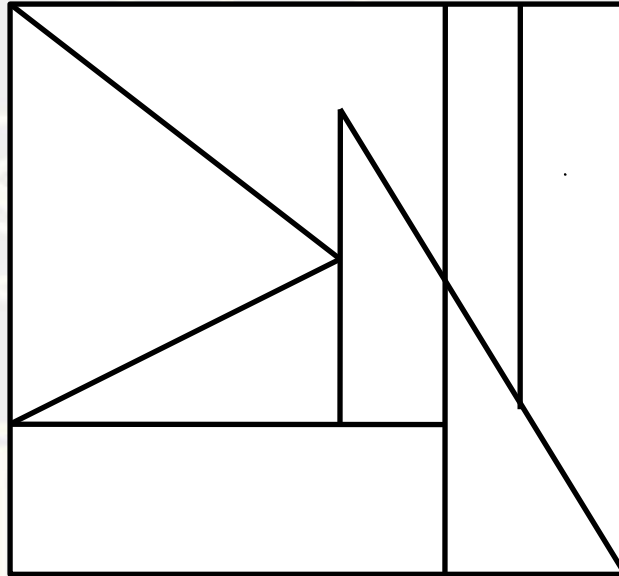
Find the triangle (?)

- (A) 20
- (B) 25
- (C) 27
- (D) 24



Find the TRIANGLE :-

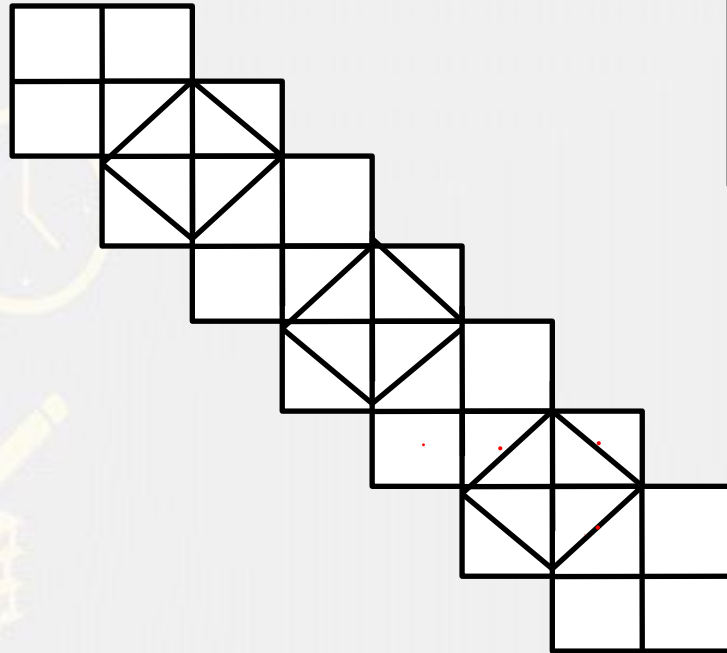
- (A) 3
- (B) 1
- (C) 4
- (D) 2



Find number of square in the given figure ?

दिए गए आंकड़े में वर्ग की संख्या ज्ञात कीजिए

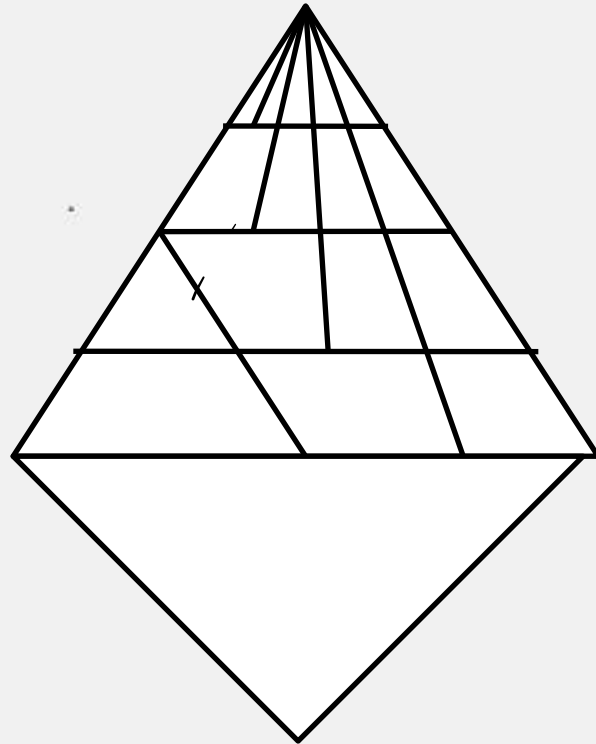
- (A) 34
- (B) 29
- (C) 32
- (D) 35



Find number of triangle in the given figure ?

दी गई आकृति में त्रिभुज की संख्या ज्ञात कीजिए?

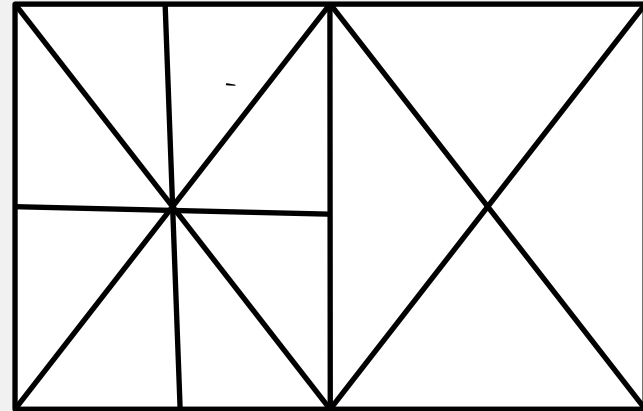
- (A) 37
- (B) 35
- (C) 36
- (D) 38



Find number of triangle in the given figure ?

दी गई आकृति में त्रिभुज की संख्या ज्ञात कीजिए?

- (A) 24
- (B) 26
- (C) 28
- (D) 30



Find number of triangle in the given figure ?

दी गई आकृति में त्रिभुज की संख्या ज्ञात कीजिए?

- (A) 20
- (B) 18
- (C) 17
- (D) 19

