

SSC MTS/HAWALDAR/CHSL



REASONING

LIVE EXAM

तैयारी जीत की...

LIVE

08:30 PM





UPCOMING ONLINE BATCHES

June 2022

01 June 2022

08:00 AM to 10:00 AM

BANK ONLINE LIVE CLASS

03:00 PM to 05:00 PM

SSC ONLINE LIVE CLASS

BILINGUAL

08 June 2022

01:00 PM to 03:00 PM

BANK ONLINE LIVE CLASS

07:30 PM to 09:30 PM

SSC ONLINE LIVE CLASS

BILINGUAL

15 June 2022

05:30 PM to 07:30 PM

BANK ONLINE LIVE CLASS

10:30 AM to 12:30 PM

SSC ONLINE LIVE CLASS

BILINGUAL

 www.mahendras.org

 7052477777/7052577777



Mohit.. 10 hours ago · 1 subscribers

Thank-you Sir for this Amazing Class session of today's.. 🙏👍

And

My Answer for today's homework is like-
Option A- 70....

Read more



REPLY



RIYA 😊😊 11 hours ago

Very useful session sir 🙏

Right answer is 70(62+8)



REPLY



🌸 PUJA KUNDU 🌸 11 hours ago · 8 subscribers

The answer is -----70..((62+(6+2)..

Thank you sir for the 🔥 session 🙏🙏



REPLY



Vishnu Gupta 11 hours ago · 3 subscribers

70 is the right ans

Very nice session sir thank you 🙏 sir love you sir 🙏❤



REPLY





SAPANA 8 hours ago

H.W. ans70

Nice session sir 👍👍👍

Thank you sir..... 🙏🙏🙏

👍 🗨️ REPLY 📺



Ankit Vish 11 hours ago 112 subscribers

Answer. AAA

Lajwab session sir 👍👍

👍 1 🗨️ REPLY 📺



arun ch mandal 10 hours ago

70

thank you sir

nice session

👍 🗨️ REPLY 📺



RAMOO DELHI 11 hours ago 1 subscribers

Sir aap class me aate ho to jaise need me rahate ho thoda energetic hoka teaching kiya kare 🏠🏠 📺 🏃🏃🏃🏃


👍 🗨️ REPLY 📺



HRX _____ 2 hours ago

70

👍 🗨️ REPLY 📺



HRX _____ 2 hours ago

70



REPLY



puspranjan singh 11 hours ago

Aaa



REPLY



Mannveer Singh 9 hours ago

70



REPLY





Find the option which should replace (?)



23, 28, 38, 49, 62, ?

- (A) 70**
- (B) 77**
- (C) 85**
- (D) 75**



Find the ODD one(?)

- A. 3425**
- B. 4541**
- C. 5661**
- D. 6783**





Find the ODD one(?)

- A. 9 , 36 , 81**
- B. 32 , 64 , 85**
- C. 55 , 135 , 165**
- D. 35 , 63 , 78**





Find the ODD one(?)

- A. 2424**
- B. 8261**
- C. 6354**
- D. 4248**





Find the ODD one(?)

- A. 792**
- B. 692**
- C. 198**
- D. 990**






Find the ODD one(?)

- A. 2 8 4**
- B. 8 32 16**
- C. 3 12 6**
- D. 5 45 15**





Find the option which should replace (?)



- A. 1
- B. 26
- C. 39
- D. 45



Find the option which should replace (?)

Ocean : Pond :: Kilometer : ?


महासागर : तालाब :: किलोमीटर : ?

- A. Centimetre / सेंटीमीटर
- B. Meter / मीटर
- C. Millimetre / मिलीमीटर
- D. Decimeter / मिटर का दशमांश





Find the option which should replace (?)



- A. 46
- B. 34
- C. 41
- D. 21



There are 30 days in ___ months of a years .
साल के ___ महीनों में 30 दिन होते हैं।

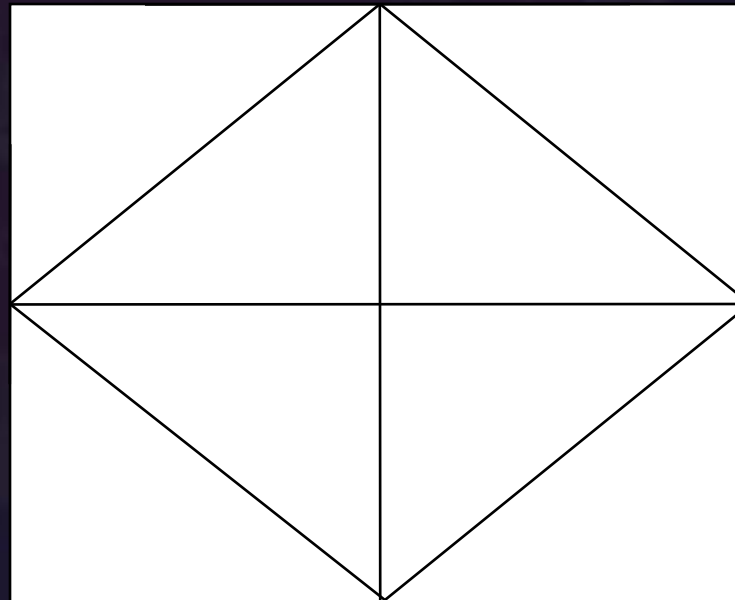
- A. 3
- B. 4
- C. 5
- D. 7





Find number
संख्या ज्ञात कीजिए?

- (A) 10
- (B) 11
- (C) 12
- (D) 14





Find number of triangle in the given figure ?
दी गई आकृति में त्रिभुज की संख्या ज्ञात कीजिए?

- (A) 18
- (B) 20
- (C) 24
- (D) 16





Find the option which should replace (?)



- A. 13
- B. 14
- C. 21
- D. 20





Find the option which should replace (?)

Good : Bad :: Roof : ?

अच्छा: बुरा :: छत:?

- A. Walls / दीवारों
- B. Pillars / खंभे
- C. Floor / फर्श
- D. Window / खिड़की





Find the odd one out(?)

- A. F3**
- B. A8**
- C. V4**
- D. J8**





Find the missing term(?)

9 : 261 :: 8 : ?

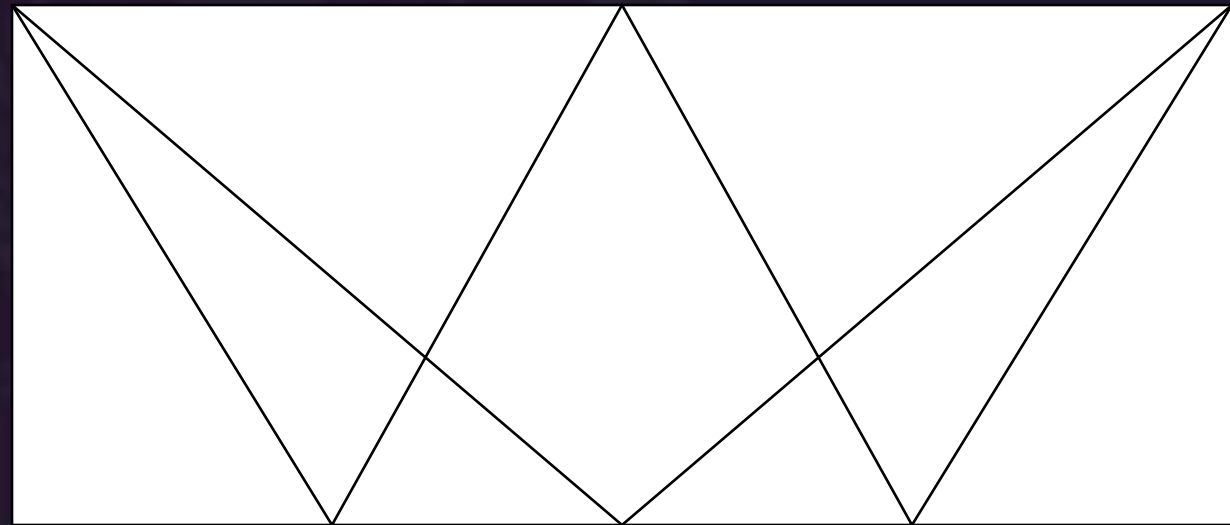
- (A) 621
- (B) 821
- (C) 496
- (D) 312





Find number of triangle in the given figure ?
दी गई आकृति में त्रिभुज की संख्या ज्ञात कीजिए?

- (A) 12
- (B) 14
- (C) 20
- (D) 16





Find the missing one (?)

14 : 3 :: 91 : ?

- (A) 4
- (B) 5
- (C) 6
- (D) 7






Find number of triangle in the given figure ?

दी गई आकृति में त्रिभुज की संख्या ज्ञात कीजिए?

- (A) 09
- (B) 26
- (C) 25
- (D) 31 or more





Find the odd one out(?)


- A. 13 : 29**
- B. 9 : 17**
- C. 7 : 11**
- D. 11 : 25**





Find the missing :-

- (A) 928
- (B) 686
- (C) 430
- (D) 324





Find the WRONG ONE :-

EC , H , HF , N , KI , U

- (A) HF**
- (B) EC**
- (C) N**
- (D) U**





Find the missing :-

PURPLE : OWOTGK :: GREEN

- (A) FTBBI**
- (B) FTBII**
- (C) FTBJI**
- (D) FTBIJ**





Find the missing :-



Dog , Goat , Non vegetarian / कुत्ता, बकरी, मांसाहारी



Find the missing :-

- (A) 9
- (B) 7
- (C) 10
- (D) 8

4	5	6
5	6	7
9	4	?





Q.. Statement :

Some Cats are Rats.

All bats are tables.

All Rats are Bats.

Conclusions :

(I) Some Cats are bats

(II) All tables are rats

प्र.. कथन :

कुछ बिलिया चूहे हैं।

सभी चमगादड़ टेबल हैं।

सभी चूहे बल्ले हैं।

निष्कर्ष:

(I) कुछ बिलियों चमगादड़ हैं

(II) सभी टेबल चूहे हैं



Q.. Statement :

Some ships are boats.

All boats are submarines.

Some submarines are yatches.

Conclusions :

(I) Some ships are yatches.

(II) Some submarines are ships.

प्र.. कथन :

कुछ जहाज नौकाएं हैं।

सभी नाव पनडुब्बी हैं।

कुछ पनडुब्बी नौकाएं हैं।

निष्कर्ष:

(I) कुछ जहाज नौका हैं।

(II) कुछ पनडुब्बियां जहाज हैं।