

RRB NTPC CBT 2/GROUP D



REASONING

अबकी बार **RAILWAY** पार

Complete Revision



LIVE 7:30 PM





Don't Let Your Studies Get Impacted By COVID-19 Pandemic

Stay Home & Study Online With Mahendras Hybrid Model

Features



Offline Classes



Live Interactive Online Classes



Same Faculty



Same Batch



Same Batch Timing



Online Library Facility



Recorded Video



PDFs



Classes In Both Model

CONTACT US:

1800-103-5225

www.mahendras.org





UPCOMING ONLINE BATCHES

December 2021

01 Dec 2021

08:00 AM to 10:00 AM

LIVE PREMIUM GREEN CARD
(BANK-PO & CLERK)

05:30 PM to 07:30 PM

LIVE PREMIUM GREEN CARD
(BANK-PO & CLERK)

01:00 PM to 03:00 PM

LIVE PREMIUM SILVER CARD
(SSC CGL & CHSL)

BILINGUAL

08 Dec 2021

10:30 AM to 12:30 PM

LIVE PREMIUM GREEN CARD
(BANK-PO & CLERK)

03:00 PM to 05:00 PM

LIVE PREMIUM GREEN CARD
(BANK-PO & CLERK)

08:00 AM to 10:00 AM

LIVE PREMIUM SILVER CARD
(SSC CGL & CHSL)

BILINGUAL

15 Dec 2021

01:00 PM to 03:00 PM

LIVE PREMIUM GREEN CARD
(BANK-PO & CLERK)

10:30 AM to 12:30 PM

LIVE PREMIUM SILVER CARD
(SSC CGL & CHSL)

BILINGUAL

22 Dec 2021

08:00 AM to 10:00 AM

LIVE PREMIUM GREEN CARD
(BANK-PO & CLERK)

07:30 PM to 09:30 PM

LIVE PREMIUM SILVER CARD
(SSC CGL & CHSL)

BILINGUAL

29 Dec 2021

10:30 AM to 12:30 PM

LIVE PREMIUM GREEN CARD
(BANK-PO & CLERK)

07:30 PM to 09:30 PM

LIVE PREMIUM GREEN CARD
(BANK-PO & CLERK)

03:00 PM to 05:00 PM

LIVE PREMIUM SILVER CARD
(SSC CGL & CHSL)

BILINGUAL



RRB NTPC Stage-2 Exam Pattern

Sections	No. of Questions	Total Marks	Duration
Mathematics	35	35	90 minutes
General Intelligence and Reasoning	35	35	
General Awareness	50	50	
Total	120	120	



HITLAR DIDI OFFICIAL 12 hours ago

मां बाप हमें "शहजादों" की तरह पालते हैं
लिहाजा हमारा फर्ज है कि बुढ़ापे में हम उन्हें
"बादशाहों" की तरह रखें ❤️

..* ❄ *..

Read more

👍 2 🗨️ REPLY



🌸 **PUJA KUNDU** 🌸 12 hours ago

The ans is -----LMNI....sandar session🔥🔥🔥thank you sir for the session 🙏

👍 1 🗨️ REPLY

➤ [View reply from Mahendras : Online Videos For Govt. Exams](#)



ANGAD KUMAR 12 hours ago

Thank you sir ji

👍👍🍷🍷❤️

Super session

HW =option (B)...

Read more

👍 1 🗨️ REPLY

➤ [View reply from Mahendras : Online Videos For Govt. Exams](#)



Viśhñù Güptâ 12 hours ago

The Right Ans LMNI very nice session sir Thank you 🙏 sir love you 🍷 sir

👍 1 🗨️ REPLY

➤ [View reply from Mahendras : Online Videos For Govt. Exams](#)



Shahzada Jalal 9 hours ago

b

👍 1 🗨️ REPLY

➤ [View reply from Mahendras : Online Videos For Govt. Exams](#)



SANIA _____ 3 hours ago

Dhaansu session sir 🙏🙏🙏🙏
LMNI🔥🔥🔥

👍 1 💬 REPLY

➤ [View reply from Mahendras : Online Videos For Govt. Exams](#)



DEEKSHA SHARMA 12 hours ago

Home work answer is option b
very nice session sir ji 🙏🙏🙏🙏

👍 1 💬 REPLY

➤ [View reply from Mahendras : Online Videos For Govt. Exams](#)



Chhavi Saxena 12 hours ago

Home work answer is option B

👍 1 💬 REPLY

➤ [View reply from Mahendras : Online Videos For Govt. Exams](#)



Devesh Trivedi 11 hours ago

LMNI RIGHT ANSWER

👍 1 💬 REPLY

➤ [View reply from Mahendras : Online Videos For Govt. Exams](#)



Kapil Bhagat 12 hours ago

B

👍 💬 REPLY



अनुराग (anurag) 11 hours ago

LMNI

2 REPLY

[View reply from Mahendras : Online Videos For Govt. Exams](#)



Mannveer Singh 11 hours ago

B

1 REPLY

[View reply from Mahendras : Online Videos For Govt. Exams](#)



Mirza Sahil jatt 12 hours ago

B

1 REPLY

[View reply from Mahendras : Online Videos For Govt. Exams](#)



puspranjan singh 12 hours ago

B

1 REPLY

[View reply from Mahendras : Online Videos For Govt. Exams](#)



Preeti 12 hours ago

B

1 REPLY

[View reply from Mahendras : Online Videos For Govt. Exams](#)

Find the option which should replace (?)

PARK: ZKPI :: NORM : ?

- (A) LMDJ
- (B) LMNI
- (C) LNIJ
- (D) LMSJ



7 Delegates are sitting around a circular conference table P , R , S , T , U , V and W are the delegates and they grouped to discuss an impending meeting. P is the neighbor of Both T and U . S sits on the immediate right of U . There is one person sitting between S and W but he is not V.

7 प्रतिनिधि एक परिपत्र सम्मेलन की मेज के चारों ओर बैठे हैं, P, R, S, T, U, V और W प्रतिनिधि हैं और उन्होंने आसन्न बैठक पर चर्चा करने के लिए समूहबद्ध किया। P, T और U दोनों का पड़ोसी है। S, U के तत्काल दायें बैठता है। S और W के बीच एक व्यक्ति बैठा है लेकिन वह V नहीं है।

Who is the neighbor of V ?

V का पड़ोसी कौन है?

- (A) P
- (B) T
- (C) R
- (D) R



Arrange the given words in the alphabetical order.

- 1. Rhetoric**
- 2. Regret**
- 3. Resignation**
- 4. Record**
- 5. Ratchet**



- (a) 2, 1, 5, 4, 3
- (b) 5, 4, 2, 3, 1
- (c) 5, 2, 1, 4, 3
- (d) 2, 5, 1, 4, 3

Find the option which should replace (?)

CAB = 13

FEED = 41

JADE = ?

A. 35

B. 43

C. 41

D. 45



Find the option which should replace (?)

UNITED : 1/2 :: ORIGIN : ?

- A. 2/5
- B. 3/5
- C. 1/2
- D. 3/7



A corner of a napkin is cut . How many corner of that napkin survived.

एक नैपकिन के एक कोने को काट दिया जाता है। उस नैपकिन के कितने कोने बचे?

- a) 3
- b) 4
- c) 5
- d) 6

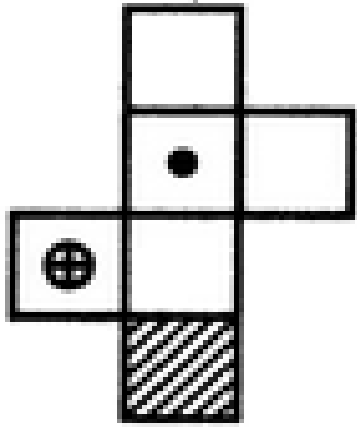


Find the odd one out(?)

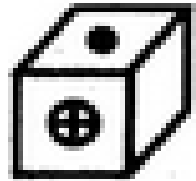
- A. 2047**
- B. 4702**
- C. 6041**
- D. 4306**



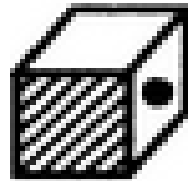
Choose the box that is similar to the box formed from the given sheet of paper (X).



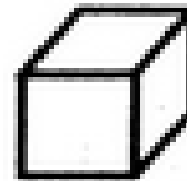
(X)



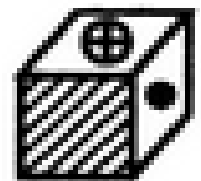
(1)



(2)



(3)

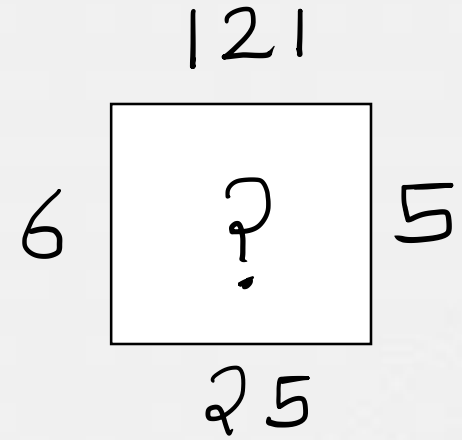
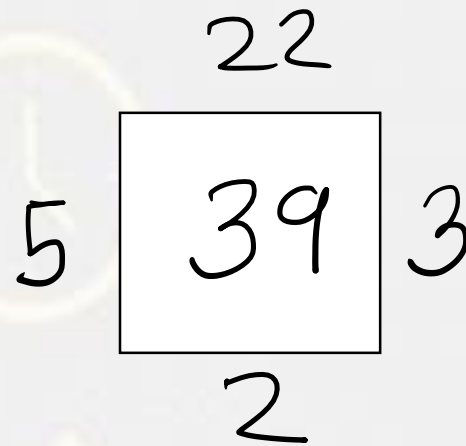
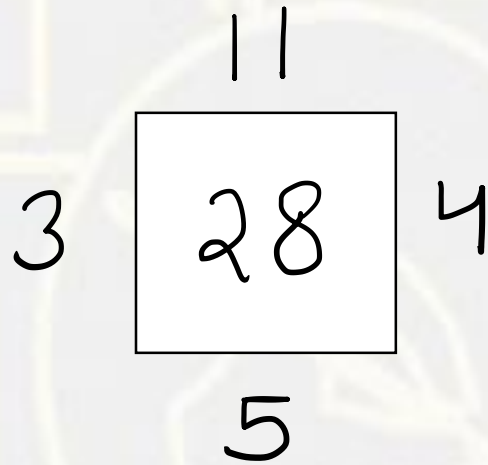


(4)

- A. 1 only
- B. 1 and 3 only
- C. 1, 3 and 4 only
- D. 1, 2, 3 and 4



Find the option which should replace (?)



- A. 176
- B. 115
- C. 157
- D. 131



A man is 24 years older than his son . In two years , his age will be twice the age of his son . What is the present age of his son ?

एक आदमी अपने बेटे से 24 साल बड़ा है। दो साल में उनकी उम्र उनके बेटे से दोगुनी होगी। उनके पुत्र की वर्तमान आयु क्या है?

- A. 20 years
- B. 18 years
- C. 14 years
- D. 22 years



From the given alternative words, select the word which can be formed using the letters of the give word :

दिए गए वैकल्पिक शब्दों से, उस शब्द का चयन करें जिसे शब्द के अक्षरों का उपयोग करके बनाया जा सकता है:

REPLENISHABLE

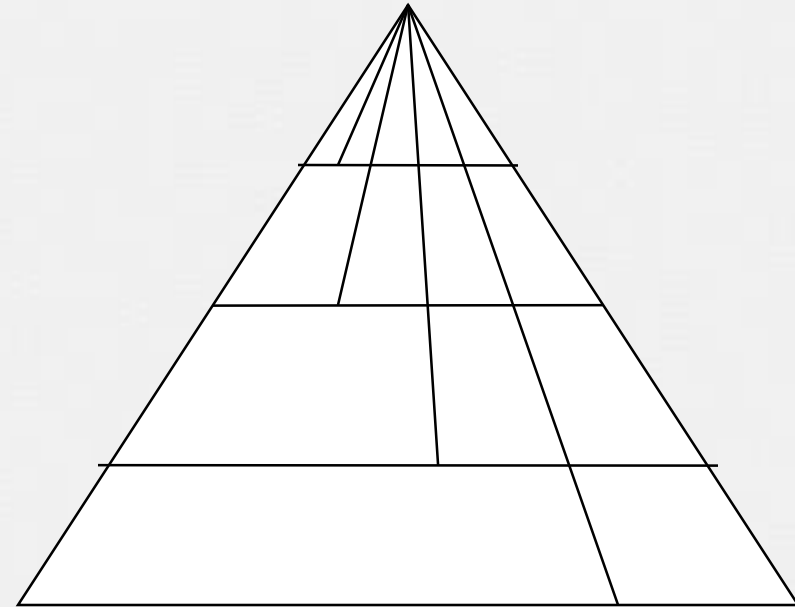
- (1) LIME
- (2) REACH
- (3) SHINE
- (4) PAPER



Find number of triangle in the given figure ?

दी गई आकृति में त्रिभुज की संख्या ज्ञात कीजिए?

- (A) 34**
- (B) 20**
- (C) 24**
- (D) 16**



If in English alphabetical series B means D , C means I , so what will be representation of D ?

यदि अंग्रेजी वर्णमाला श्रृंखला में B का अर्थ D, C मेनस I है, तो D का प्रतिनिधित्व क्या होगा?

- (A) N
- (B) K
- (C) P
- (D) O



Arrange the words given below in a meaningful sequence

1. Income / ढ ग
2. Status / सललसु
3. Education / सुललव
4. Well-being / डु ँ कु
5. Job / डकु घह

- A.1, 2, 5, 3, 4
- B.1, 3, 2, 5, 4
- C.3, 1, 5, 2, 4
- D.3, 5, 1, 2, 4



A school has 2100 students. For every 20 students there is one class monitor. The number of monitors in the school is.

एक स्कूल में 2100 छात्र हैं। प्रत्येक 20 छात्रों के लिए एक मॉनिटर है। स्कूल में मॉनिटर की संख्या है?

- (A) 100
- (B) 75
- (C) 80
- (D) 85

