

RAILWAY GROUP D

 *Mahendra's*

REASONING



≡ अंतिम प्रहार ≡

**EXPECTED
QUESTIONS**

LIVE | 08:30 PM





UPCOMING ONLINE BATCHES

August 2022

03 AUG 2022

03:00 PM to 05:00 PM

BANK ONLINE LIVE CLASS

01:00 PM to 03:00 PM

SSC ONLINE LIVE CLASS

BILINGUAL

10 AUG 2022

05:30 PM to 07:30 PM

BANK ONLINE LIVE CLASS

08:00 AM to 10:00 AM

SSC ONLINE LIVE CLASS

BILINGUAL

17 AUG 2022

08:00 AM to 10:00 AM

BANK ONLINE LIVE CLASS

05:30 PM to 07:30 PM

SSC ONLINE LIVE CLASS

BILINGUAL

24 AUG 2022

07:30 PM to 09:30 PM

BANK ONLINE LIVE CLASS

10:30 AM to 12:30 PM

SSC ONLINE LIVE CLASS

BILINGUAL

31 AUG 2022

10:30 AM to 12:30 PM

BANK ONLINE LIVE CLASS

07:30 PM to 09:30 PM

SSC ONLINE LIVE CLASS

BILINGUAL

10 AUG 2022

02:00 PM to 04:00 PM

BANK ONLINE LIVE CLASS

BENGALI+ENGLISH

31 AUG 2022

06:30 PM to 08:30 PM

BANK ONLINE LIVE CLASS


BENGALI+ENGLISH



www.mahendras.org



7052477777/7052577777



Vishnu Gupta 20 hours ago 10 subscribers

12 is the right ans very super nice session sir thank you 🙏 sir

👍 🗨️ REPLY ▶️

▼ 🚫 • 1 REPLY



Surbhi Sinha 7 hours ago

12 🌟 🌟

👍 🗨️ REPLY ▶️




khushbu 11 hours ago

12 is the right answer

👍 🗨️ REPLY ▶️

▼ 🚫 • 1 REPLY




Puspranjan singh 20 hours ago 1 subscribers

12

👍 🗨️ REPLY ▶️

▼ 🚫 • 1 REPLY



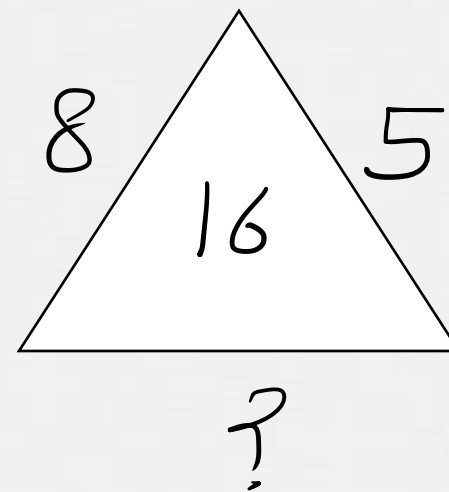
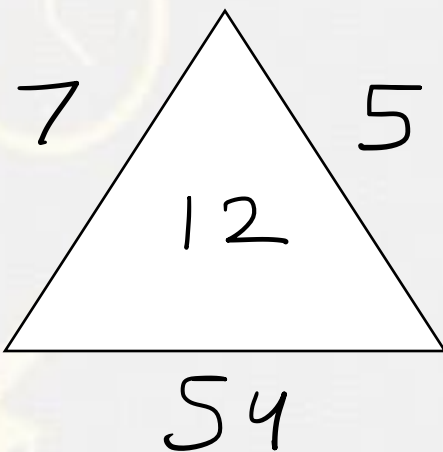
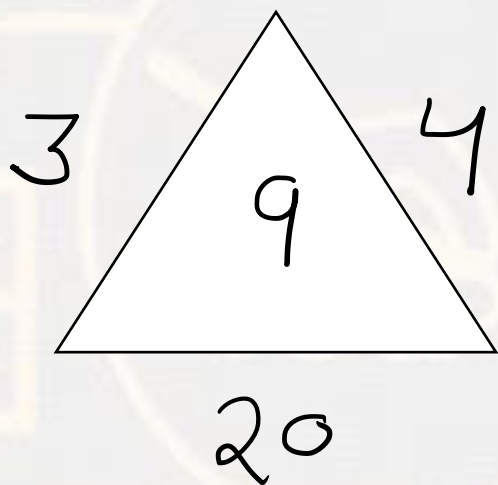
Bhavya thakur ✍️ _____ 20 hours ago 27 subscribers

12

👍 🗨️ REPLY ▶️

▼ 1 REPLY

Which number will replace the question mark ?



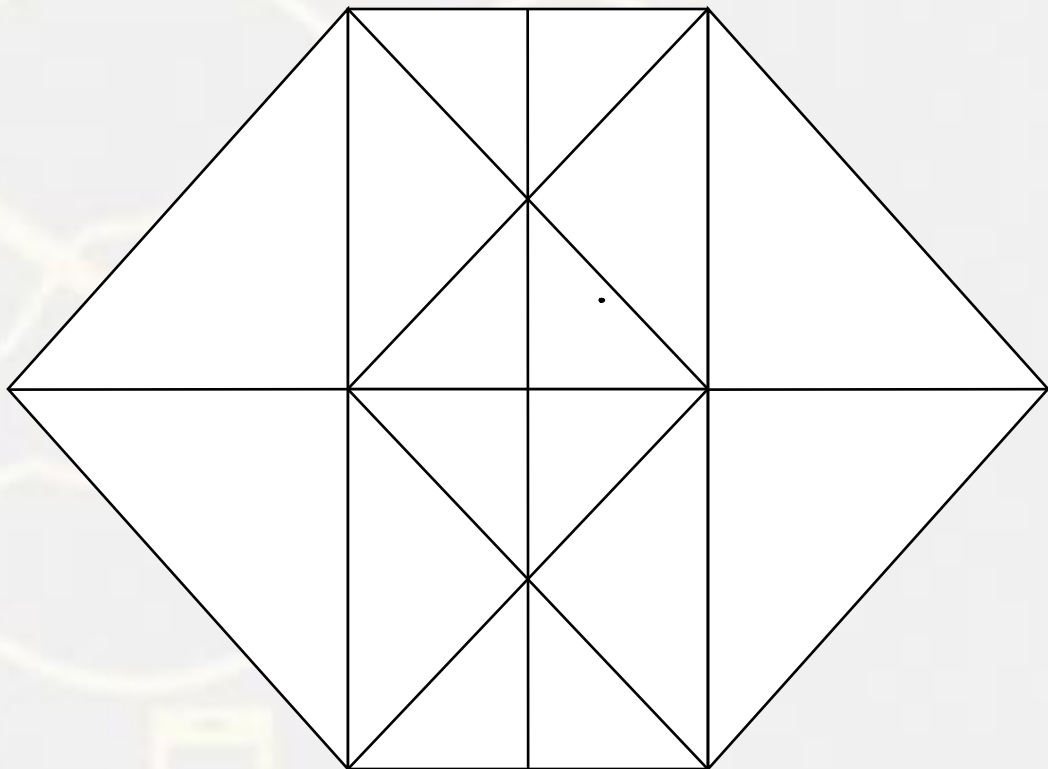
- (A) 27
- (C) 12

- (B) 25
- (D) 18



Find the number of triangle (?)

- (A) 30**
- (B) 34**
- (C) 38**
- (D) 32**



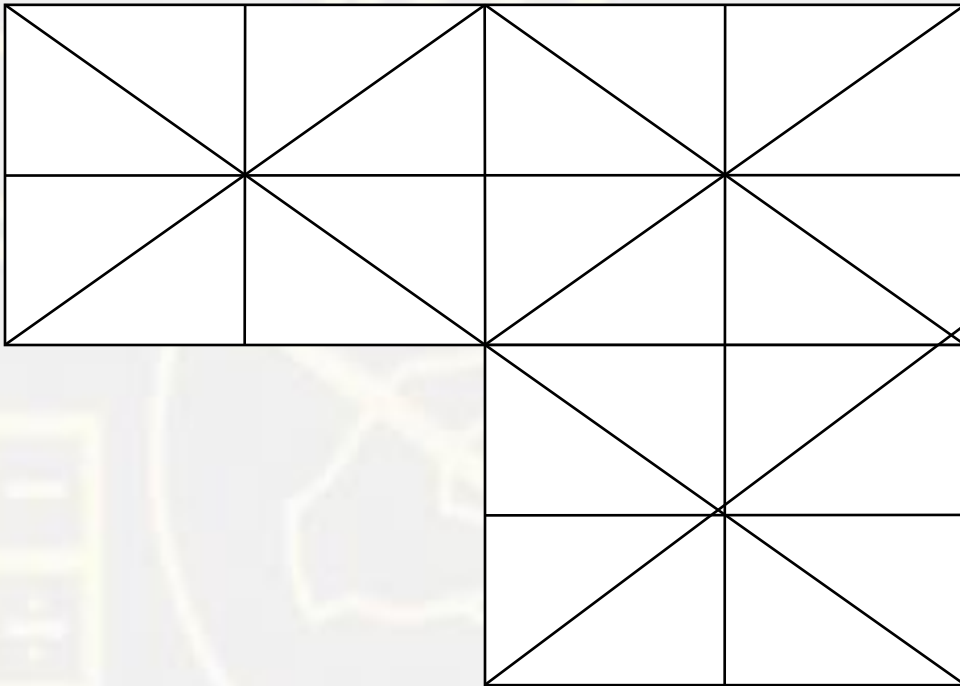
Find the missing term(?)

One , Tens , Hundred , Thousand , ? , Lakh , Ten Lakh

- (A) Ones**
- (B) Ten thousand**
- (C) Ten crore**
- (D) Crore**



How many TRIANGLES are there in this figure?



(A) 57
(C) 53

(B) 59
(D) 55

Find the missing term(?)

1137 : 441 :: 4312 : ?

- (A) 576
- (B) 676
- (C) 625
- (D) 729



Find the missing term(?)

2345 : 26 :: 3456 : ?

- (A) 42
- (B) 43
- (C) 45
- (D) 41



Find the missing term(?)

PRAYER : 6 :: GLASS : ?


- (A) 7
- (B) 9
- (C) 1
- (D) 6



Find the missing term(?)

India Gate : India :: Eiffel Tower : ?

- (A) England**
- (B) Canada**
- (C) France**
- (D) Vatican**



If in a line of students , Arjun is 12th from the right and 4th from the left end, how many students should be added to the line such that there are 48 students in the line ?

यदि छात्रों की एक पंक्ति में, अर्जुन दाईं ओर से 12 वें और बाएं छोर से 4 वें स्थान पर हैं, तो कितने छात्रों को लाइन में जोड़ा जाना चाहिए जैसे कि लाइन में 48 छात्र हैं?

- (A) 22
- (B) 23
- (C) 12
- (D) 33



Arrange in dictionary order :

1. Peoples
2. Petitions
3. Prevents
4. Protects
5. Pradeshs

- A. 4,2,5,1,3
- B. 2,5,4,1,3
- C. 1,2,5,3,4
- D. 3,1,4,5,2



Find the missing term(?)

(7 , 16 , 34) :: ?

(A) 4 , 16 , 28

(B) 7 , 12 , 29

(C) 6 , 12 , 22

(D) 5 , 12 , 26



Find the odd one (?)

(A) 3 : 30

(B) 5 : 130

(C) 8 : 520

(D) 9 : 737



Arrange in meaningful order :

1. **Hervesting / कटाई**
2. **Weeding / निराई**
3. **Ploughing / जुताई**
4. **Seeding / बोने**

- A. 4,2,1,3
- B. 2,4,1,3
- C. 1,2,3,4
- D. 3,4,2,1



Arrange in meaningful order :

1. **Hervesting / कटाई**
2. **Weeding / निराई**
3. **Ploughing / जुताई**
4. **Seeding / बोने**



- A. 4,2,1,3
- B. 2,4,1,3
- C. 1,2,3,4
- D. 3,4,2,1

Find the odd one (?)

- (A) 77 - 49
- (B) 53 - 15
- (C) 82 - 16
- (D) 16 - 07



Find the odd one (?)

- (A) 2325
- (B) 1649
- (C) 2436
- (D) 1445



Which number will replace the question mark ?

| | | |
|------------|----------|------------|
| 268 | 4 | 210 |
| 218 | ? | 166 |

(A) 13
(C) 10

(B) 7
(D) 11



Which number will replace the question mark ?

| | | |
|----------|----------|-----------|
| 3 | 2 | 11 |
| 8 | 6 | 62 |
| 6 | 7 | ? |



(A) 55
(C) 56

(B) 48
(D) 96

Find the missing term(?)

567 : 101836 :: 856 : ?

- (A) 242515**
- (B) 241236**
- (C) 241018**
- (D) 241015**

