



# UP PET MOCK TEST



**REASONING**

**30 DAYS**

**महाभ्युत्थान**

**DAY-11**



**LIVE | 06:30 PM**

**By Kuldeep Mahendras**



# UPCOMING ONLINE BATCHES

## October 2022

**05 OCT 2022**

**05:30 PM to 07:30 PM**

**BANK ONLINE LIVE CLASS**

**01:00 PM to 03:00 PM**

**SSC ONLINE LIVE CLASS**

**BILINGUAL**

**12 OCT 2022**

**10:30 AM to 12:30 PM**

**BANK ONLINE LIVE CLASS**

**07:30 PM to 09:30 PM**

**SSC ONLINE LIVE CLASS**

**BILINGUAL**

**19 OCT 2022**

**03:00 PM to 05:00 PM**

**BANK ONLINE LIVE CLASS**

**10:30 AM to 12:30 PM**

**SSC ONLINE LIVE CLASS**

**BILINGUAL**

**26 OCT 2022**

**08:00 AM to 10:00 AM**

**BANK ONLINE LIVE CLASS**

**05:30 PM to 07:30 PM**

**SSC ONLINE LIVE CLASS**

**BILINGUAL**

**05 OCT 2022**

**04:15 PM to 06:15 PM**

**BANK ONLINE LIVE CLASS**

**BENGALI+ENGLISH**

**19 OCT 2022**

**06:30 PM to 08:30 PM**

**BANK ONLINE LIVE CLASS**

**BENGALI+ENGLISH**



[www.mahendras.org](http://www.mahendras.org)



7052477777/7052577777



🍁 PUJA KUNDU 🍁 ----- 19 hours ago 8 subscribers

The ans is 30 triangles 📐 thank you sir jii....awesome session 🙏

👍 1 🗨️ REPLY 📺

▼ 🚫 • 1 REPLY



Chhavi Saxena 19 hours ago

Home work answer is option D (30)  
Very Nice Session Sir Thanku So much dear Sir 🙏🙏🙏🙏🙏

👍 🗨️ REPLY 📺

▼ 🚫 • 1 REPLY



Vishnu Gupta 16 hours ago 10 subscribers

30 triangles  
Very super duper dhashu session sir thank you 🙏 ❤️ sir

👍 🗨️ REPLY 📺

▼ 🚫 • 1 REPLY



Saloni Choudhary 17 hours ago 2 subscribers

30 triangle ....

👍 🗨️ REPLY 📺

▼ 🚫 • 1 REPLY



Chitrasen Yadav 17 hours ago

Sir cgl ka exam centre. Apne jile me ho sakta hai kya

[REPLY](#)



Pranti Patel 18 hours ago

30 triangles

[REPLY](#)

• [1 REPLY](#)



Thakur pranjul 18 hours ago

Sir -(30)- triangle ▲ ban rhe h/

1 [REPLY](#)

• [1 REPLY](#)



#Hrithik \_\_\_\_\_ 19 hours ago [29 subscribers](#)

30

1 [REPLY](#)

• [1 REPLY](#)



Chitrasen Yadav 17 hours ago

30

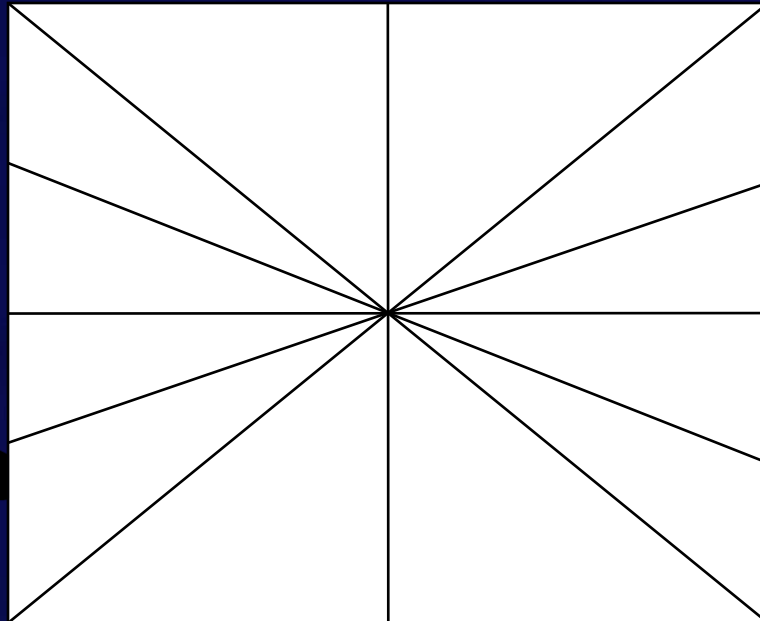
[REPLY](#)

• [1 REPLY](#)



Find the number of triangle (?)


- (A) 20
- (B) 28
- (C) 36
- (D) 30





**Find number Straight line ?**  
सीधी रेखाओं की संख्या ज्ञात कीजिए?

- (A) 19
- (B) 21
- (C) 10
- (D) 9



 Find the option which should replace (?)

VE , PK , KP , GT , DW , ?

(A) BY



(B) AZ

(C) BE

(D) BZ





Find the option which should replace (?)

(43 , 33 , 21 ) :: ?

(A) 17 , 60 , 13

(B) 24 , 16 , 48

(C) 29 , 19 , 17

(D) 17 , 16 , 13








**Find number of Triangle ?**  
त्रिभुज की संख्या ज्ञात कीजिये?

- (A) 19
- (B) 21
- (C) 10
- (D) 9



 Find the option which should replace (?)

AKP : 2561211 :: LNO : ?

- (A) 196125144
- (B) 225196144
- (C) 144225196
- (D) 415211962



 Find the option which should replace (?)

**KG : 320 :: JY : ?**

**(A) 250**

**(B) 50**

**(C) 132**

**(D) 34**





The calendar for the year 2019 will be the same for the year?

वर्ष 2019 के लिए कैलेंडर वर्ष के लिए समान होगा?

1) 2025

2) 2031

3) 2030

4) 2047



 Find the option which should replace (?)

$$11 @ 12 @ 13 = 234$$

$$24 @ 23 @ 35 = 658$$

$$31 @ 43 @ 54 = ?$$



(A) 497

(B) 974

(C) 749

(D) 479 



Find the option which should replace (?)

16 (210) 14

14 (156) 12

12 ( ? ) 10



(A) 100

(B) 110



(C) 120

(D) 90



Find the option which should replace (?)

3 ( 29 ) 247

5 ( ? ) 417

7 (79) 567



(A) 28

(B) 25

(C) 35

(D) 39





Find the option which should replace (?)

$$1 + 4 = 15$$

$$8 + 2 = 60$$

$$3 + 6 = 27$$

$$9 + 7 = ?$$



(A) 37

(B) 49

(C) 32

(D) 35







Find the option which should replace (?)

$$7 * 2 = 59$$

$$5 * 3 = 28$$

$$9 * 1 = 810$$

$$2 * 1 = 13$$

$$5 * 4 = ?$$



(A) 19



(B) 09

(C) 20

(D) 23



**Ram is fourteenth from the right end in a row of 40 boys . What is his position from the left end?**

राम 40 लड़कों की एक पंक्ति में दाहिने छोर से चौदहवें हैं। बाएं छोर से उसकी स्थिति क्या है?

**(A) 24th**

**(B) 25th**

**(C) 26th**

**(D) 27th**

