

SSC MTS/HAWALDAR/CHSL



REASONING

LIVE EXAM

तैयारी जीत की...

LIVE

08:30 PM





UPCOMING ONLINE BATCHES

July 2022

06 July 2022

05:30 PM to 07:30 PM

BANK ONLINE LIVE CLASS

03:00 PM to 05:00 PM

SSC ONLINE LIVE CLASS

BILINGUAL

06 July 2022

07:30 PM to 09:30 PM

BANK ONLINE LIVE CLASS

ENGLISH MEDIUM

06 July 2022

02:00 PM to 04:00 PM

SSC ONLINE LIVE CLASS

ENGLISH & BENGALI

13 July 2022

08:00 AM to 10:00 AM

BANK ONLINE LIVE CLASS

07:30 PM to 09:30 PM

SSC ONLINE LIVE CLASS

BILINGUAL

13 July 2022

09:15 AM to 11:15 AM

BANK ONLINE LIVE CLASS

ENGLISH & BENGALI

20 July 2022

01:00 PM to 03:00 PM

BANK ONLINE LIVE CLASS

10:30 AM to 12:30 PM

SSC ONLINE LIVE CLASS

BILINGUAL

27 July 2022

10:30 AM to 12:30 PM

BANK ONLINE LIVE CLASS

08:00 AM to 10:00 AM

SSC ONLINE LIVE CLASS

BILINGUAL

27 July 2022

07:00 AM to 09:00 AM

BANK ONLINE LIVE CLASS

ENGLISH & BENGALI



www.mahendras.org



7052477777/7052577777



In a certain code language, SMART is written as UKCPV. What will be the code for WONDER in that code language?

एक निश्चित कोड भाषा में, SMART को UKCPV लिखा जाता है, तो WONDER के लिए उसी कोड भाषा में क्या कोड होगा?

- A. YMPVRT
- B. YMPBGP
- C. YMPBFP
- D. YMBPPG

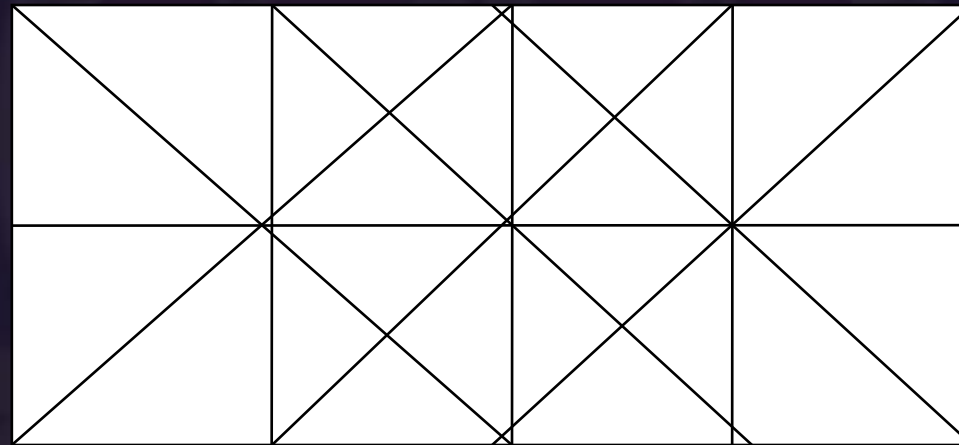




Find number of SQUARE in the given figure ?
दी गई आकृति में वर्ग की संख्या ज्ञात कीजिए?



- (A) 10
- (B) 20
- (C) 16
- (D) NOT





Find the option which should replace (?)

20 , 20 , 24 , 42 , 90 , ?

- A. 100**
- B. 132**
- C. 190**
- D. 150**



Q. In a row A is 12th from left and B is 16th from right and there are 5 members between A & B then what is total no?

एक पंक्ति में A बाईं ओर से 12 वें स्थान पर है और B दाये ओर से 16 वें स्थान पर है और A और B के बीच 5 सदस्य हैं तो कुल संख्या क्या है?

- (1) 33**
- (2) 21**
- (3) 10**
- (4) Either 33 or 21**
- (5) None of these**





Find the option which should replace (?)

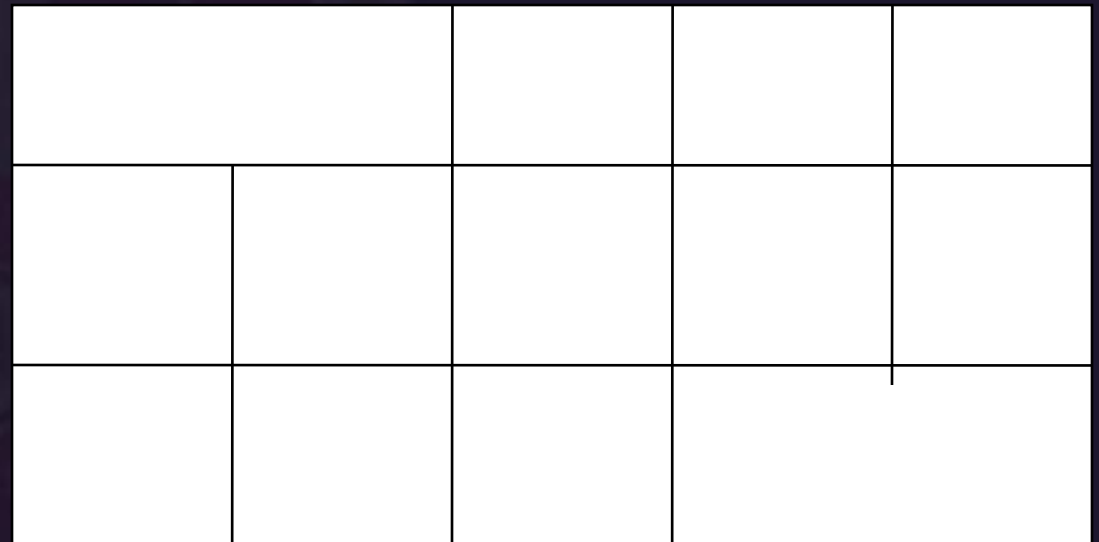
184 : 207 :: 208 : ?

- A. 235**
- B. 344**
- C. 237**
- D. 234**



Find number of SQUARE in the given figure
दी गई आकृति में वर्ग की संख्या ज्ञात कीजिए?

- (A) 16
- (B) 15
- (C) More than 16
- (D) NOT





Find the option which should replace (?)

9143 : 9963 :: 6731 : ?

- A. 1368
- B. 5666
- C. 8964
- D. 9694



Which of the following diagrams indicates the best relation between (Sweet , Sugar , Salt , Jaggery) / (मीठा, चीनी, नमक, गुड़)



A.

B

.C

.D.



Find the option which should replace (?)

289	144	361
49	?	81

- A. 25**
- B. 361**
- C. 121**
- D. 64**



Find the option which should replace (?)

Minimum : Maximum :: ? : ?

- A. Happy : Glad**
- B. Worst : Best**
- C. First : Second**
- D. Sad : Angry**



Find the option which should replace (?)

176 : 14936 :: 549 : ?

- A. 457936**
- B. 251680**
- C. 251681**
- D. 512680**



Find the option which should replace (?)

$$2 + 2 = 5$$

$$3 + 3 = 7$$

$$3 + 6 = 11$$

$$5 + 25 = ?$$

A. 32

B. 34

C. 35

D. 40

- 5



Find the option which should replace (?)

PARK: ZKPI :: NORM : ?

- (A) LMDJ
- (B) LMNI
- (C) LNIJ
- (D) LMSJ



Find the option which should replace (?)

1, 10, 28, 91, 370, ?

- (A) 1070
- (B) 1850
- (C) 1855
- (D) 1775



Find the option which should replace (?)

23: 25 :: 35 : ?

- (A) 73
- (B) 64
- (C) 25
- (D) 81



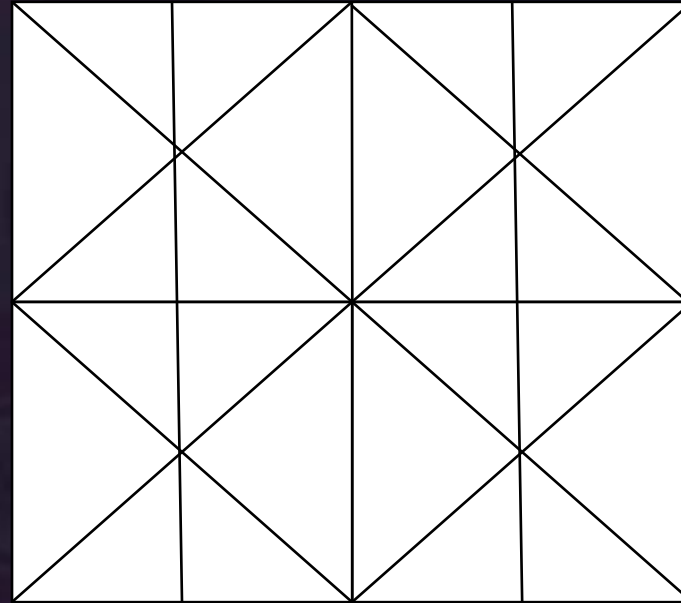
Find the option which should replace (?)

$$12 : 441 :: 21 : ?$$

- (A) 114
- (B) 400
- (C) 144
- (D) 441



Find number of minimum number of lines in the given figure ?



- (A) 12
- (B) 13
- (C) 14
- (D) NOT





Find the option which should replace (?)

$$5/23 : 7/47 :: 11/119 : ?$$

- A. 13/165
- B. 17/167
- C. 15/171
- D. 13/167



Find the ODD option (?)

- A. 24 : 121**
- B. 14 : 49**
- C. 16 : 64**
- D. 34 : 289**



Find the option which should replace (?)

CAT = 23

DEG = 55

HERO = ?

A. 320

B. 340

C. 520

D. 180





Find the option which should replace (?)

8 : 60 :: 6 : ?

- (A) 28
- (B) 31
- (C) 35
- (D) 33



Find the option which should replace (?)

APPLE : 26 :: MANGO : ?

- (A) 226**
- (B) 230**
- (C) 100**
- (D) 225**